

UNIVERSITY OF CAMBRIDGE INTERNATIONAL EXAMINATIONS  
International General Certificate of Secondary Education

**CHEMISTRY**



Paper 3 (Extended)

**0620/03**

October/November 2005

**1 hour 15 minutes**

Candidates answer on the Question Paper.  
No Additional Materials required.

Candidate  
Name

Centre  
Number

--	--	--	--	--

Candidate  
Number

--	--	--	--

**READ THESE INSTRUCTIONS FIRST**

Write your Centre number, candidate number and name on all the work you hand in.

Write in dark blue or black pen.

You may use a pencil for any diagrams, graphs or rough working.

WRITE IN THE BOXES PROVIDED ON THE QUESTION PAPER

DO **NOT** WRITE IN THE BARCODE.

DO **NOT** WRITE IN THE GREY AREAS BETWEEN THE PAGES.

Do not use staples, paper clips, highlighters, glue or correction fluid.

You may use a calculator.

Answer **all** questions.

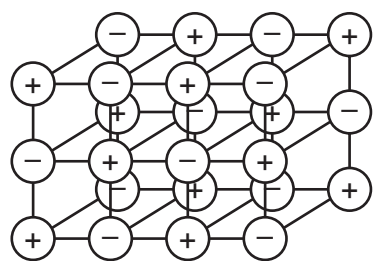
The number of marks is given in brackets [ ] at the end of each question or part question.

A copy of the Periodic Table is printed on page 16.

For Examiner's Use	
1	
2	
3	
4	
5	
6	
7	
<b>Total</b>	

This document consists of **14** printed pages and **2** blank page.

1 (a) The structure of a typical ionic compound is a regular arrangement of positive and negative ions.



(i) What is the name of this regular arrangement of particles?  
 ..... [1]

(ii) Give **two** physical properties of ionic compounds.  
 .....  
 ..... [2]

(b) Ions are formed by electron loss or gain. The electron distribution of a magnesium atom is 2 + 8 + 2 and of a nitrogen atom is 2 + 5.

(i) Give the formula of the magnesium ion.  
 ..... [1]

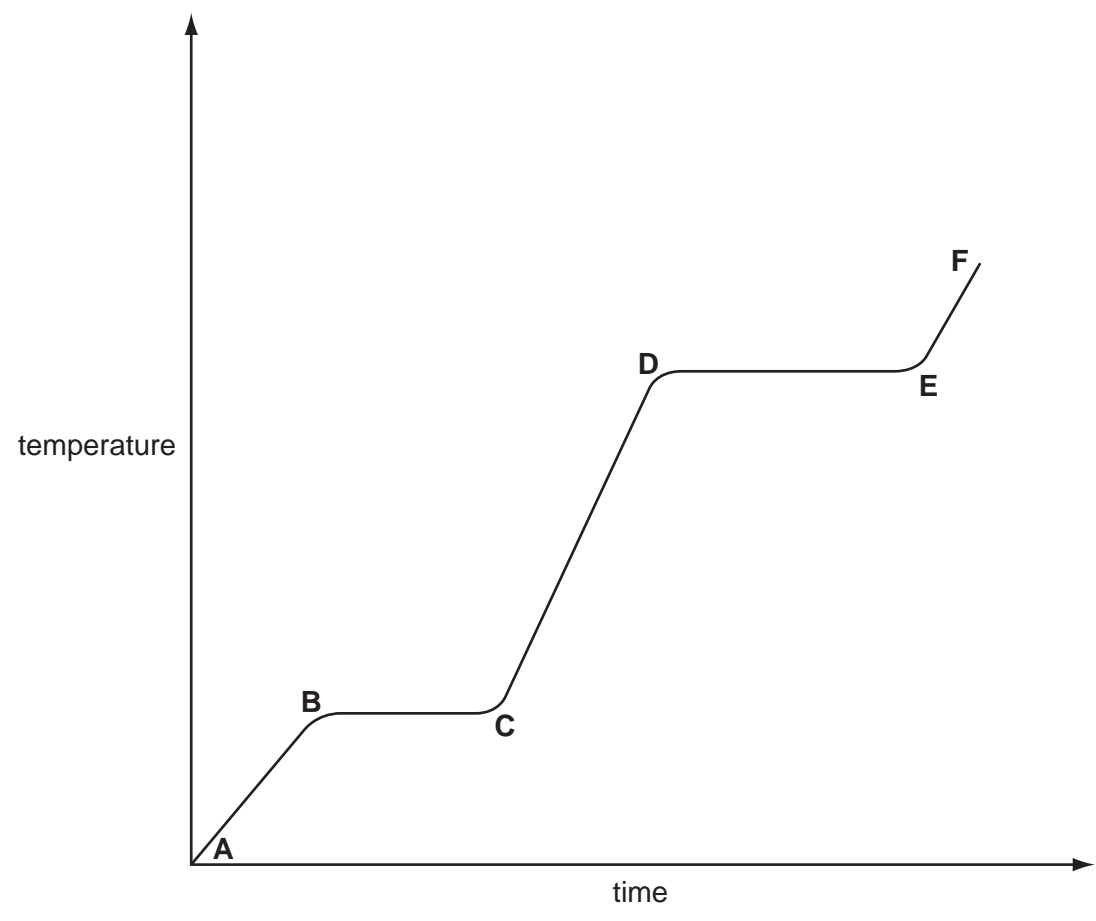
(ii) Give the formula of the nitride ion.  
 ..... [1]

(iii) What is the formula of the ionic compound, magnesium nitride?  
 ..... [1]

(iv) In this compound there is an ionic bond. Why are the two ions attracted to each other?  
 ..... [1]

2 Ethanoic acid is a colourless liquid at room temperature. It has the typical acid properties and forms compounds called ethanoates.

(a) A pure sample of ethanoic acid is slowly heated from 0°C to 150°C and its temperature is measured every minute. The results are represented on the graph below.



(i) Name the change that occurs in the region D to E.  
..... [1]

(ii) What would be the difference in the region B to C if an impure sample had been used?  
..... [1]

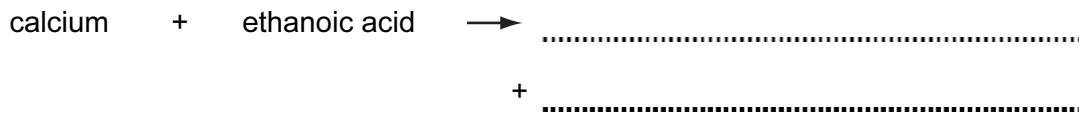
(iii) Sketch on the graph how the line would continue if the acid was heated to a higher temperature.  
[1]

(iv) Complete the following table that compares the separation and movement of molecules in regions **C** to **D** with those in **E** to **F**.

	<b>C to D</b>	<b>E to F</b>
separation (distance between particles)	.....	.....
movement of particles	random and slow	..... .....
Can particles move apart to fill any volume?	.....	.....

[5]

(b) Complete the word equations for the reactions of ethanoic acid.

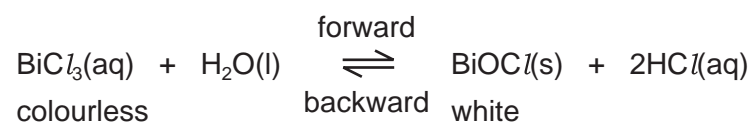


(c) Write the symbol equation for the reaction between ethanoic acid and sodium hydroxide.

..... [2]

3 Reversible reactions can come to equilibrium. They have both a forward and a backward reaction.

(a) When water is added to an acidic solution of bismuth(III) chloride, a white precipitate forms and the mixture slowly goes cloudy.



(i) Explain why the rate of the forward reaction decreases with time.

.....  
..... [2]

(ii) Why does the rate of the backward reaction increase with time?

.....  
..... [1]


(iii) After some time why does the appearance of the mixture remain unchanged?

.....  
..... [2]

(iv) When a few drops of concentrated hydrochloric acid are added to the cloudy mixture, it changes to a colourless solution. Suggest an explanation.

.....  
..... [2]

(b) Both of the following reactions are reversible.



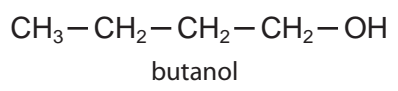
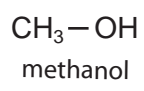
(i) Suggest a reason why an increase in pressure does not affect the position of equilibrium for reaction 1.

..... [1]

(ii) What effect would an increase in pressure have on the position of equilibrium for reaction 2? Give a reason for your answer.

.....  
..... [2]

4 The alcohols form a homologous series. The first member is methanol and the fourth member is butanol.



(a) (i) Give **two** general characteristics of a homologous series.

.....  
.....  
..... [2]

(ii) Calculate the mass of one mole of the C<sub>8</sub> alcohol.

.....  
..... [2]

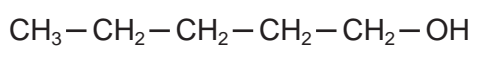
(b) Give the name and structural formula of the third member of this series.

name ..... [1]

structural formula

[1]

(c) The structural formula of the fifth member, pentan-1-ol, is drawn below.



(i) Draw the structural formula of an isomer of this alcohol.

[1]

(ii) Predict the names of the product(s) formed when pentan-1-ol

- reacts with an excess of oxygen,

..... and ..... [1]

- is dehydrated to form an alkene,

..... [1]

- is oxidised by acidified potassium dichromate(VI).

..... [1]



5 Strontium and zinc are both metals with a valency of 2. Strontium is more reactive than calcium. Its chemistry is similar to that of calcium.

(a) (i) Complete the following table that shows the number of protons, electrons and neutrons in each particle.

particle	protons	electrons	neutrons
$^{88}\text{Sr}$			
$^{90}\text{Sr}$			
$^{65}\text{Zn}^{2+}$			

[3]

(ii) Explain why  $^{88}\text{Sr}$  and  $^{90}\text{Sr}$  are isotopes.

..... [1]

(iii) Complete the electron distribution of an atom of strontium.

2 + 8 + 18 + ..... + ..... [1]


(b) The major ore of zinc is zinc blende, ZnS.

(i) Describe how zinc is extracted from zinc blende.

.....  
.....  
..... [2]

(ii) Give a use of zinc.

..... [1]



(c) The major ore of strontium is its carbonate, SrCO<sub>3</sub>. Strontium is extracted by electrolysis of its molten chloride.

(i) Name the reagent that will react with the carbonate to form the chloride.  
..... [1]

(ii) The electrolysis of molten strontium chloride produces strontium metal and chlorine. Write ionic equations for the reactions at the electrodes.

negative electrode (cathode) .....

positive electrode (anode) ..... [2]

(iii) One of the products of the electrolysis of concentrated aqueous strontium chloride is chlorine. Name the other two.

..... [2]

(d) Both metals react with water.

(i) Write a word equation for the reaction of zinc and water and state the reaction conditions.

word equation ..... [1]

conditions ..... [2]

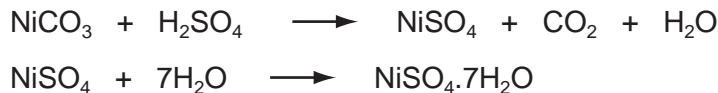
(ii) Write an equation for the reaction of strontium with water and give the reaction condition.

equation ..... [2]

condition ..... [1]

6 (a) The following method is used to make crystals of hydrated nickel sulphate.

An excess of nickel carbonate, 12.0 g, was added to 40 cm<sup>3</sup> of sulphuric acid, 2.0 mol/dm<sup>3</sup>. The unreacted nickel carbonate was filtered off and the filtrate evaporated to obtain the crystals.



Mass of one mole of NiSO<sub>4</sub>·7H<sub>2</sub>O = 281 g  
Mass of one mole of NiCO<sub>3</sub> = 119 g

(i) Calculate the mass of unreacted nickel carbonate.

Number of moles of H<sub>2</sub>SO<sub>4</sub> in 40 cm<sup>3</sup> of 2.0 mol/dm<sup>3</sup> acid = 0.08

Number of moles of NiCO<sub>3</sub> reacted = .....

Mass of nickel carbonate reacted = ..... g

Mass of unreacted nickel carbonate = ..... g [3]

(ii) The experiment produced 10.4 g of hydrated nickel sulphate. Calculate the percentage yield.

The maximum number of moles of NiSO<sub>4</sub>·7H<sub>2</sub>O that could be formed =

.....

The maximum mass of NiSO<sub>4</sub>·7H<sub>2</sub>O that could be formed = ..... g

The percentage yield = ..... % [3]

(b) In the above method, a soluble salt was prepared by neutralising an acid with an insoluble base. Other salts have to be made by different methods.

(i) Give a brief description of how the soluble salt, rubidium sulphate could be made from the soluble base, rubidium hydroxide.

.....

.....

.....

..... [3]

(ii) Suggest a method of making the insoluble salt, calcium fluoride.

.....

.....

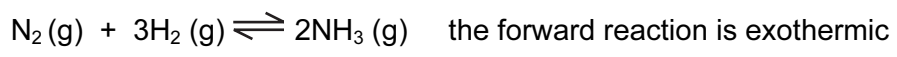
.....

..... [3]

For  
inner's

www.PapaCambridge.com

7 In 1909, Haber discovered that nitrogen and hydrogen would react to form ammonia. The yield of ammonia was 8%.



catalyst platinum  
temperature 600 °C  
pressure 200 atm

(a) Describe how hydrogen is obtained for the modern process.

.....  
..... [2]

(b) (i) What is the catalyst in the modern process?

..... [1]

(ii) Explain why the modern process, which uses a lower temperature, has a higher yield of 15%.

.....  
..... [2]

(c) (i) Complete the following table that describes the bond breaking and forming in the reaction between nitrogen and hydrogen to form ammonia.

bonds	energy change /kJ	exothermic or endothermic
1 mole of N ≡ N broken	+945	.....
3 moles of ..... broken	+1308	.....
6 moles of N – H formed	-2328	.....

[3]

(ii) Explain, using the above data, why the forward reaction is exothermic.

.....  
..... [2]





**DATA SHEET**  
**The Periodic Table of the Elements**

		Group																																																																																																																																																																																																																																																																																										
I	II	III	IV	V	VI	VII	0					0																																																																																																																																																																																																																																																																																
7 <b>Li</b> Lithium 3	9 <b>Be</b> Beryllium 4	1 <b>H</b> Hydrogen 1	11 <b>B</b> Boron 5	12 <b>C</b> Carbon 6	14 <b>N</b> Nitrogen 7	16 <b>O</b> Oxygen 8	19 <b>F</b> Fluorine 9	20 <b>Ne</b> Neon 10	23 <b>Na</b> Sodium 11	24 <b>Mg</b> Magnesium 12	27 <b>Al</b> Aluminium 13	28 <b>Si</b> Silicon 14	31 <b>P</b> Phosphorus 15	32 <b>S</b> Sulphur 16	35.5 <b>Cl</b> Chlorine 17	40 <b>Ar</b> Argon 18	39 <b>K</b> Potassium 19	40 <b>Ca</b> Calcium 20	45 <b>Sc</b> Scandium 21	48 <b>Ti</b> Titanium 22	51 <b>V</b> Vanadium 23	52 <b>Cr</b> Chromium 24	55 <b>Mn</b> Manganese 25	56 <b>Fe</b> Iron 26	59 <b>Co</b> Cobalt 27	59 <b>Ni</b> Nickel 28	64 <b>Cu</b> Copper 29	65 <b>Zn</b> Zinc 30	70 <b>Ga</b> Gallium 31	73 <b>Ge</b> Germanium 32	75 <b>As</b> Arsenic 33	79 <b>Se</b> Selenium 34	80 <b>Br</b> Bromine 35	84 <b>Kr</b> Krypton 36	85 <b>Rb</b> Rubidium 37	88 <b>Sr</b> Strontium 38	89 <b>Y</b> Yttrium 39	91 <b>Zr</b> Zirconium 40	93 <b>Nb</b> Niobium 41	96 <b>Mo</b> Molybdenum 42	101 <b>Ru</b> Ruthenium 44	103 <b>Rh</b> Rhodium 45	106 <b>Pd</b> Palladium 46	108 <b>Ag</b> Silver 47	112 <b>Cd</b> Cadmium 48	115 <b>In</b> Indium 49	119 <b>Sn</b> Tin 50	122 <b>Sb</b> Antimony 51	127 <b>I</b> Iodine 53	131 <b>Xe</b> Xenon 54	133 <b>Cs</b> Caesium 55	137 <b>Ba</b> Barium 56	139 <b>La</b> Lanthanum 57	178 <b>Hf</b> Hafnium 72	181 <b>Ta</b> Tantalum 73	184 <b>W</b> Tungsten 74	186 <b>Re</b> Rhenium 75	190 <b>Os</b> Osmium 76	192 <b>Ir</b> Iridium 77	195 <b>Pt</b> Platinum 78	197 <b>Au</b> Gold 79	201 <b>Hg</b> Mercury 80	204 <b>Tl</b> Thallium 81	207 <b>Pb</b> Lead 82	209 <b>Bi</b> Bismuth 83	210 <b>Po</b> Polonium 84	210 <b>At</b> Astatine 85	222 <b>Rn</b> Radon 86	226 <b>Fr</b> Francium 87	226 <b>Ra</b> Radium 88	227 <b>Ac</b> Actinium 89	88 <b>Lu</b> Lutetium 89	89 <b>Hf</b> Hafnium 90	90 <b>Th</b> Thorium 90	91 <b>Pa</b> Protactinium 91	92 <b>U</b> Uranium 92	93 <b>Np</b> Neptunium 93	94 <b>Pu</b> Plutonium 94	95 <b>Am</b> Americium 95	96 <b>Cm</b> Curium 96	97 <b>Bk</b> Berkelium 97	98 <b>Cf</b> Californium 98	99 <b>Es</b> Einsteinium 99	100 <b>Fm</b> Fermium 100	101 <b>Md</b> Mendelevium 101	102 <b>No</b> Nobelium 102	103 <b>Lr</b> Lawrencium 103	104 <b>Rf</b> Rutherfordium 104	105 <b>Db</b> Dubnium 105	106 <b>Sg</b> Seaborgium 106	107 <b>Bh</b> Bohrium 107	108 <b>Hs</b> Hassium 108	109 <b>Mt</b> Meitnerium 109	110 <b>Ds</b> Darmstadtium 110	111 <b>Rg</b> Roentgenium 111	112 <b>Cn</b> Copernicium 112	113 <b>Nh</b> Nihonium 113	114 <b>Fl</b> Flerovium 114	115 <b>Mc</b> Moscovium 115	116 <b>Lv</b> Livermorium 116	117 <b>Ts</b> Tennessine 117	118 <b>Og</b> Oganesson 118	119 <b>Uu</b> Ununennium 119	120 <b>Uub</b> Unbinilium 120	121 <b>Uut</b> Untrium 121	122 <b>Uuq</b> Unquadrium 122	123 <b>Uuq</b> Unquadrium 123	124 <b>Uuq</b> Unquadrium 124	125 <b>Uuq</b> Unquadrium 125	126 <b>Uuq</b> Unquadrium 126	127 <b>Uuq</b> Unquadrium 127	128 <b>Uuq</b> Unquadrium 128	129 <b>Uuq</b> Unquadrium 129	130 <b>Uuq</b> Unquadrium 130	131 <b>Uuq</b> Unquadrium 131	132 <b>Uuq</b> Unquadrium 132	133 <b>Uuq</b> Unquadrium 133	134 <b>Uuq</b> Unquadrium 134	135 <b>Uuq</b> Unquadrium 135	136 <b>Uuq</b> Unquadrium 136	137 <b>Uuq</b> Unquadrium 137	138 <b>Uuq</b> Unquadrium 138	139 <b>Uuq</b> Unquadrium 139	140 <b>Uuq</b> Unquadrium 140	141 <b>Uuq</b> Unquadrium 141	142 <b>Uuq</b> Unquadrium 142	143 <b>Uuq</b> Unquadrium 143	144 <b>Uuq</b> Unquadrium 144	145 <b>Uuq</b> Unquadrium 145	146 <b>Uuq</b> Unquadrium 146	147 <b>Uuq</b> Unquadrium 147	148 <b>Uuq</b> Unquadrium 148	149 <b>Uuq</b> Unquadrium 149	150 <b>Uuq</b> Unquadrium 150	151 <b>Uuq</b> Unquadrium 151	152 <b>Uuq</b> Unquadrium 152	153 <b>Uuq</b> Unquadrium 153	154 <b>Uuq</b> Unquadrium 154	155 <b>Uuq</b> Unquadrium 155	156 <b>Uuq</b> Unquadrium 156	157 <b>Uuq</b> Unquadrium 157	158 <b>Uuq</b> Unquadrium 158	159 <b>Uuq</b> Unquadrium 159	160 <b>Uuq</b> Unquadrium 160	161 <b>Uuq</b> Unquadrium 161	162 <b>Uuq</b> Unquadrium 162	163 <b>Uuq</b> Unquadrium 163	164 <b>Uuq</b> Unquadrium 164	165 <b>Uuq</b> Unquadrium 165	166 <b>Uuq</b> Unquadrium 166	167 <b>Uuq</b> Unquadrium 167	168 <b>Uuq</b> Unquadrium 168	169 <b>Uuq</b> Unquadrium 169	170 <b>Uuq</b> Unquadrium 170	171 <b>Uuq</b> Unquadrium 171	172 <b>Uuq</b> Unquadrium 172	173 <b>Uuq</b> Unquadrium 173	174 <b>Uuq</b> Unquadrium 174	175 <b>Uuq</b> Unquadrium 175	176 <b>Uuq</b> Unquadrium 176	177 <b>Uuq</b> Unquadrium 177	178 <b>Uuq</b> Unquadrium 178	179 <b>Uuq</b> Unquadrium 179	180 <b>Uuq</b> Unquadrium 180	181 <b>Uuq</b> Unquadrium 181	182 <b>Uuq</b> Unquadrium 182	183 <b>Uuq</b> Unquadrium 183	184 <b>Uuq</b> Unquadrium 184	185 <b>Uuq</b> Unquadrium 185	186 <b>Uuq</b> Unquadrium 186	187 <b>Uuq</b> Unquadrium 187	188 <b>Uuq</b> Unquadrium 188	189 <b>Uuq</b> Unquadrium 189	190 <b>Uuq</b> Unquadrium 190	191 <b>Uuq</b> Unquadrium 191	192 <b>Uuq</b> Unquadrium 192	193 <b>Uuq</b> Unquadrium 193	194 <b>Uuq</b> Unquadrium 194	195 <b>Uuq</b> Unquadrium 195	196 <b>Uuq</b> Unquadrium 196	197 <b>Uuq</b> Unquadrium 197	198 <b>Uuq</b> Unquadrium 198	199 <b>Uuq</b> Unquadrium 199	200 <b>Uuq</b> Unquadrium 200	201 <b>Uuq</b> Unquadrium 201	202 <b>Uuq</b> Unquadrium 202	203 <b>Uuq</b> Unquadrium 203	204 <b>Uuq</b> Unquadrium 204	205 <b>Uuq</b> Unquadrium 205	206 <b>Uuq</b> Unquadrium 206	207 <b>Uuq</b> Unquadrium 207	208 <b>Uuq</b> Unquadrium 208	209 <b>Uuq</b> Unquadrium 209	210 <b>Uuq</b> Unquadrium 210	211 <b>Uuq</b> Unquadrium 211	212 <b>Uuq</b> Unquadrium 212	213 <b>Uuq</b> Unquadrium 213	214 <b>Uuq</b> Unquadrium 214	215 <b>Uuq</b> Unquadrium 215	216 <b>Uuq</b> Unquadrium 216	217 <b>Uuq</b> Unquadrium 217	218 <b>Uuq</b> Unquadrium 218	219 <b>Uuq</b> Unquadrium 219	220 <b>Uuq</b> Unquadrium 220	221 <b>Uuq</b> Unquadrium 221	222 <b>Uuq</b> Unquadrium 222	223 <b>Uuq</b> Unquadrium 223	224 <b>Uuq</b> Unquadrium 224	225 <b>Uuq</b> Unquadrium 225	226 <b>Uuq</b> Unquadrium 226	227 <b>Uuq</b> Unquadrium 227	228 <b>Uuq</b> Unquadrium 228	229 <b>Uuq</b> Unquadrium 229	230 <b>Uuq</b> Unquadrium 230	231 <b>Uuq</b> Unquadrium 231	232 <b>Uuq</b> Unquadrium 232	233 <b>Uuq</b> Unquadrium 233	234 <b>Uuq</b> Unquadrium 234	235 <b>Uuq</b> Unquadrium 235	236 <b>Uuq</b> Unquadrium 236	237 <b>Uuq</b> Unquadrium 237	238 <b>Uuq</b> Unquadrium 238	239 <b>Uuq</b> Unquadrium 239	240 <b>Uuq</b> Unquadrium 240	241 <b>Uuq</b> Unquadrium 241	242 <b>Uuq</b> Unquadrium 242	243 <b>Uuq</b> Unquadrium 243	244 <b>Uuq</b> Unquadrium 244	245 <b>Uuq</b> Unquadrium 245	246 <b>Uuq</b> Unquadrium 246	247 <b>Uuq</b> Unquadrium 247	248 <b>Uuq</b> Unquadrium 248	249 <b>Uuq</b> Unquadrium 249	250 <b>Uuq</b> Unquadrium 250	251 <b>Uuq</b> Unquadrium 251	252 <b>Uuq</b> Unquadrium 252	253 <b>Uuq</b> Unquadrium 253	254 <b>Uuq</b> Unquadrium 254	255 <b>Uuq</b> Unquadrium 255	256 <b>Uuq</b> Unquadrium 256	257 <b>Uuq</b> Unquadrium 257	258 <b>Uuq</b> Unquadrium 258	259 <b>Uuq</b> Unquadrium 259	260 <b>Uuq</b> Unquadrium 260	261 <b>Uuq</b> Unquadrium 261	262 <b>Uuq</b> Unquadrium 262	263 <b>Uuq</b> Unquadrium 263	264 <b>Uuq</b> Unquadrium 264	265 <b>Uuq</b> Unquadrium 265	266 <b>Uuq</b> Unquadrium 266	267 <b>Uuq</b> Unquadrium 267	268 <b>Uuq</b> Unquadrium 268	269 <b>Uuq</b> Unquadrium 269	270 <b>Uuq</b> Unquadrium 270	271 <b>Uuq</b> Unquadrium 271	272 <b>Uuq</b> Unquadrium 272	273 <b>Uuq</b> Unquadrium 273	274 <b>Uuq</b> Unquadrium 274	275 <b>Uuq</b> Unquadrium 275	276 <b>Uuq</b> Unquadrium 276	277 <b>Uuq</b> Unquadrium 277	278 <b>Uuq</b> Unquadrium 278	279 <b>Uuq</b> Unquadrium 279	280 <b>Uuq</b> Unquadrium 280	281 <b>Uuq</b> Unquadrium 281	282 <b>Uuq</b> Unquadrium 282	283 <b>Uuq</b> Unquadrium 283	284 <b>Uuq</b> Unquadrium 284	285 <b>Uuq</b> Unquadrium 285	286 <b>Uuq</b> Unquadrium 286	287 <b>Uuq</b> Unquadrium 287	288 <b>Uuq</b> Unquadrium 288	289 <b>Uuq</b> Unquadrium 289	290 <b>Uuq</b> Unquadrium 290	291 <b>Uuq</b> Unquadrium 291	292 <b>Uuq</b> Unquadrium 292	293 <b>Uuq</b> Unquadrium 293	294 <b>Uuq</b> Unquadrium 294	295 <b>Uuq</b> Unquadrium 295	296 <b>Uuq</b> Unquadrium 296	297 <b>Uuq</b> Unquadrium 297	298 <b>Uuq</b> Unquadrium 298	299 <b>Uuq</b> Unquadrium 299	300 <b>Uuq</b> Unquadrium 300

58-71 Lanthanoid series  
10-103 Actinoid series

a = relative atomic mass  
X = atomic symbol  
b = proton (atomic) number

The volume of one mole of any gas is 24 dm<sup>3</sup> at room temperature and pressure (r.t.p.).