

Centre Number	Candidate Number	Name
---------------	------------------	------

UNIVERSITY OF CAMBRIDGE INTERNATIONAL EXAMINATIONS
International General Certificate of Secondary Education

GEOGRAPHY

0460/02

Paper 2

October/November 2005

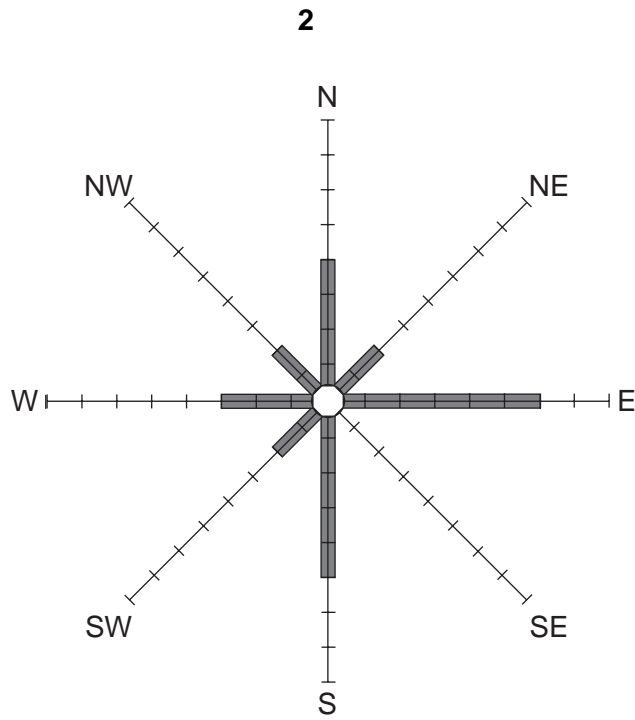
INSERT 1

1 hour 30 minutes

READ THESE INSTRUCTIONS FIRST

This insert contains Fig. 2 for Question 2, Fig. 3 and Table 1 for Question 3 and Fig. 6 for Question 5.

Write your Centre number, candidate number and name in the spaces provided and attach it to your answer paper/answer booklet.



Name of diagram

Prevailing wind

Direction of wind	N	NE	E	SE	S	SW	W	NW	Calm
Number of days	4	2	6	4	5	2	3	2	3

Fig. 2 for Question 2

Employment structure of selected countries

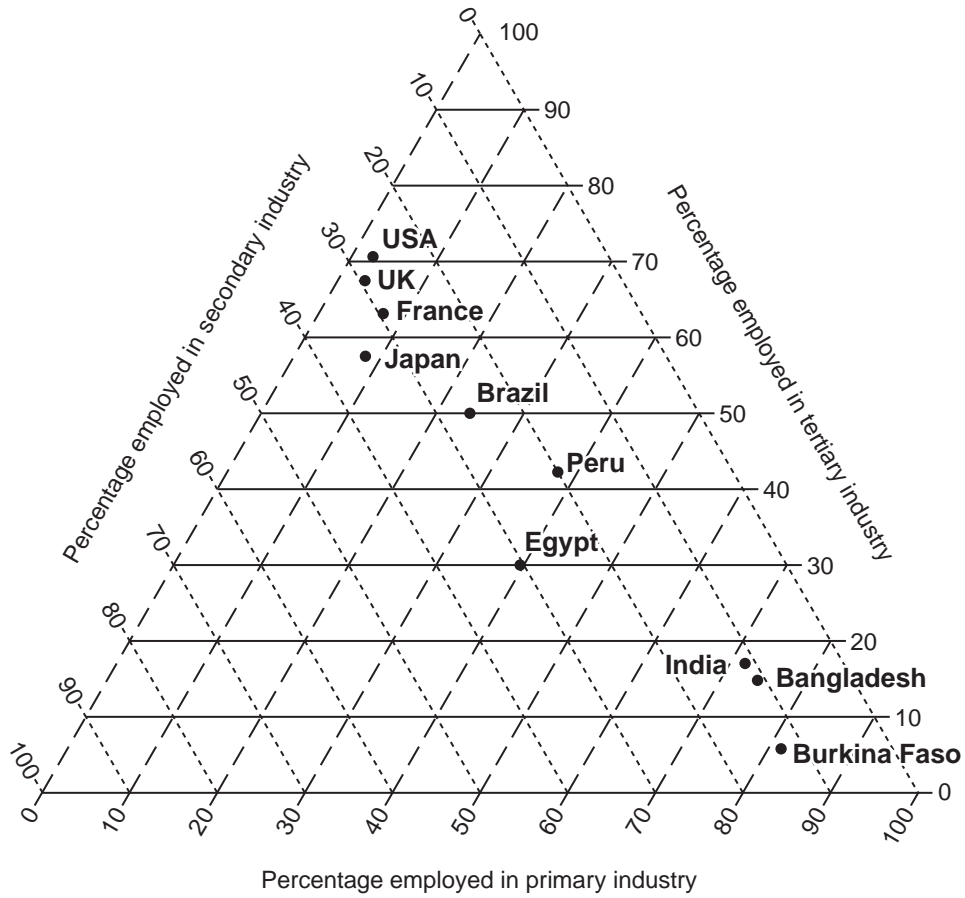


Fig. 3 for Question 3

Country	Percentage employment		
	Primary	Secondary	Tertiary
Egypt	40	30	30
	8	29	63
Bangladesh	74	11	15

Table 1 for Question 3

4

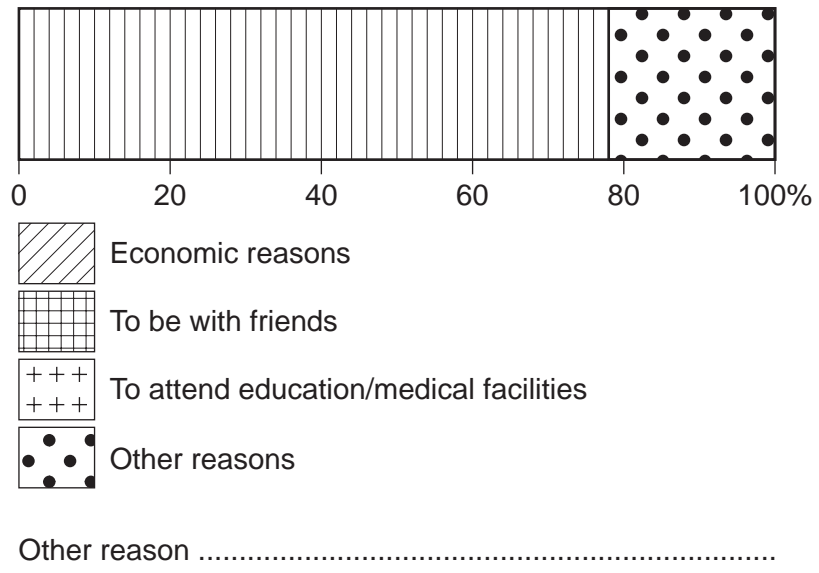


Fig. 6 for Question 5