



Centre Number	Candidate Number	Name
---------------	------------------	------

UNIVERSITY OF CAMBRIDGE INTERNATIONAL EXAMINATIONS
International General Certificate of Secondary Education

GEOGRAPHY

0460/04

Paper 4 Alternative to Coursework

October/November 2005

INSERT

1 hour 45 minutes

READ THESE INSTRUCTIONS FIRST

This insert contains the Figures, Tables and Photograph referred to in the Questions.

Write your Centre number, candidate number and name in the spaces provided and attach it to your answer paper/answer booklet.

2

Screen is painted white because

Screen stands 121cm above the ground because

Slides are made of wooden slats with air space between because

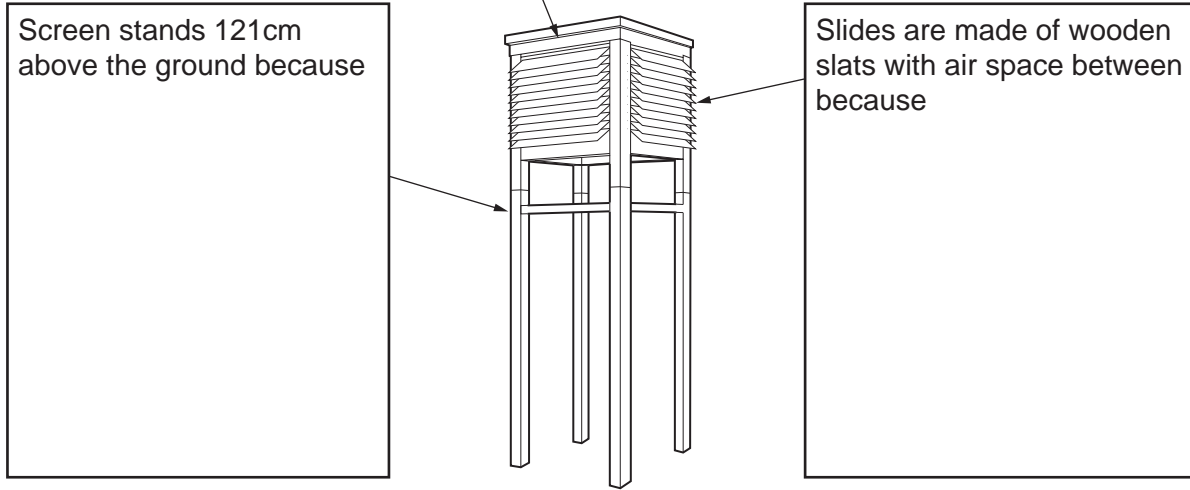


Fig. 1 for Question 1

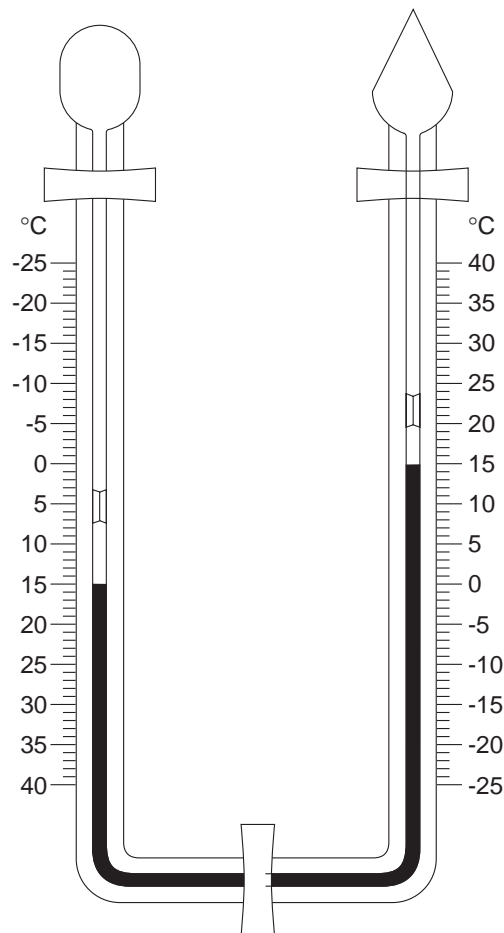
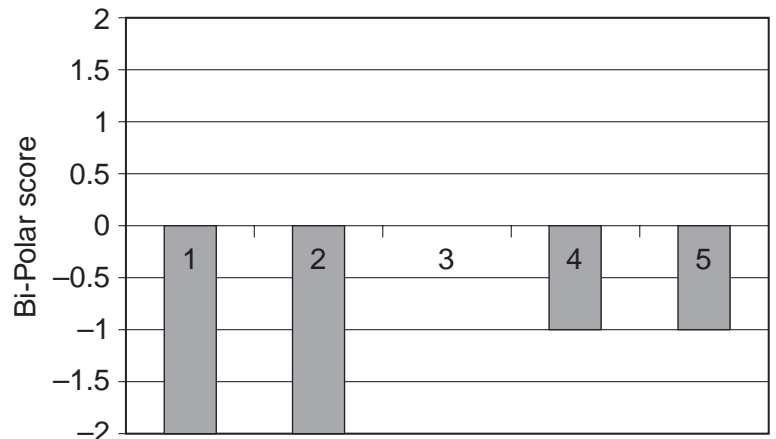




Fig. 4 for Question 2

			Area A	Area B
Variables of the survey	1	Litter	-2	+2
	2	Noise	-2	+1
	3	Maintenance	0	0
	4	People	-1	0
	5	Attraction	-1	+2
		Total	-6	+5

Table 3



Variables of the survey

Key: Area A Area B

Fig. 5 for Question 2

Table 4

Use of building	Hotels or Hostels	Selling food	Clothes shops	Craft or souvenir shops	Offices or Banks	Public Buildings	Other
Number of buildings	6	13	18	8	5	7	11

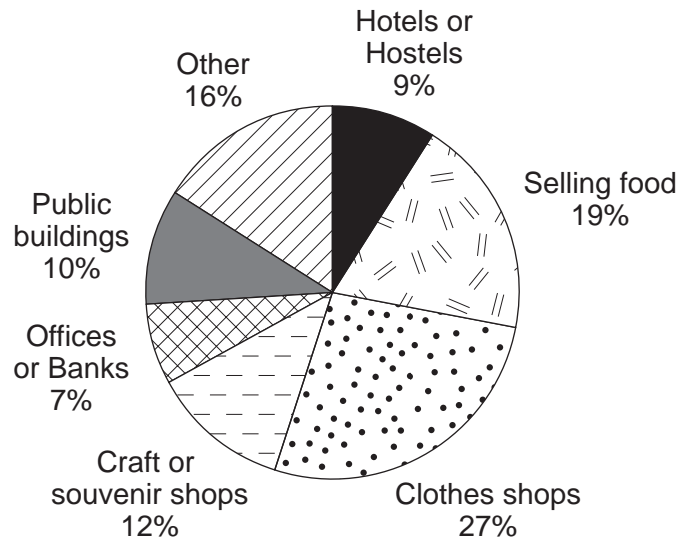


Fig. 6 for Question 2

