



UNIVERSITY OF CAMBRIDGE INTERNATIONAL EXAMINATIONS  
International General Certificate of Secondary Education

---

**GEOGRAPHY**

**0460/42**

Paper 4 Alternative to Coursework

**May/June 2010**

INSERT

**1 hour 30 minutes**

---

**READ THESE INSTRUCTIONS FIRST**

This Insert contains Fig. 1 for Question 1 and Figs 5, 6 and 7 for Question 2.

This insert is **not** required by the Examiner.

---

This document consists of **4** printed pages.



Fig. 1 for Question 1  
Resident Questionnaire

**Questionnaire**

**Resident Number 6**

<b>Age group</b>	Under 15	<input type="checkbox"/>	15 - 30	<input type="checkbox"/>
	31 - 60	<input checked="" type="checkbox"/>	Over 60	<input type="checkbox"/>
<b>Gender</b>	Male	<input checked="" type="checkbox"/>	Female	<input type="checkbox"/>

Question 1

Why did you move to the city?

*To get a job with a good wage*

Question 2

What is your job or occupation?

*Shop owner*

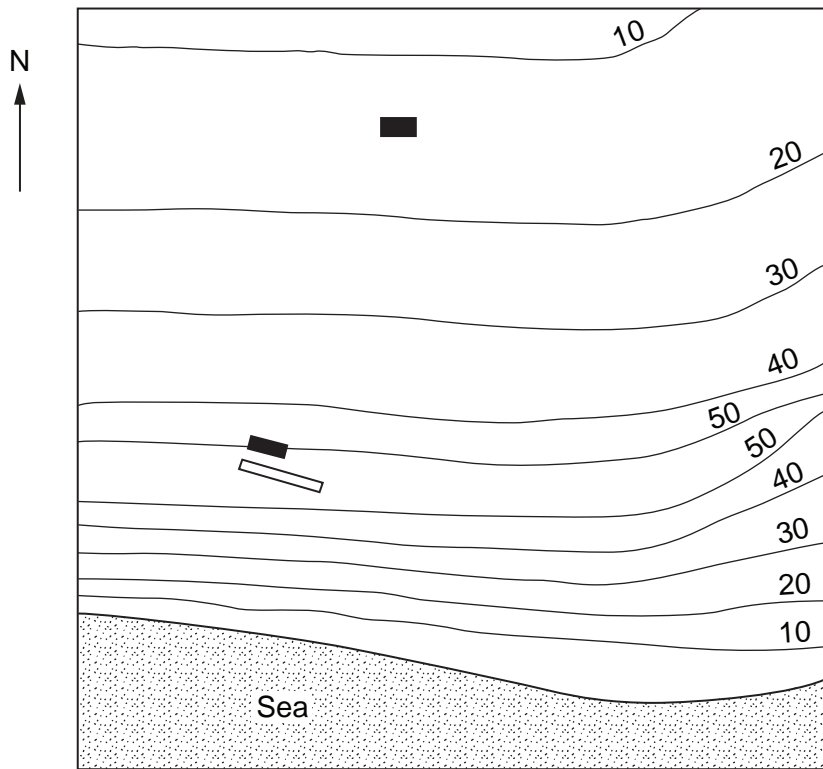
Question 3

How much do you earn in one year?

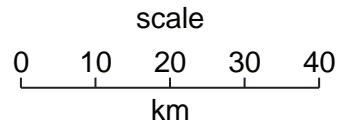
Less than 20 000 rupees	<input type="checkbox"/>
20 000 - 50 000 rupees	<input checked="" type="checkbox"/>
More than 50 000 rupees	<input type="checkbox"/>

Fig. 5 for Question 2

Sketch map to show location of school and airport



**Key**



20 Contour lines (metres)

■ School

▭ Airport

Fig. 6 for Question 2

Rain gauge

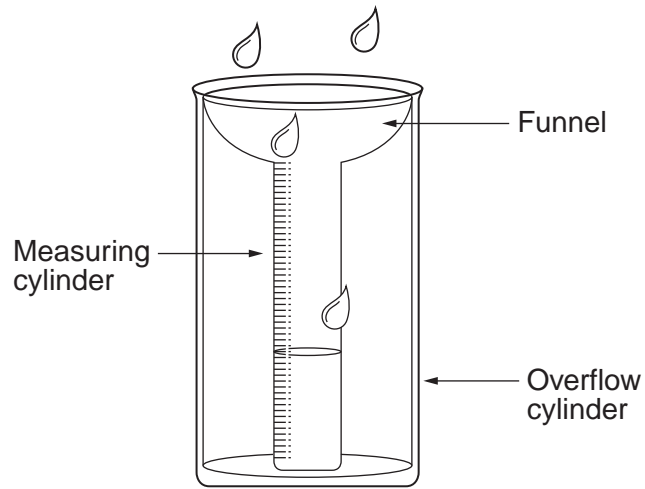


Fig. 7 for Question 2

Wind vane

