

1 The table shows the distances by road, in kilometres, between some towns in New Zealand.

| | | | | |
|--|--|--------------|----------|----------|
| | | | | Auckland |
| | | | Hamilton | 126 |
| | | | Napier | 300 |
| | | New Plymouth | 415 | 242 |
| | | Rotorua | 319 | 229 |
| | | Wellington | 460 | 356 |
| | | | | 332 |
| | | | | 531 |
| | | | | 657 |

Write down the distance between Rotorua and Hamilton.

Answer km [1]

2 Find the value of 1.47^3 .
Give your answer correct to 3 decimal places.

Answer [2]

3 The time in Lisbon is the same as the time in Funchal.
A plane left Lisbon at 08 30 and arrived in Funchal at 10 20.
It then left Funchal at 12 55 and returned to Lisbon.
The return journey took 15 minutes more.

What time did the plane arrive in Lisbon?

Answer [2]

3

4 The Ocean View Hotel has 300 rooms numbered from 100 to 399.
A room is chosen at random.

Find the probability that the room number ends in zero.

Answer [2]

5 Solve the equation $3x - 5 = 16$.

Answer $x =$ [2]

6 A television screen size, S cm, is 80 cm correct to the nearest centimetre.

Complete the statement for S in the answer space.

Answer $\leq S <$ [2]

7 Sheila can pay her hotel bill in Euros (€) or Pounds (£).
The bill was €425 or £365 when the exchange rate was £1 = €1.14 .

In which currency was the bill cheaper?
Show all your working.

Answer [2]

8 Without using a calculator, show that $3\frac{3}{5} \div 2\frac{1}{4} = 1\frac{3}{5}$.

You must show each step of your working.

Answer

[2]

9 Factorise completely.

$$6xy^2 - 8y$$

Answer [2]

10 Use a calculator to find

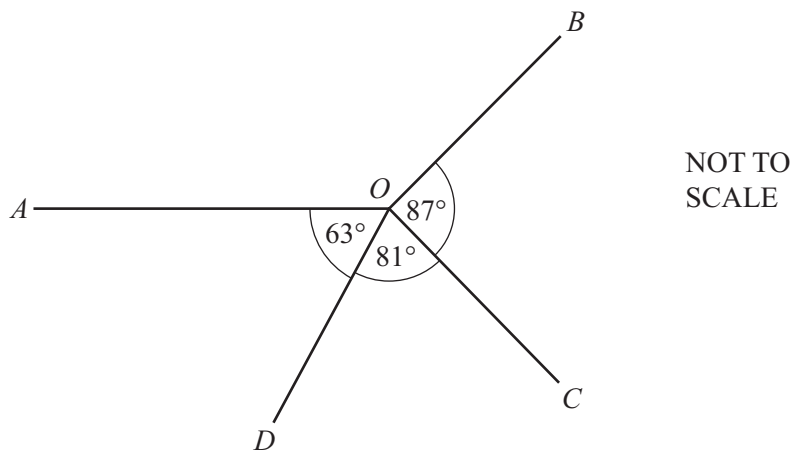
(a) $\sqrt{5\frac{5}{24}}$,

Answer(a) [1]

(b) $\frac{\cos 40^\circ}{7}$.

Answer(b) [1]

11



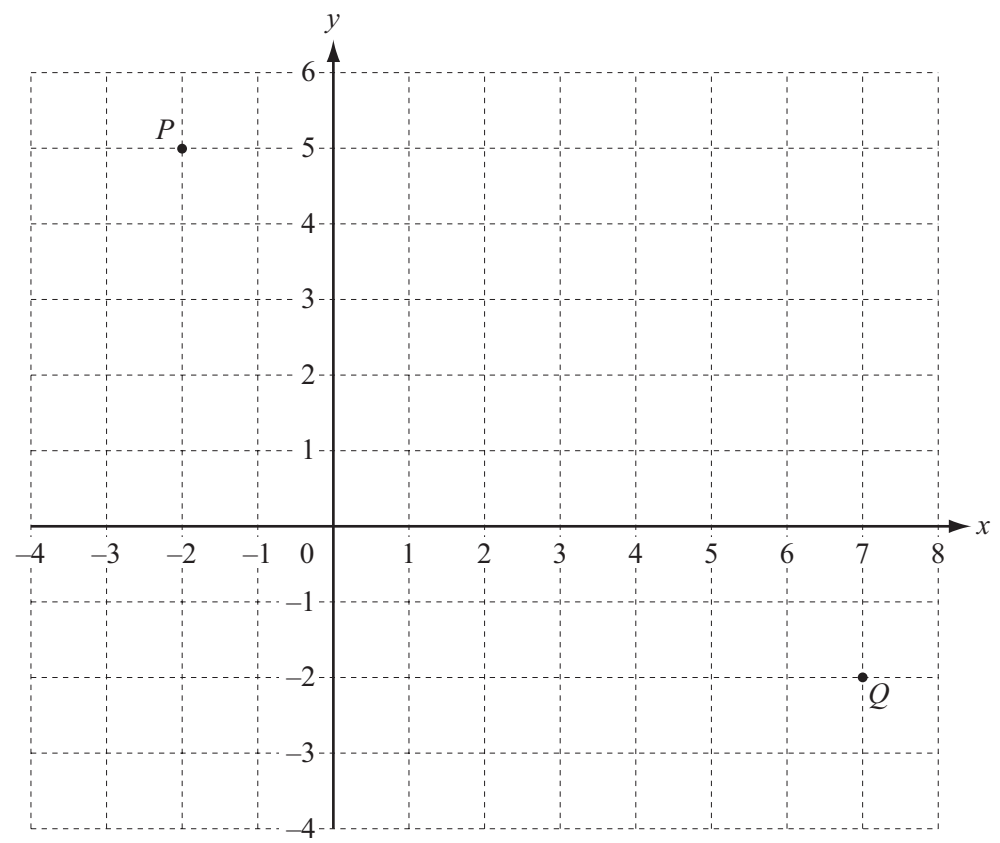
(a) Calculate the size of angle *AOB*.

Answer(a) Angle *AOB* = [1]

(b) What type of angle is angle *AOB*?

Answer(b) [1]

12



The points *P* and *Q* are marked on the grid.

(a) Work out the vector \vec{PQ} .

$$\text{Answer(a) } \vec{PQ} = \begin{pmatrix} \quad \\ \quad \end{pmatrix} [1]$$

(b) $\vec{QR} = \begin{pmatrix} -8 \\ -1 \end{pmatrix}$

Find the co-ordinates of the point *R*.

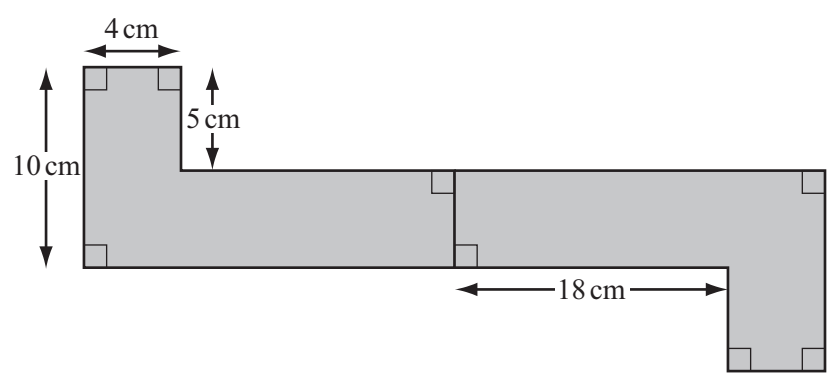
$$\text{Answer(b) } (\dots\dots\dots, \dots\dots\dots) [1]$$

13 Huy borrowed \$4500 from a bank at a rate of 5% per year compound interest. He paid back the money and interest at the end of 2 years.

How much **interest** did he pay?

$$\text{Answer } \$ \dots\dots\dots [3]$$

14



NOT TO SCALE

The shaded shape has rotational symmetry of order 2.

Work out the shaded area.

Answer cm² [3]

15 (a) $5^x \times 5^3 = 5^{10}$

Find the value of x.

Answer(a) x = [1]

(b) Simplify.

$$12h^3 \div 4h^{-2}$$

Answer(b) [2]

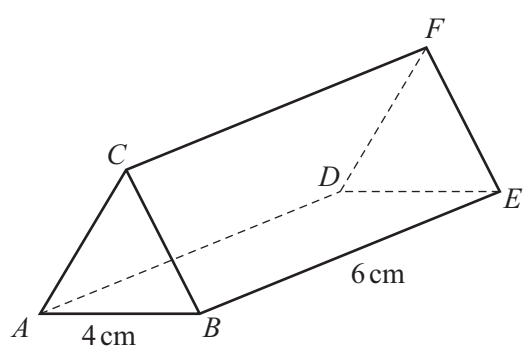
16 Calculate, giving your answers in standard form,

(a) $2 \times (5.5 \times 10^4)$,

Answer(a) [2]

(b) $(5.5 \times 10^4) - (5 \times 10^4)$.

Answer(b) [2]



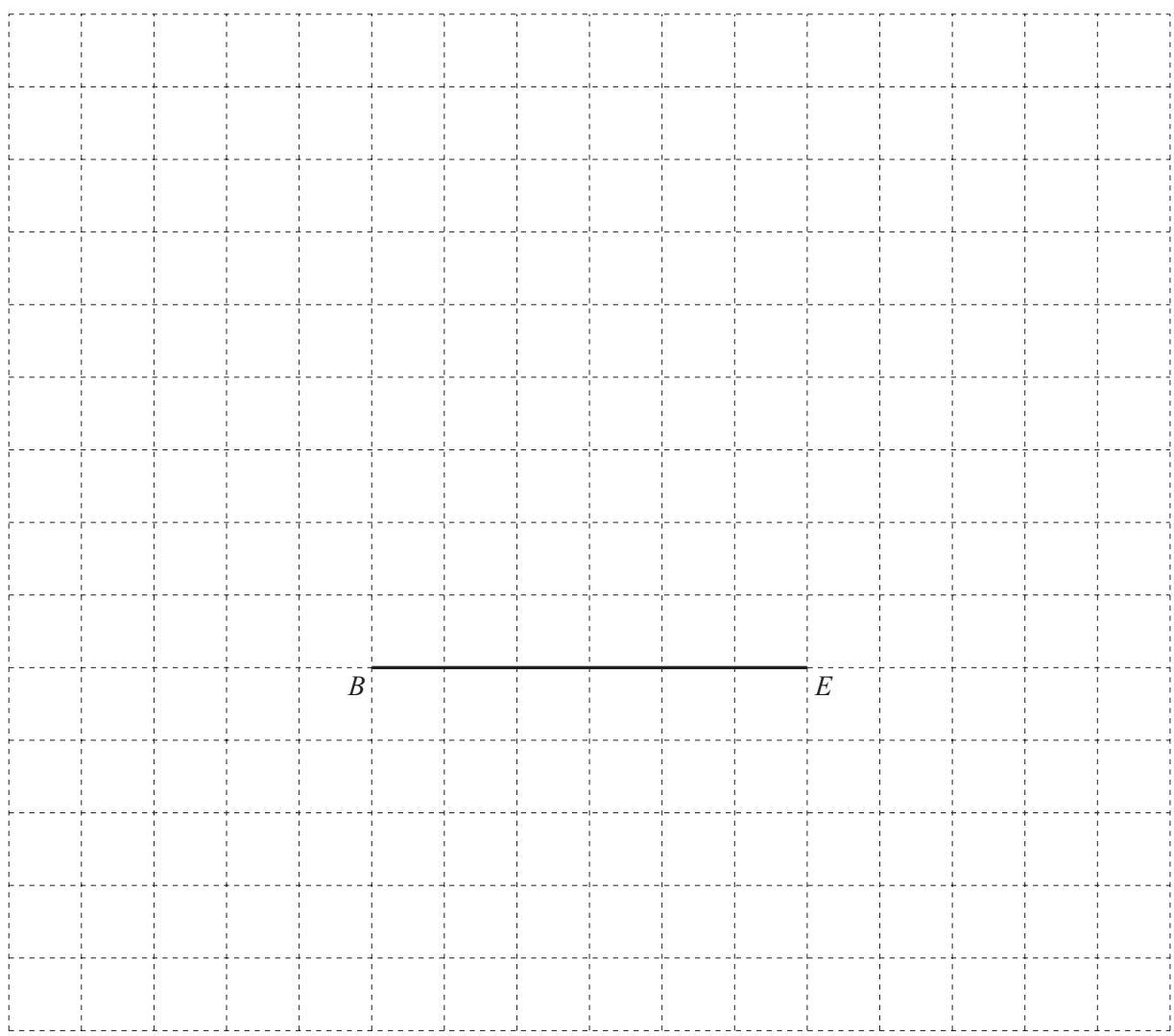
NOT TO SCALE

The diagram shows a triangular prism.
 Triangle ABC is equilateral.
 $AB = 4$ cm and $BE = 6$ cm.

(a) Write down the size of angle ABC .

Answer(a) Angle $ABC = \dots\dots\dots$ [1]

(b) On the 1 cm^2 grid, draw an accurate net of the prism.
 The line BE has been drawn for you.

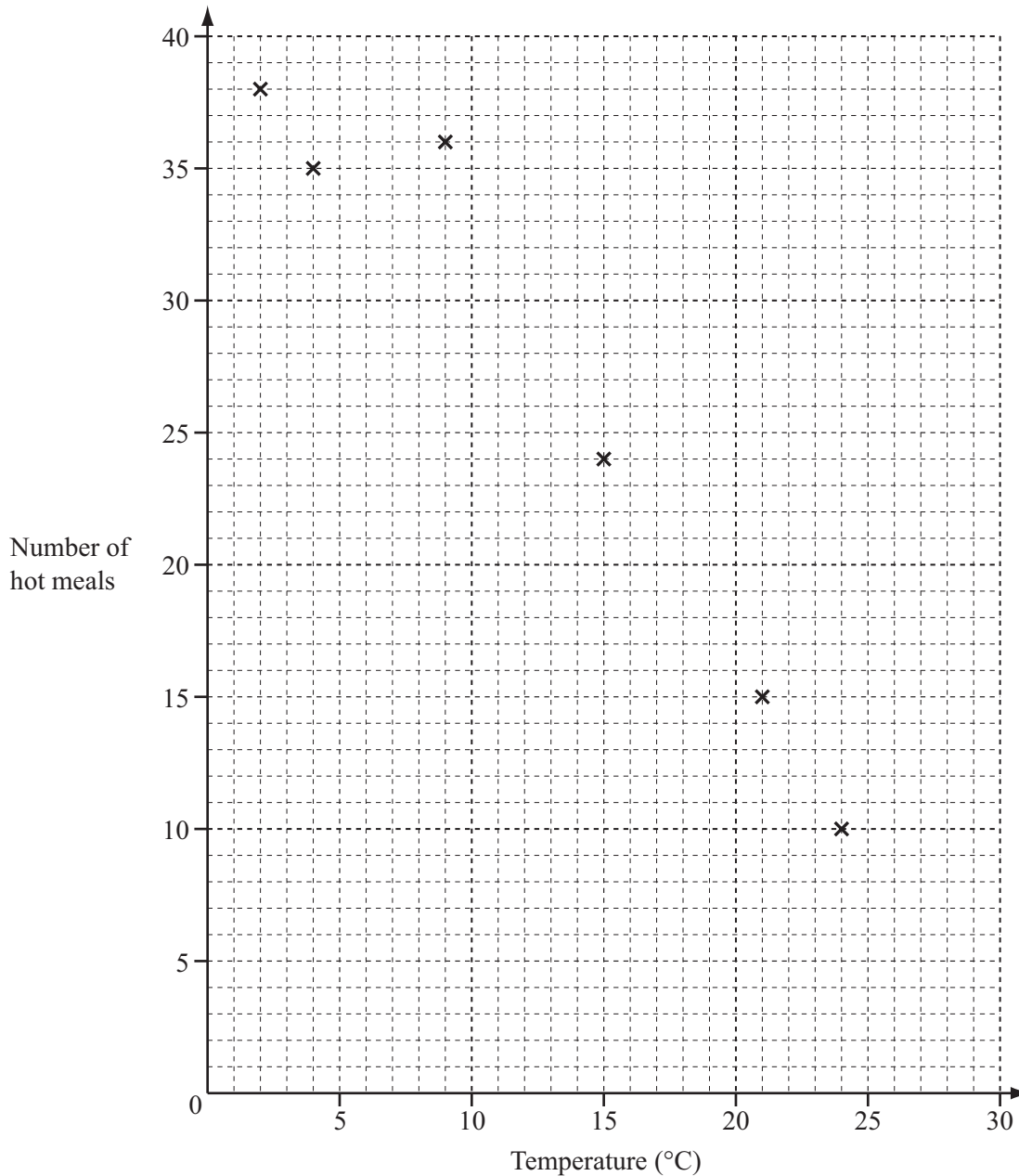


[3]

18 On the first day of each month, a café owner records the midday temperature ($^{\circ}\text{C}$) and the number of hot meals sold.

| | | | | | | | | | | | | |
|------------------------------------|----|----|----|----|----|----|----|----|----|----|----|----|
| Month | J | F | M | A | M | J | J | A | S | O | N | D |
| Temperature ($^{\circ}\text{C}$) | 2 | 4 | 9 | 15 | 21 | 24 | 28 | 27 | 23 | 18 | 10 | 5 |
| Number of hot meals | 38 | 35 | 36 | 24 | 15 | 10 | 4 | 5 | 12 | 20 | 18 | 32 |

(a) Complete the scatter diagram.
The results for January to June have been plotted for you.



[2]

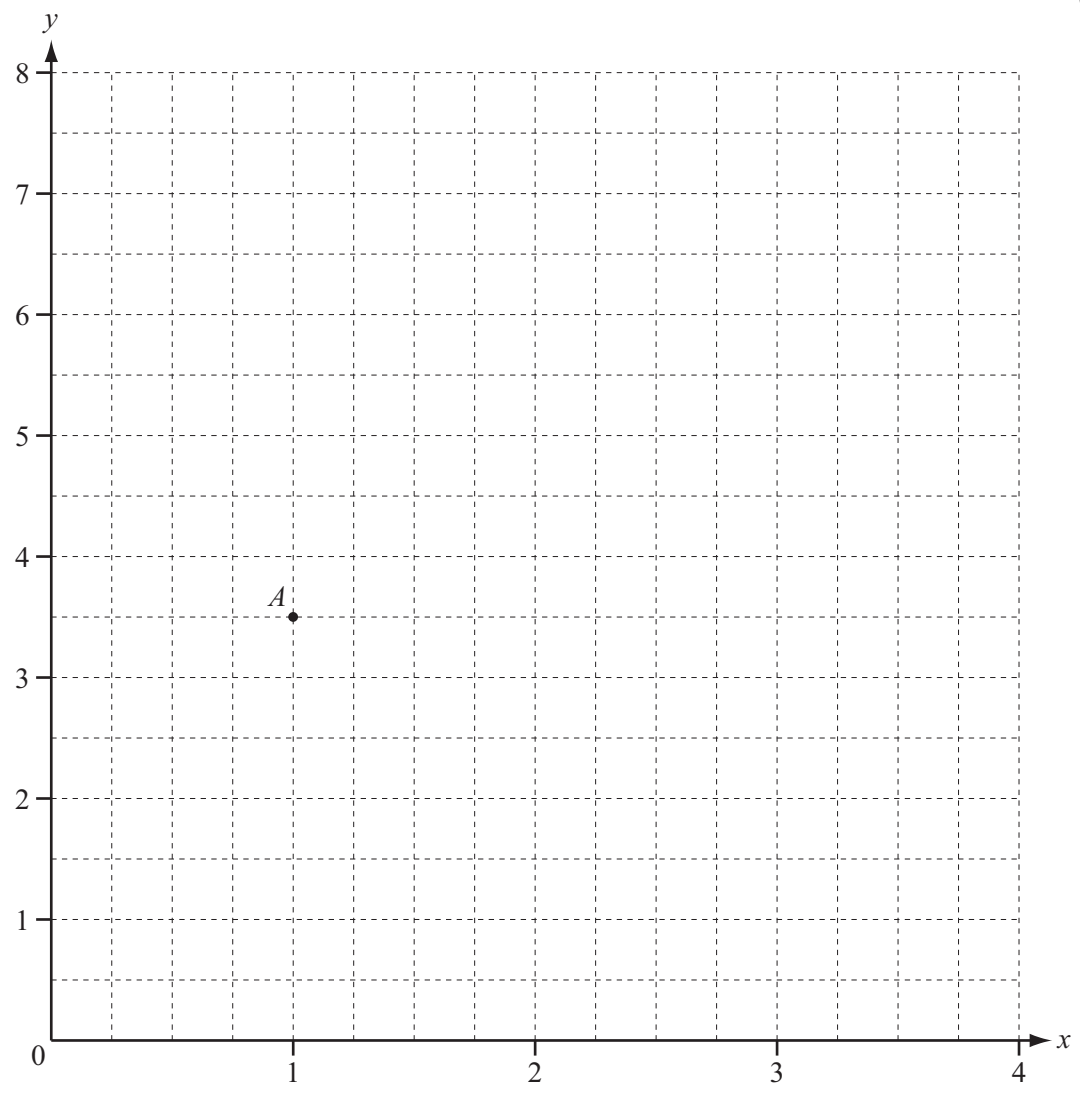
(b) On the grid, draw the line of best fit.

[1]

(c) What type of correlation does this scatter diagram show?

Answer(c) [1]

19



The point $A(1, 3.5)$ is plotted on the grid.

(a) Plot the point $B(3, 6.5)$ and draw the straight line through A and B . [1]

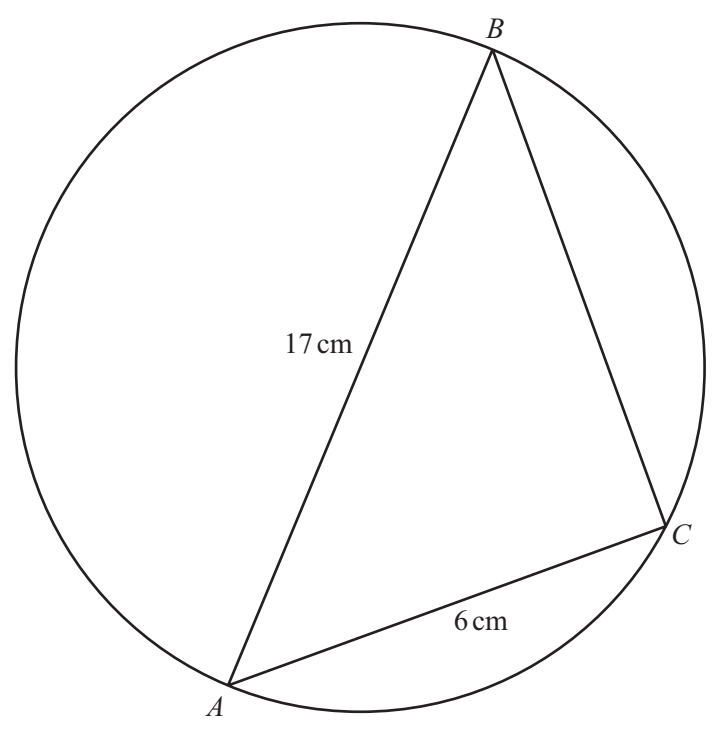
(b) (i) Find the gradient of the line in part (a).

Answer(b)(i) [2]

(ii) Write down the equation of the line in the form $y = mx + c$.

Answer(b)(ii) $y =$ [2]

(c) On the grid, draw a line through the point $(2, 5)$ that is perpendicular to the line in part (a). [1]



NOT TO
SCALE

In the diagram, AB is a diameter of the circle and C is a point on the circumference.
 $AB = 17$ cm and $AC = 6$ cm.

(a) Calculate the area of the circle.

Answer(a) cm² [2]

(b) (i) Explain why angle $ACB = 90^\circ$.

Answer(b)(i) [1]

(ii) Calculate BC .

Answer(b)(ii) $BC =$ cm [3]

Permission to reproduce items where third-party owned material protected by copyright is included has been sought and cleared where possible. Every reasonable effort has been made by the publisher (UCLES) to trace copyright holders, but if any items requiring clearance have unwittingly been included the publisher will be pleased to make amends at the earliest possible opportunity.

University of Cambridge International Examinations is part of the Cambridge Assessment Group. Cambridge Assessment is the brand name of University of Cambridge Local Examinations Syndicate (UCLES), which is itself a department of the University of Cambridge.