



# Cambridge IGCSE™

CANDIDATE  
NAME

CENTRE  
NUMBER

--	--	--	--	--

CANDIDATE  
NUMBER

--	--	--	--

## PAKISTAN STUDIES

0448/02

Paper 2 The Environment of Pakistan

October/November 2020

1 hour 30 minutes

You must answer on the question paper.

You will need: Insert (enclosed)  
Ruler

### INSTRUCTIONS

- Answer **three** questions.
- Use a black or dark blue pen.
- Write your name, centre number and candidate number in the boxes at the top of the page.
- Write your answer to each question in the space provided.
- Do **not** use an erasable pen or correction fluid.
- Do **not** write on any bar codes.
- If additional space is needed, you should use the lined pages at the end of this booklet; the question number or numbers must be clearly shown.

### INFORMATION

- The total mark for this paper is 75.
- The number of marks for each question or part question is shown in brackets [ ].
- The insert contains additional resources referred to in the questions.

This document has **24** pages. Blank pages are indicated.



1 (a) Study Fig. 1.1, a map of Pakistan.

This figure has been removed. It showed an outline map of Pakistan.

**Fig. 1.1**

(i) On Fig. 1.1, **shade one** area where apples are grown in Pakistan. [1]

(ii) State **one** reason why apples are grown in this area and **one** important use of apples.

Reason .....

Use .....

[2]

(b) (i) Study Fig. 1.2 (Insert), a photograph of livestock in Pakistan. Using Fig. 1.2 **only**, identify the type of livestock shown.

..... [1]

(ii) Study Fig. 1.3, a diagram showing a type of lift irrigation.




Fig. 1.3

Describe how water is obtained for irrigation using this method.

.....  
.....  
.....  
.....  
.....  
.....  
.....  
.....  
..... [4]

(iii) List **two** ways the livestock shown in Fig. 1.2 can be used other than as draught power for irrigation.

1 .....

2 .....

[2]

(c) (i) Explain **two** natural factors required for growing wheat. You should develop your answer.

1 .....

.....

.....

.....

.....

2 .....

.....

.....

.....

[4]

(ii) Contrast wheat production on a small-scale subsistence farm and a cash crop farm.

	small-scale subsistence farm	cash crop farm
contrast 1		
contrast 2		

[4]

(iii) What is waterlogging? Tick (✓) **one** correct answer from the list below:

	Tick (✓)
Dams trap water in rivers.	
The water table rises to the surface.	
There is a lack of salt in the soil.	
Water dissolves the salts in the soil.	

[1]



- 2 (a) (i) Study Fig. 2.1 (Insert), a map showing the location of New Islamabad International Airport in Islamabad-Rawalpindi.

Using Fig. 2.1 **only**, describe the location of New Islamabad International Airport.

.....  
.....  
.....  
..... [2]

- (ii) Describe **three** factors that encourage the location and development of airports in Pakistan.

1 .....  
.....  
2 .....  
.....  
3 .....  
..... [3]

- (iii) Suggest **two** disadvantages of air transport for people and **two** disadvantages of air transport for the movement of goods.

people

1 .....  
.....  
2 .....  
.....

movement of goods

1 .....  
.....  
2 .....  
..... [4]

(b) (i) Study Fig. 2.2 (Insert), a photograph of a seaport in Pakistan. Using Fig. 2.2 **only**, describe the features of the seaport shown.

.....  
.....  
.....  
.....  
.....  
..... [3]

(ii) Name **three** main seaports in Pakistan.

- 1 .....
- 2 .....
- 3 .....

[3]

(c) Explain the importance of the development of seaports to Pakistan. You should develop your answer.

.....  
.....  
.....  
.....  
.....  
.....  
.....  
..... [4]





3 Study Fig. 3.1, a diagram showing oil prospecting and drilling.

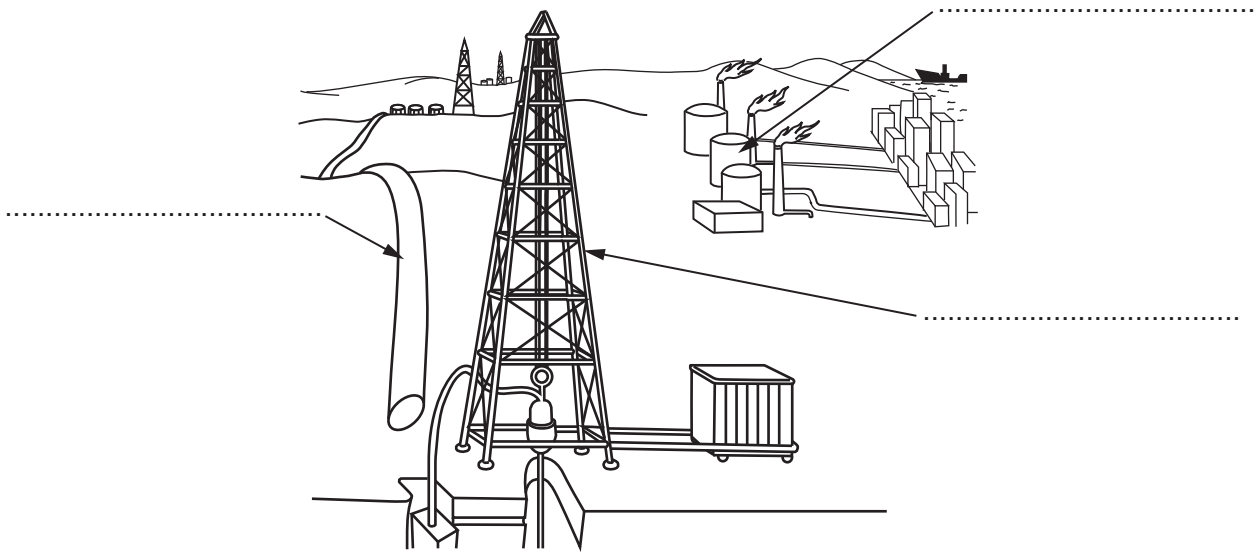


Fig. 3.1

(a) (i) Complete the labels on Fig. 3.1 by choosing the correct words from the list below.

- derrick      drill      pipe      refinery      valves      [2]

(ii) Study Fig. 3.2, a line graph showing daily oil consumption in Pakistan from 2007 to 2017.

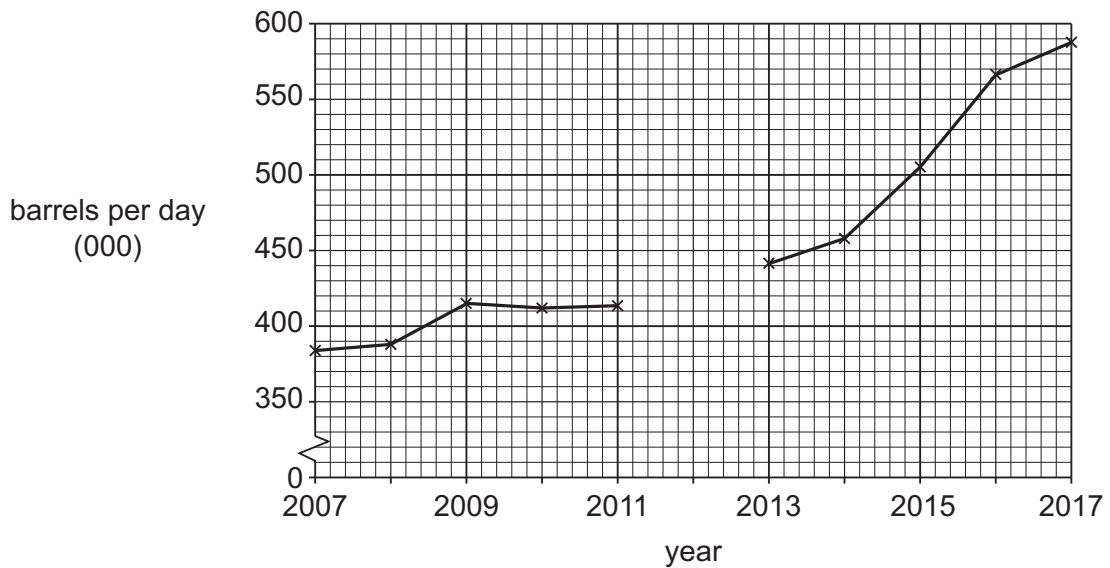


Fig. 3.2

Complete Fig. 3.2 by plotting daily oil consumption in 2012 using the information below.

year	barrels per day (000)
2012	410

[2]

(iii) How many barrels of crude oil were produced per day in Pakistan in 2019?

Circle the correct answer.

69 000                      91 000                      113 000                      [1]

(iv) State **two** ways that oil is transported on land in Pakistan.

1 .....

2 .....

[2]

(b) (i) Define the term 'refined'.

.....  
 ..... [1]

(ii) Study Fig. 3.3 (Insert), a photograph of an oil refinery in Pakistan. Using Fig. 3.3 **only**, describe the features of the oil refinery shown.

.....  
 .....  
 .....  
 .....  
 .....  
 ..... [3]

(iii) Name **two** oil refineries in Pakistan and state where each one is located.

name of oil refinery	location of oil refinery
1 .....	1 .....
2 .....	2 .....

[4]

(c) Explain how oil is used to generate electricity in a thermal power station. You should develop your answer.

.....

.....

.....

.....

.....

.....

.....

.....

.....

..... [4]



- 4 Study Fig. 4.1, a pie graph showing the percentage share of Pakistan’s total forest cover by province-level area.

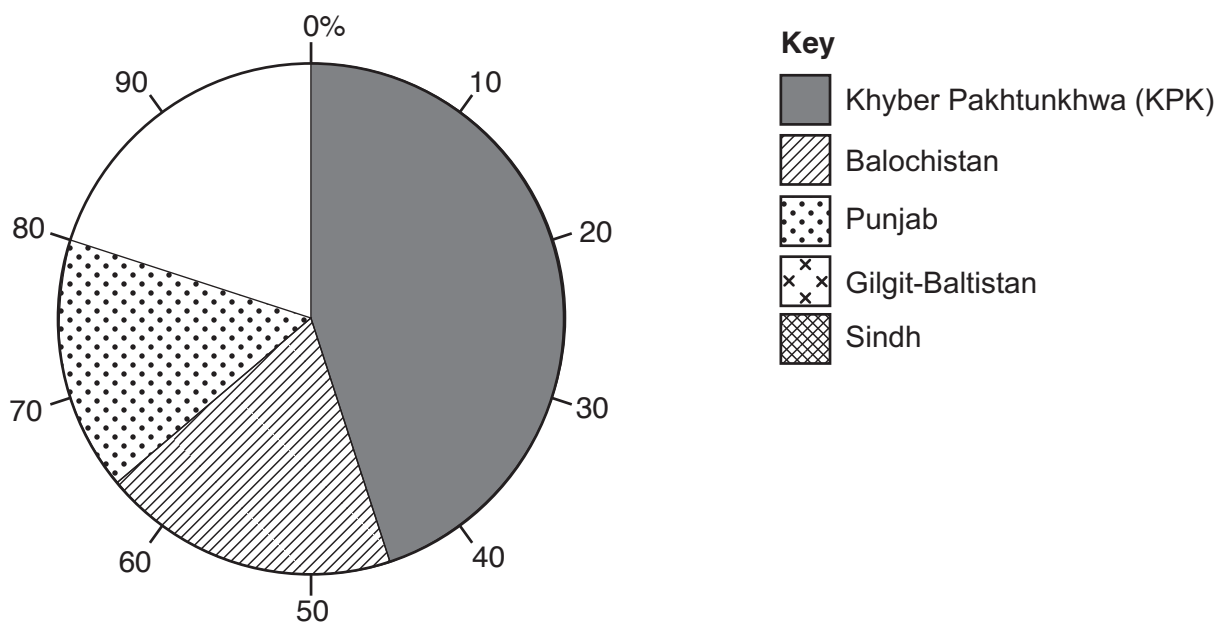


Fig. 4.1

- (a) (i) **Complete** the pie graph in Fig. 4.1 to show the percentage of total forest cover found in Gilgit-Baltistan and Sindh. Use the information below and the key provided:

province-level area	percentage (%)
Gilgit-Baltistan	11
Sindh	9

[3]

- (ii) **Complete** the passage below about reasons for the variations in the percentage share of forest cover shown in Fig. 4.1. Choose the correct words from the list and place them in the spaces provided.

KPK has the largest percentage share of forest cover in Pakistan because the ..... is more suitable for growing trees. There are fewer trees in Punjab because the land is needed for ..... . Some areas may have suffered more from ..... than others.

- afforestation      altitude      climate  
 cultivation      deforestation      recreation

[3]



(c) Explain **two** effects of deforestation on the natural environment of Pakistan. You should develop your answer.

1 .....

.....

.....

.....

.....

2 .....

.....

.....

.....

[4]





5 (a) (i) Define the term 'migration'.

.....  
..... [1]

(ii) Suggest **four** push factors that lead to rural–urban migration.

1 .....

.....

2 .....

.....

3 .....

.....

4 .....

..... [4]

(iii) Describe the impacts of rural–urban migration on rural areas of Pakistan.

.....

.....

.....

.....

.....

..... [3]

(b) (i) Study Fig. 5.1, a map showing the distribution of urban population in Pakistan in 2018.

This figure has been removed. It showed an outline map of Pakistan. The key showed urban population in millions. Urban areas with a population of:

- 5+ million are represented by a square
- 1–4.99 million are represented by a smaller square
- 0.5–0.99 million are represented by a circle
- 0.1–0.49 million are represented by a smaller circle

Each urban area in Pakistan with a population of 0.1+ million is represented on the map by the appropriate symbol.

**Fig. 5.1**

Using Fig. 5.1 **only**, describe the distribution of urban population in Pakistan.

.....

.....

.....

.....

.....

.....

..... [3]

- (ii) Study Fig. 5.2, a bar graph showing the percentage of the population living in urban centres by province in 2018.

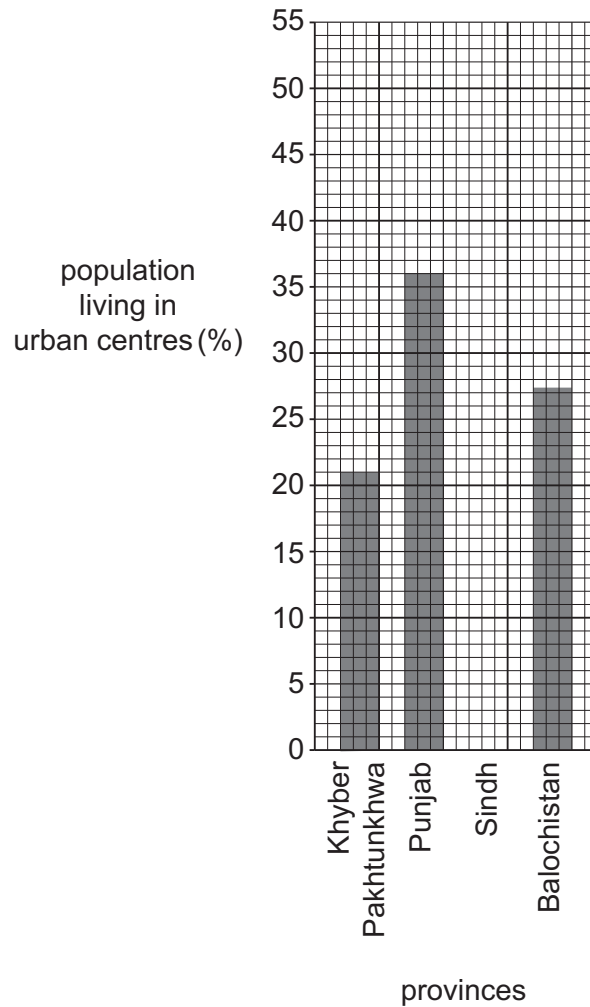


Fig. 5.2

Complete Fig. 5.2 by drawing the bar for Sindh using the information below.

province-level area	percentage (%)
Sindh	52

[1]

- (iii) Using Fig. 5.2 **only** list the provinces in rank order by the percentage of their population living in urban centres.

1 ..... highest percentage

2 .....

3 .....

4 ..... lowest percentage

↑  
↓

[1]

(iv) State **two** problems which occur when large numbers of people live in urban areas.

1 .....

2 .....

[2]

(c) Explain **two** physical factors that affect the population distribution of Pakistan. You should develop your answer.

1 .....

.....

.....

.....

2 .....

.....

.....

.....

[4]







**BLANK PAGE**

---

The boundaries and names shown, the designations used and the presentation of material on the maps contained in this question paper/insert do not imply official endorsement or acceptance by Cambridge Assessment International Education concerning the legal status of any country, territory, or area or any of its authorities, or of the delimitation of its frontiers or boundaries.

Permission to reproduce items where third-party owned material protected by copyright is included has been sought and cleared where possible. Every reasonable effort has been made by the publisher (UCLES) to trace copyright holders, but if any items requiring clearance have unwittingly been included, the publisher will be pleased to make amends at the earliest possible opportunity.

To avoid the issue of disclosure of answer-related information to candidates, all copyright acknowledgements are reproduced online in the Cambridge Assessment International Education Copyright Acknowledgements Booklet. This is produced for each series of examinations and is freely available to download at [www.cambridgeinternational.org](http://www.cambridgeinternational.org) after the live examination series.

Cambridge Assessment International Education is part of the Cambridge Assessment Group. Cambridge Assessment is the brand name of the University of Cambridge Local Examinations Syndicate (UCLES), which itself is a department of the University of Cambridge.