



Cambridge IGCSE™

CANDIDATE
NAME

CENTRE
NUMBER

| | | | | |
|--|--|--|--|--|
| | | | | |
|--|--|--|--|--|

CANDIDATE
NUMBER

| | | | |
|--|--|--|--|
| | | | |
|--|--|--|--|



PHYSICAL EDUCATION

0413/11

Paper 1 Theory

May/June 2021

1 hour 45 minutes

You must answer on the question paper.

No additional materials are needed.

INSTRUCTIONS

- Answer **all** questions.
- Use a black or dark blue pen. You may use an HB pencil for any diagrams or graphs.
- Write your name, centre number and candidate number in the boxes at the top of the page.
- Write your answer to each question in the space provided.
- Do **not** use an erasable pen or correction fluid.
- Do **not** write on any bar codes.
- You may use a calculator.
- You should show all your working and use appropriate units.

INFORMATION

- The total mark for this paper is 100.
- The number of marks for each question or part question is shown in brackets [].

This document has **16** pages. Any blank pages are indicated.

1 State **two** classifications of bones.

- 1
- 2 [2]

2 (a) Describe **two** requirements for each of the following:

good mental health and well-being

- 1
- 2

good social health and well-being.

- 1
- 2 [4]

(b) Carbohydrates are an important nutrient in a balanced diet.

(i) State **two** other nutrients and describe a different function of each nutrient.

- nutrient 1
- function
- nutrient 2
- function

(ii) Explain why different people may have different energy needs. [4]

-
-
-
- [2]

[Total: 10]

- 3 The photograph shows a volleyball match. Volleyball players require coordination, power and cardiovascular endurance/stamina.



- (a) Identify **three** components of fitness, other than coordination, power and cardiovascular endurance/stamina, that would benefit a volleyball player.

Describe an example of how each component is used in a volleyball match.

component of fitness 1

example

.....

component of fitness 2

example

.....

component of fitness 3

example

.....

[6]

- (b) (i) State a type of prohibited performance-enhancing drug (PED) that a volleyball player may choose to take and describe how this may enhance performance.

type of PED

description

.....

[2]

(ii) State **two** possible disadvantages for a performer, other than health implications, of taking prohibited performance-enhancing drugs (PEDs).

1

.....

2

.....

[2]

[Total: 10]

4 Skills can be classified on different continua. One example of a continuum is fine and gross.

(a) (i) State **two** other continua used to classify skills.

1 and

2 and

[2]

(ii) The boxes show the positions of three different skills on the fine and gross continuum.

Using the letters **A**, **B** and **C** identify the box representing each of the following skills on the fine and gross continuum:

A chest-pass in basketball

B shot-put throw in athletics

C short putt in golf.

fine ←————→ gross



[2]

(b) Explain why some skills are classified as fine skills.

.....

.....

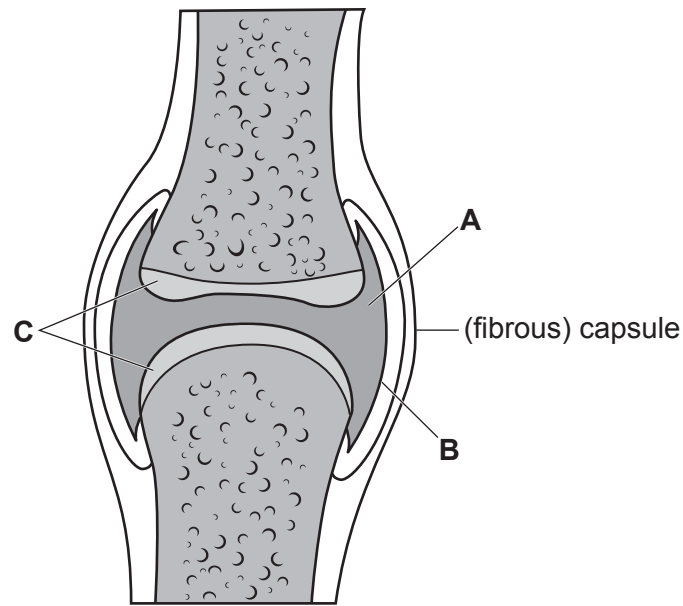
.....

..... [2]

[Total: 6]

5

5 (a) The diagram shows a typical synovial joint.



Identify the components labelled **A**, **B** and **C**.

- A
- B
- C [3]

(b) Describe a named type of movement, other than rotation, that can occur at a ball and socket joint.

- type of movement
- description
- [2]

[Total: 5]

- 6 (a) Complete the table to compare the lumen size and wall thickness for the named blood vessels.

| | lumen size | wall thickness |
|-------------|------------|----------------|
| arteries | | |
| capillaries | | |


[4]

- (b) Describe **one** function of valves in the heart.

.....
 [1]

[Total: 5]

- 7 (a) The diagram shows an athlete performing a high jump. This requires power to be generated in the legs.



- (i) Define *power*.

.....
 [1]

- (ii) Describe **one** named plyometric exercise that can be used to develop power in the legs.

name of exercise

description

..... [2]

(iii) Describe how to carry out a named fitness test for power.

name of test

description

.....

.....

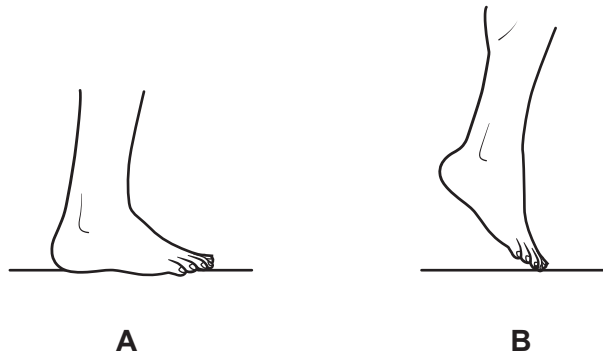
.....

.....

.....

[4]

(b) The diagrams show the movement at the ankle and the position of the foot at the point of take-off.



(i) State the type of movement occurring at the ankle from **A** to **B**.

..... [1]

(ii) Name the agonist muscle and the antagonist muscle involved in the movement from **A** to **B**.

agonist

antagonist

[2]

(iii) Name a different type of movement that can occur at the ankle. Describe an example from a named physical activity when this movement would take place.

type of movement

physical activity

example

.....

[2]

(iv) Describe how a ligament injury could be caused at the ankle. Explain a named treatment for this injury.

cause of injury

.....

treatment

explanation

.....

[3]

[Total: 15]

8 Describe, using examples from a named physical activity, how technology has had a different positive effect on officials, performers and the audience/spectators.

physical activity

officials

.....

performers

.....

the audience/spectators

.....

[3]

9 (a) Knowledge of performance is a type of feedback that can improve performance.

Describe **two** other advantages for a performer of knowledge of performance.

advantage 1

.....

advantage 2

.....

[2]

(b) Suggest why extrinsic feedback may be of greater benefit than intrinsic feedback for a performer trying to learn a skill during the cognitive stage of learning.

.....

.....

.....

.....

[2]

[Total: 4]

10 Suggest advantages and disadvantages for sport of increased income from television.

advantages

.....

.....

.....

.....

.....

disadvantages

.....

.....

.....

.....

.....

[6]

11 Sketch and label a third-class lever.

[2]

- 12 (a) Complete the table to identify **two** types of guidance and describe a different benefit of each type of guidance for a learner.

| type of guidance | benefit |
|------------------|---------|
| | |
| | |

[4]

- (b) A performer decides to set the following target:

- improving their 100-metre time.

Identify **three** principles of SMARTER goal-setting that are **not** met by this target. Justify each of your answers.

principle 1

justification

.....

principle 2

justification

.....

principle 3

justification


.....

[6]

[Total: 10]

13 The photograph shows a person learning to swim in a swimming pool.

learning to swim



(a) Describe **two** possible perceived risks for the person learning to swim.

perceived risk 1

.....

perceived risk 2

.....

[2]

(b) Describe **two** real risks for swimmers at a swimming pool and describe a strategy to reduce each risk.

real risk 1

.....

strategy

.....

real risk 2

.....

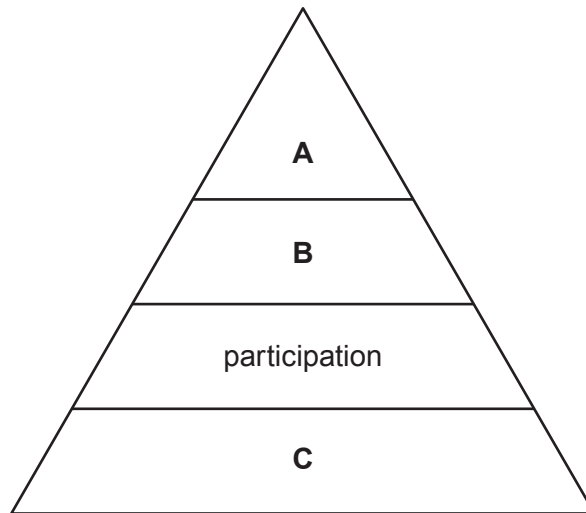
strategy

.....

[4]

[Total: 6]

14 The diagram shows a sports development pyramid.



(a) Identify the levels labelled **A**, **B** and **C**.

A

B

C [3]

(b) Describe **three** characteristics of the participation level of the sports development pyramid.

1

.....

2

.....

3

..... [3]

[Total: 6]

15 (a) Describe **four** short-term effects of exercise.

- 1
- 2
- 3
- 4 [4]

(b) (i) Describe **two** different examples from a named games activity when a performer's energy demand is mainly anaerobic.

- games activity
- example 1
-
- example 2
- [2]

(ii) Outline how energy is released during anaerobic respiration.

-
- [2]

(c) Describe how **two** factors may affect recovery after exercise.

- 1
-
- 2
- [2]

[Total: 10]

BLANK PAGE

Permission to reproduce items where third-party owned material protected by copyright is included has been sought and cleared where possible. Every reasonable effort has been made by the publisher (UCLES) to trace copyright holders, but if any items requiring clearance have unwittingly been included, the publisher will be pleased to make amends at the earliest possible opportunity.

To avoid the issue of disclosure of answer-related information to candidates, all copyright acknowledgements are reproduced online in the Cambridge Assessment International Education Copyright Acknowledgements Booklet. This is produced for each series of examinations and is freely available to download at www.cambridgeinternational.org after the live examination series.

Cambridge Assessment International Education is part of the Cambridge Assessment Group. Cambridge Assessment is the brand name of the University of Cambridge Local Examinations Syndicate (UCLES), which itself is a department of the University of Cambridge.