

UNIVERSITY OF CAMBRIDGE INTERNATIONAL EXAMINATIONS
International General Certificate of Secondary Education

COMBINED SCIENCE

0653/01

Paper 1 Multiple Choice

May/June 2004

45 minutes

Additional Materials: Multiple Choice Answer Sheet
Soft clean eraser
Soft pencil (type B or HB is recommended)

READ THESE INSTRUCTIONS FIRST

Write in soft pencil.
Do not use staples, paper clips, highlighters, glue or correction fluid.
Write your name, Centre number and candidate number on the answer sheet in the spaces provided unless this has been done for you.

There are **forty** questions on this paper. Answer **all** questions.
For each question there are four possible answers **A, B, C,** and **D.** Choose the **one** you consider correct and record your choice in **soft pencil** on the separate answer sheet.

Read the instructions on the answer sheet very carefully.

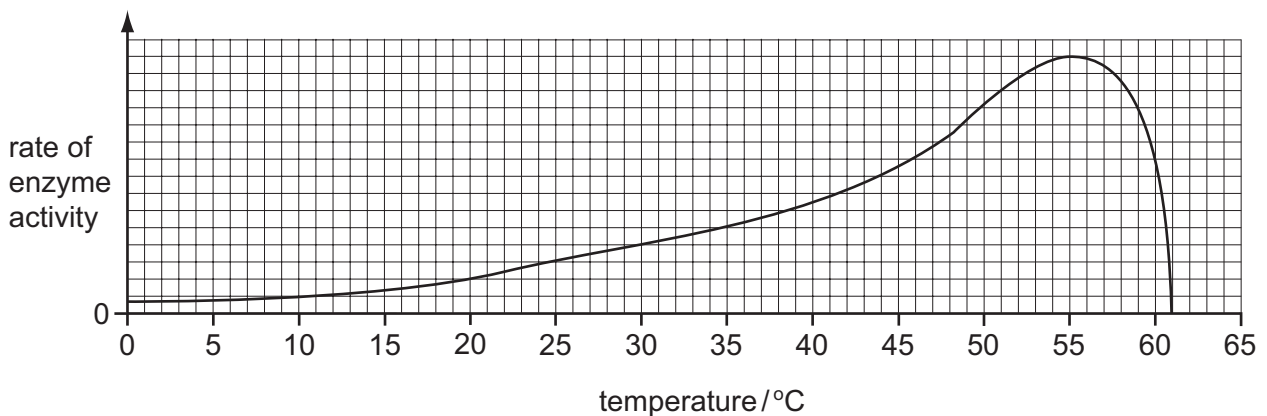
Each correct answer will score one mark. A mark will not be deducted for a wrong answer.
Any rough working should be done in this booklet.
A copy of the Periodic Table is printed on page 20.

This document consists of **19** printed pages and **1** blank page.

2

- 1 Two characteristics of all living organisms are
- A breathing and reproduction.
 - B photosynthesis and excretion.
 - C reproduction and respiration.
 - D respiration and photosynthesis.
- 2 Which structure provides the best surface for diffusion?
- A alveolus
 - B heart wall
 - C trachea
 - D vagina

- 3 The graph shows how temperature affects the rate at which an enzyme works.

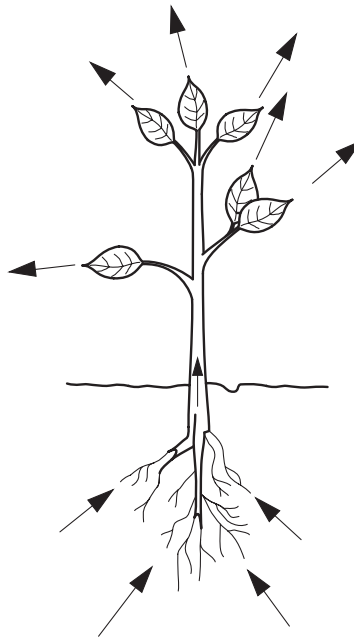


What does the graph show about this enzyme?

- A The enzyme is denatured by temperatures above 65 °C.
- B The enzyme is denatured by temperatures below 8 °C.
- C The enzyme works fastest at 48 °C.
- D The rate of enzyme activity doubles when the temperature is raised from 10 °C to 20 °C.

3

- 4 The arrows on the diagram show the path taken by a substance through a plant.



Which substance follows this path?

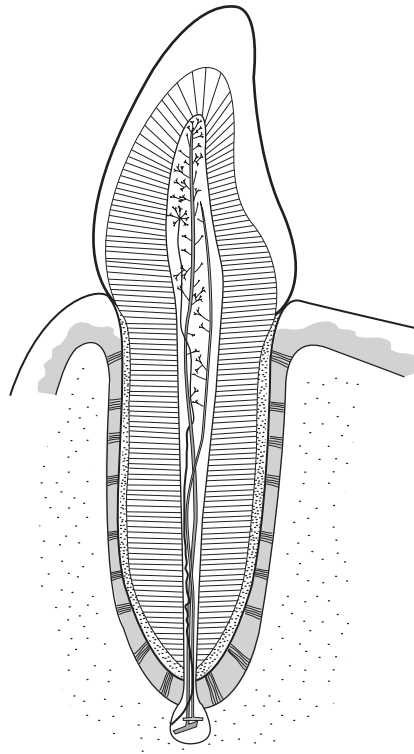
- A** carbon dioxide
B glucose
C oxygen
D water
- 5 Which symptoms occur when there is a deficiency of vitamin C or of iron in the diet?

	symptoms	
	vitamin C deficiency	iron deficiency
A	anaemia (lack of haemoglobin)	bleeding gums
B	bleeding gums	anaemia (lack of haemoglobin)
C	poor teeth	weak bones
D	weak bones	poor teeth

- 6 What enters a green leaf through its stomata for use during photosynthesis?

- A** carbon dioxide only
B carbon dioxide and oxygen
C carbon dioxide and water
D water only

7 The diagram shows the internal structure of a tooth.

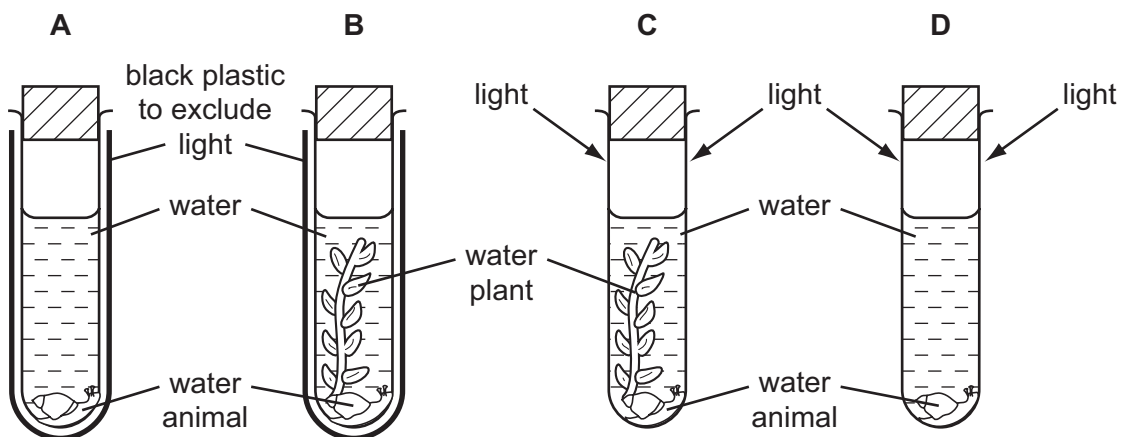


Most of this tooth consists of

- A cement.
- B dentine.
- C enamel.
- D pulp.

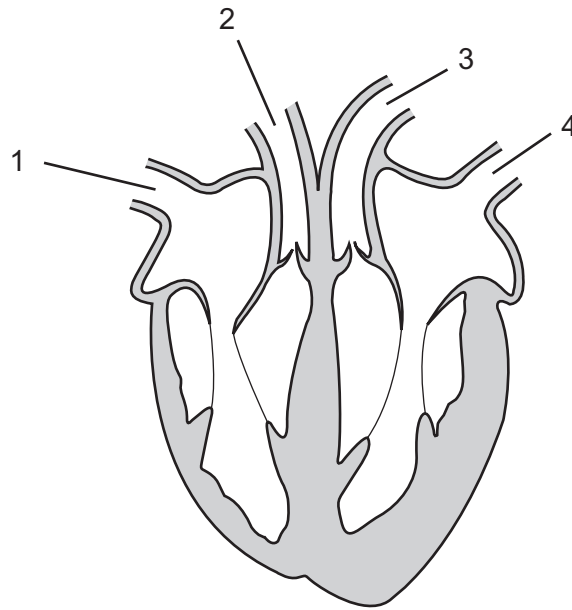
8 Four tubes are set up as shown in the diagram.

In which tube does the water animal survive the longest?



5

9 The diagram shows a vertical section through the heart.



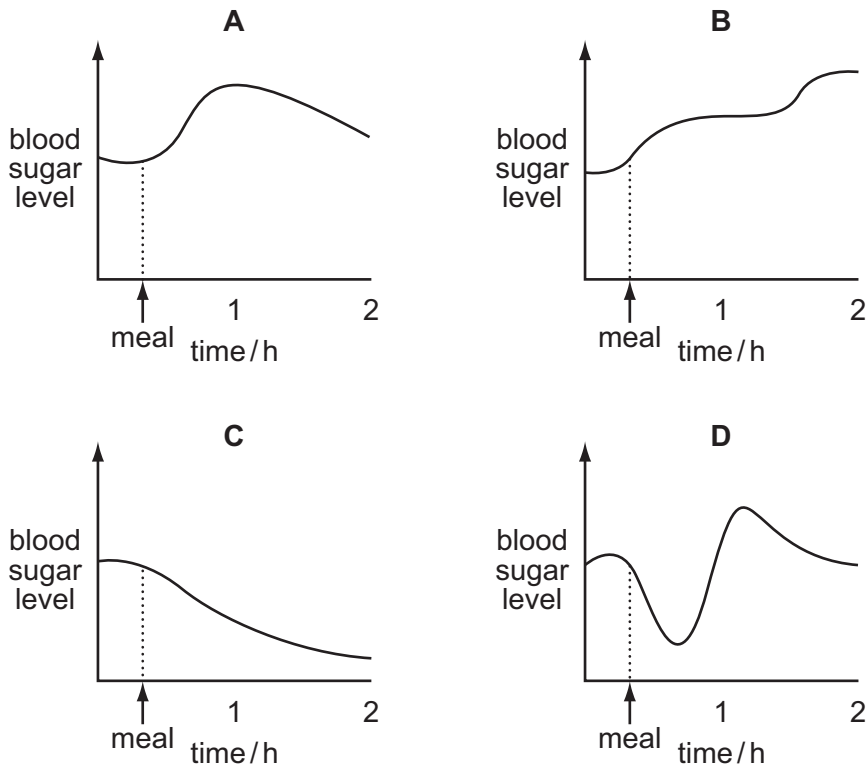
Which blood vessels contain oxygenated blood?

- A** 1 and 2 **B** 2 and 3 **C** 2 and 4 **D** 3 and 4

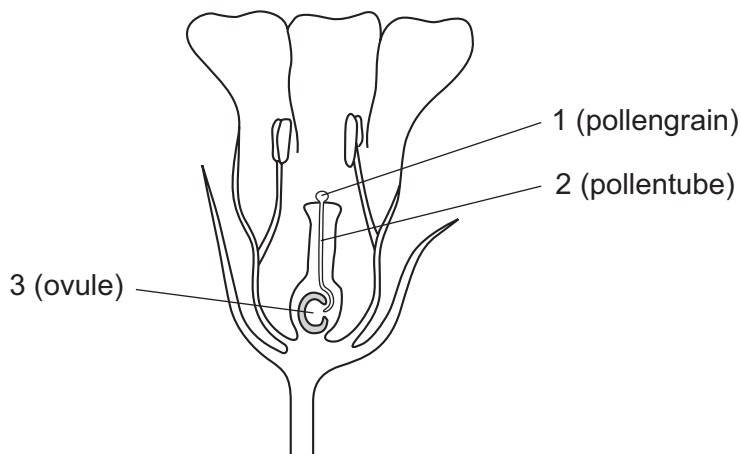
10 What describes the oxygen and carbon dioxide levels in blood as it passes through the lungs?

	oxygen level	carbon dioxide level
A	decreased	decreased
B	decreased	increased
C	increased	decreased
D	increased	increased

11 A person does not eat for several hours but then has a meal rich in carbohydrate. Which graph shows how the person's blood sugar level changes after the meal?



12 The diagram shows a flower just before fertilisation.



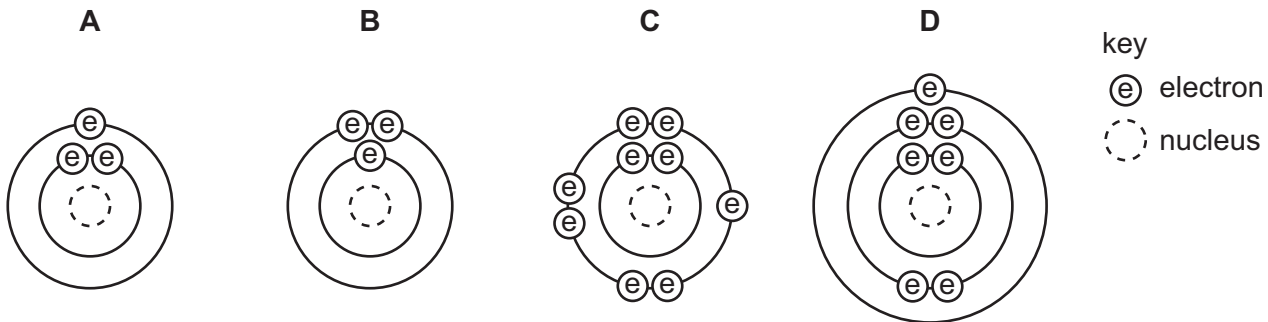
Where are the male and female gametes?

	male gamete	female gamete
A	1	2
B	1	3
C	2	3
D	3	2

13 What describes the placenta of a pregnant woman?

- A the cord connecting the baby to the mother, through which blood is circulated
- B the protective fluid-filled sac surrounding the embryo
- C the region of the female oviduct into which the egg is passed when it leaves the ovary
- D the structure where materials are exchanged between the mother's and the baby's tissues

14 What is the electronic structure of the atom ${}^7_3\text{Li}$?

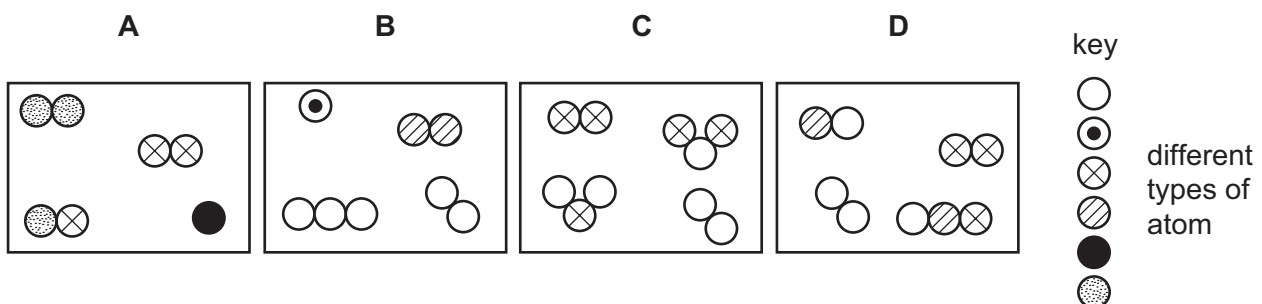


15 Which displayed formula correctly represents a molecule of carbon dioxide?

- A O – C – O
- B O = C = O
- C C – O – O
- D C = O = O

16 Four different mixtures of gases are made.

Which diagram represents a mixture containing only elements and **no** compounds?



8

17 The diagram shows an outline of the Periodic Table.

Which two elements have similar chemical properties?

V																							
	X																				W		
																					Y	Z	

- A V and W B V and X C W and Y D Y and Z

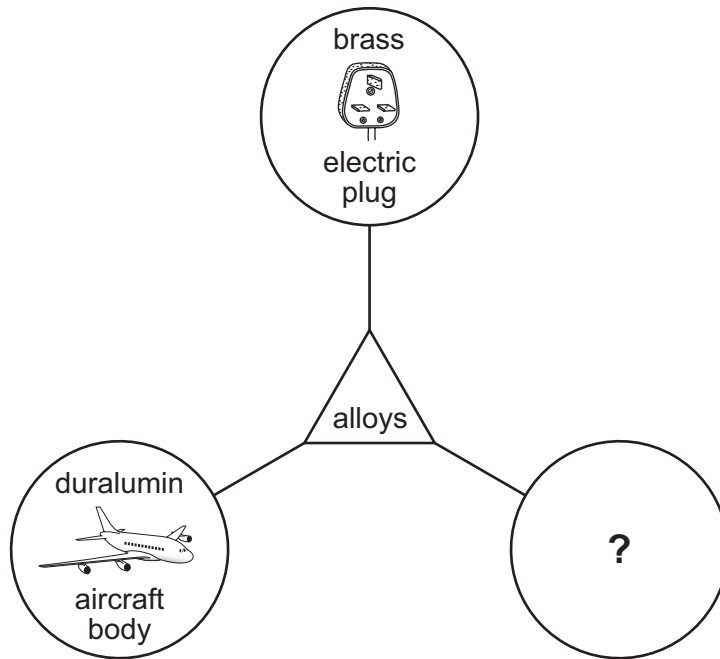
18 What is the reason for the lack of reactivity of the noble gases?

- A They have a complete outer shell of electrons.
B They have an even number of electrons.
C They have an even number of shells of electrons.
D They have two electrons in the first shell.

19 Which two elements react explosively with dilute acids?

- A Ca and Mg B Ca and K C K and Mg D K and Na

20 The diagram shows uses of alloys.



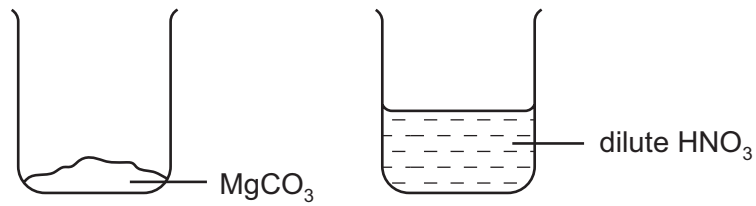
Which picture could be used to complete the diagram?

A	B	C	D
<p>argon light bulb</p>	<p>silicon computer chips</p>	<p>steel cutlery</p>	<p>zinc galvanised bucket</p>

21 In which tube does the iron nail go rusty in the shortest time?

A	B	C	D
<p>boiled tap water</p>	<p>tap water</p>	<p>oxygen gas</p>	<p>nitrogen gas</p>

22 The contents of the labelled beakers shown are mixed.



Which salt is formed?

- A magnesium nitrate
- B magnesium sulphate
- C manganese nitrate
- D manganese sulphate

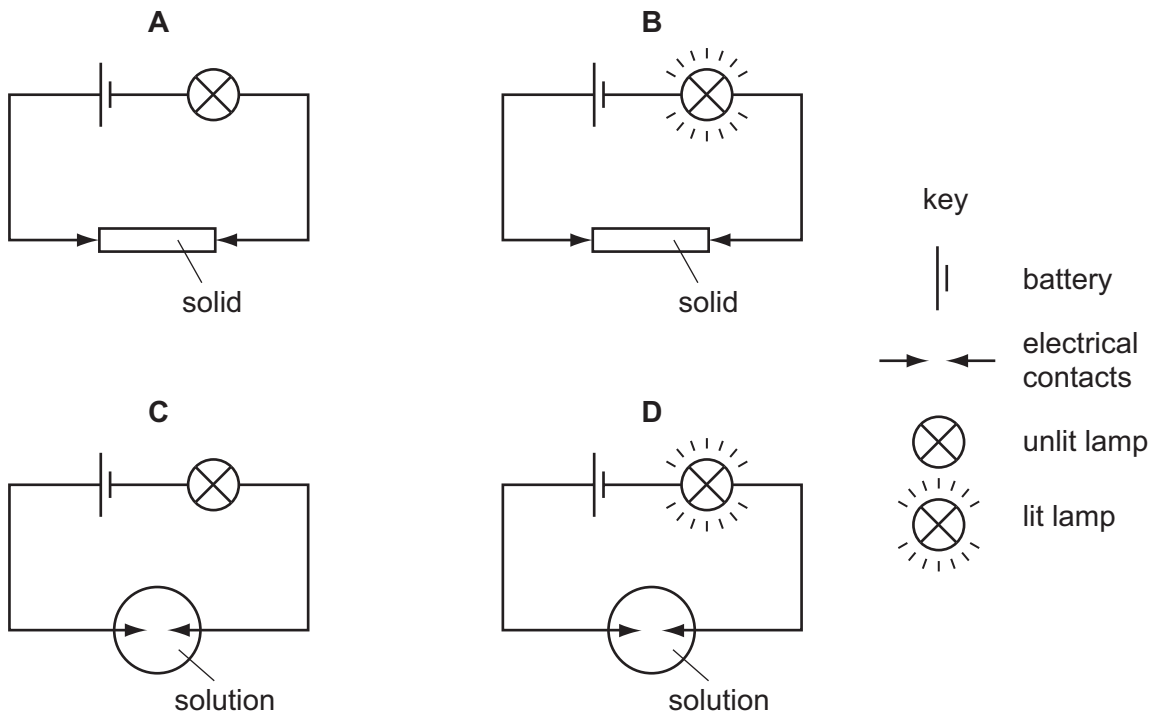
23 The table shows the results of tests on solution X.

test	result
blue litmus paper	turns red
aqueous silver nitrate	white precipitate

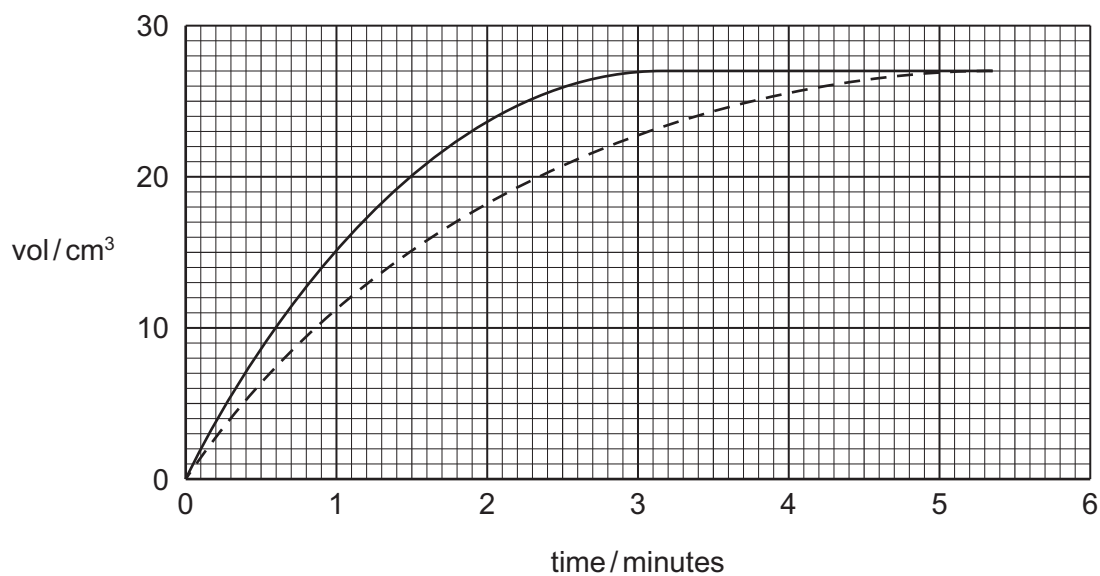
What could solution X contain?

- A HCl
- B HNO₃
- C NaCl
- D NaOH

24 Which diagram shows that an electrolyte is present?

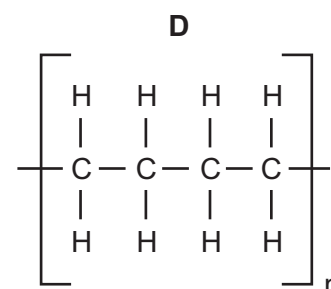
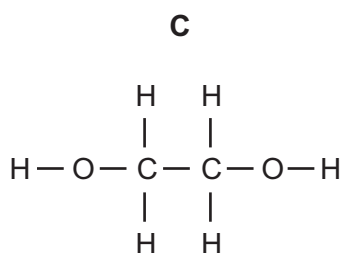
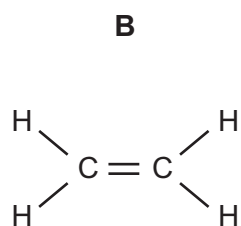
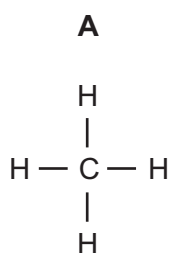


- 25 The solid line on the graph shows the volume of gas given off when calcium carbonate reacts with dilute hydrochloric acid.



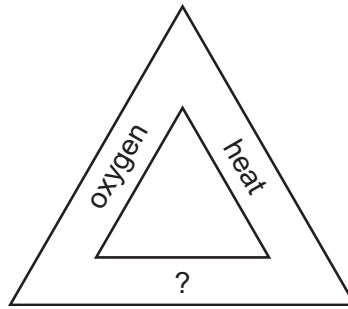
Which change to the conditions gives the results shown by the dotted line?

- A decrease the temperature of the acid
 - B decrease the size of the calcium carbonate pieces
 - C increase the concentration of the acid
 - D increase the mass of the calcium carbonate pieces
- 26 Which structure shows a polymer?



12


27 The diagram shows part of the fire triangle.



What completes the fire triangle?

- A carbon dioxide
- B flame
- C fuel
- D water

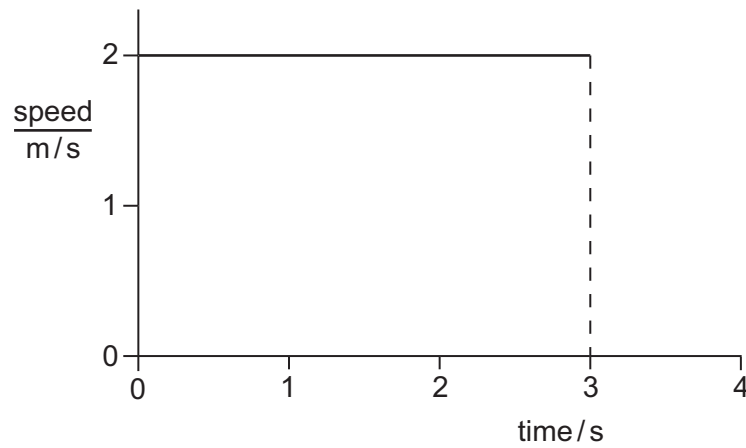
28 The diagram shows a measuring cylinder.



Which unit would be most suitable for its scale?

- A mm^2
- B mm^3
- C cm^2
- D cm^3

- 29 The diagram shows the speed-time graph for an object moving at constant speed.



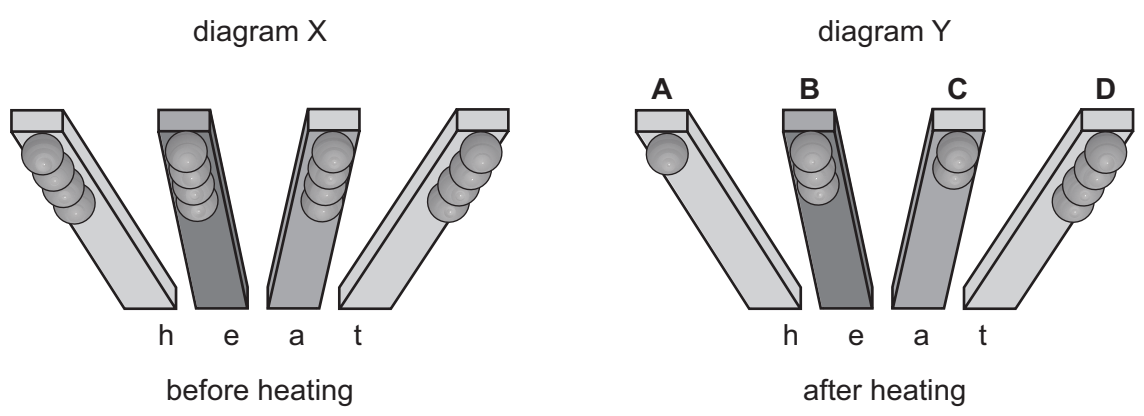
What is the distance travelled by the object in the first 3 s?

- A** 1.5 m **B** 2.0 m **C** 3.0 m **D** 6.0 m
- 30 Which statement about the mass of a falling object is correct?
- A** It decreases as the object falls.
B It is equal to the weight of the object.
C It is measured in newtons.
D It stays the same as the object falls.
- 31 Which of the following is a unit of density?
- A** cm^3/g
B g/cm^2
C g/cm^3
D kg/m^2

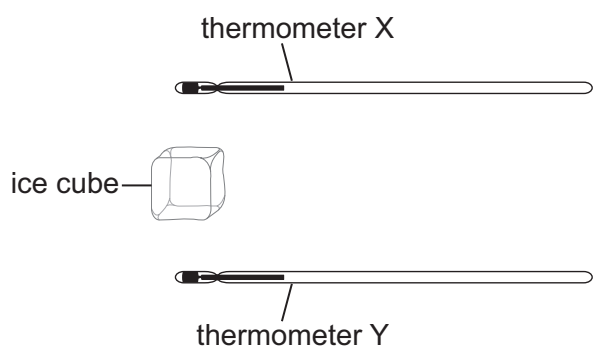
32 An experiment is set up to find out which metal is the best conductor of heat. Balls of wax are attached to rods made from different metals, as shown in diagram X.

The rods are heated at one end. Some of the balls fall off, leaving some as shown in diagram Y.

Which labelled metal is the best conductor of heat?



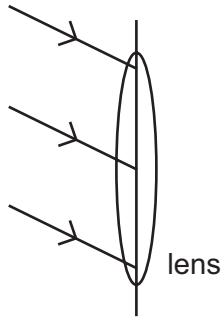
33 Thermometer X is held above an ice cube and thermometer Y is held the same distance below the ice cube. After several minutes, the reading on one thermometer changes. The ice cube does not melt.



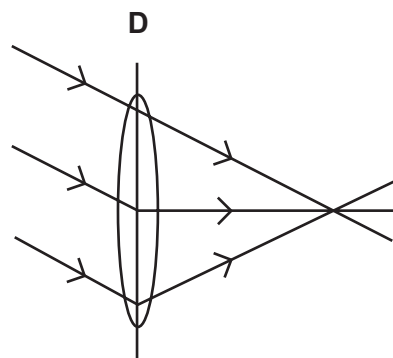
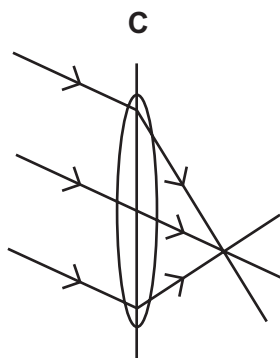
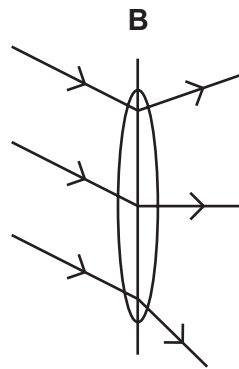
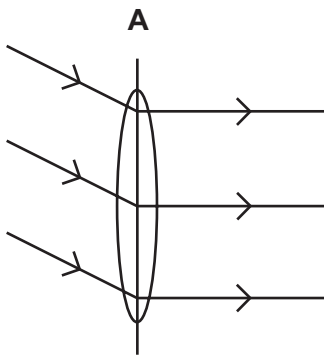
Which thermometer reading changes and why?

	thermometer	reason
A	X	cool air rises from the ice cube
B	X	warm air rises from the ice cube
C	Y	cool air falls from the ice cube
D	Y	warm air falls from the ice cube

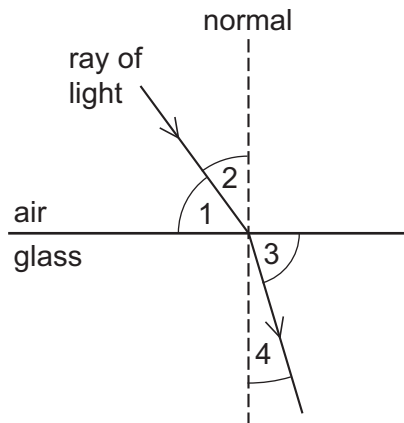
34 Three rays of light fall on a converging lens as shown.



Which diagram shows the path of the rays after passing through the lens?



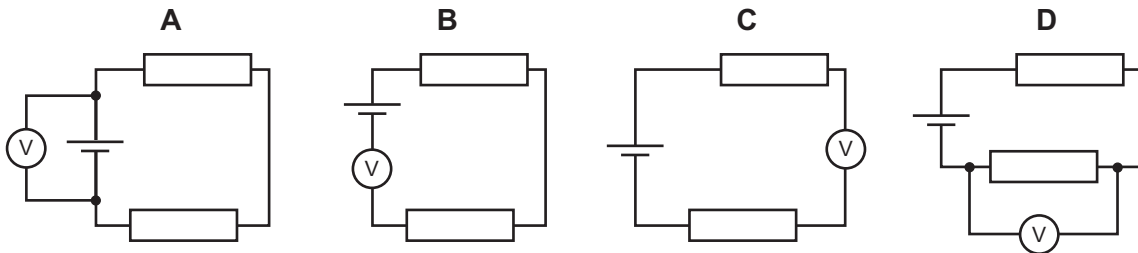
35 The diagram shows a ray of light entering a block of glass.



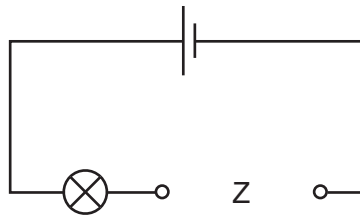
Which numbered angles are the angles of incidence and of refraction?

	angle of incidence	angle of refraction
A	1	3
B	1	4
C	2	3
D	2	4

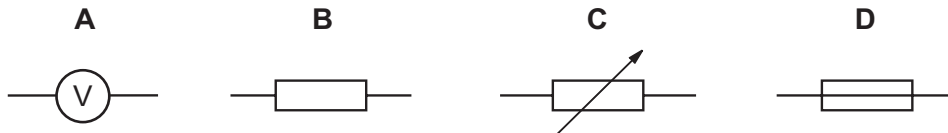
36 Which circuit shows how a voltmeter is connected to measure the potential difference across the cell?



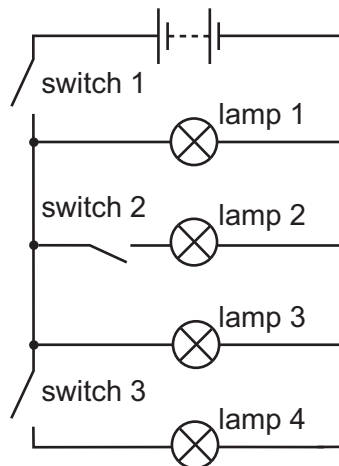
- 37 An electrical component is to be placed in the circuit at Z, to allow the brightness of the lamp to be varied from bright to dim.



What should be connected at Z?



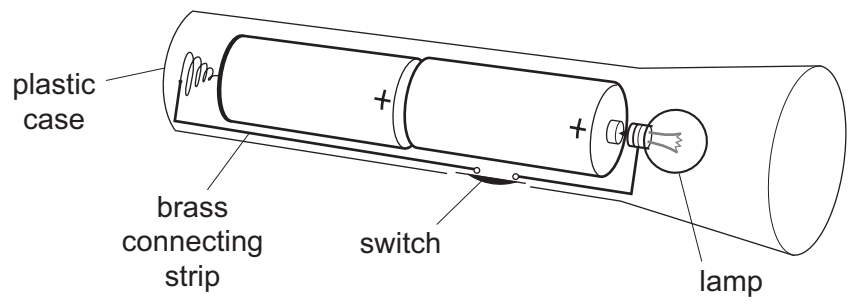
- 38 The circuit shown contains four lamps and three switches.



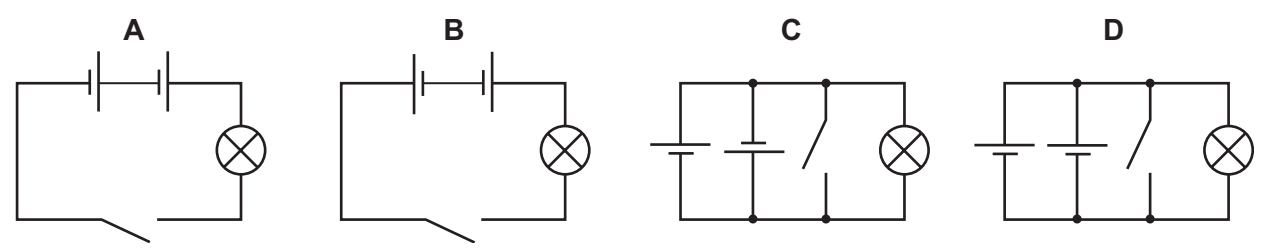
Which switches must be closed to light only lamps 1 and 3?

- A switch 1 only
- B switch 1 and switch 2 only
- C switch 1 and switch 3 only
- D switch 2 and switch 3 only

39 The diagram shows a torch containing two 2 V cells, a switch and a lamp.



What is the circuit diagram for the torch?



40 Which line correctly describes α -particles?

	electric charge	penetrates 1 cm of aluminium?
A	negative	yes
B	negative	no
C	positive	yes
D	positive	no

DATA SHEET
The Periodic Table of the Elements

Group																													
I	II	III										IV	V	VI	VII	0													
7 Li Lithium 3	9 Be Beryllium 4	1 H Hydrogen 1										12 C Carbon 6	14 N Nitrogen 7	16 O Oxygen 8	19 F Fluorine 9	20 Ne Neon 10													
23 Na Sodium 11	24 Mg Magnesium 12	13 Al Aluminium 13	27 Al Aluminium 13	28 Si Silicon 14	31 P Phosphorus 15	32 S Sulphur 16	35.5 Cl Chlorine 17	40 Ar Argon 18	39 K Potassium 19	40 Ca Calcium 20	45 Sc Scandium 21	48 Ti Titanium 22	51 V Vanadium 23	52 Cr Chromium 24	55 Mn Manganese 25	56 Fe Iron 26	59 Co Cobalt 27	59 Ni Nickel 28	64 Cu Copper 29	65 Zn Zinc 30	70 Ga Gallium 31	73 Ge Germanium 32	75 As Arsenic 33	79 Se Selenium 34	80 Br Bromine 35	84 Kr Krypton 36			
85 Rb Rubidium 37	88 Sr Strontium 38	89 Y Yttrium 39	91 Zr Zirconium 40	93 Nb Niobium 41	96 Mo Molybdenum 42	101 Ru Ruthenium 44	106 Pd Palladium 46	108 Ag Silver 47	112 Cd Cadmium 48	115 In Indium 49	119 Sn Tin 50	122 Sb Antimony 51	127 I Iodine 53	131 Xe Xenon 54	133 Cs Caesium 55	137 Ba Barium 56	178 Hf Hafnium 72	181 Ta Tantalum 73	184 W Tungsten 74	192 Ir Iridium 77	195 Pt Platinum 78	197 Au Gold 79	201 Hg Mercury 80	204 Tl Thallium 81	207 Pb Lead 82	209 Bi Bismuth 83	84 Po Polonium 84	85 At Astatine 85	86 Rn Radon 86
87 Fr Francium 87	226 Ra Radium 88	227 Ac Actinium 89											140 Ce Cerium 58	141 Pr Praseodymium 59	144 Nd Neodymium 60	150 Sm Samarium 62	152 Eu Europium 63	157 Gd Gadolinium 64	159 Tb Terbium 65	162 Dy Dysprosium 66	165 Ho Holmium 67	167 Er Erbium 68	169 Tm Thulium 69	173 Yb Ytterbium 70	175 Lu Lutetium 71				
		Key		a	X	b											232 Th Thorium 90	238 U Uranium 92	238 Np Neptunium 93	238 Am Americium 95	238 Pu Plutonium 94	238 Cm Curium 96	238 Bk Berkelium 97	238 Cf Californium 98	238 Es Einsteinium 99	238 Fm Fermium 100	238 Md Mendelevium 101	238 No Nobelium 102	238 Lr Lawrencium 103

*58-71 Lanthanoid series
90-103 Actinoid series

a = relative atomic mass
X = atomic symbol
b = proton (atomic) number

The volume of one mole of any gas is 24 dm³ at room temperature and pressure (r.t.p.).