



date

Centre Number

Candidate Name _____

**International General Certificate of Secondary Education
CAMBRIDGE INTERNATIONAL EXAMINATIONS
CO-ORDINATED SCIENCES
PAPER 2**

0654/2

OCTOBER/NOVEMBER SESSION 2002

2 hours

Candidates answer on the question paper.
No additional materials are required.

TIME 2 hours

INSTRUCTIONS TO CANDIDATES

Write your name, Centre number and candidate number in the spaces at the top of this page.

Answer **all** questions.

Write your answers in the spaces provided on the question paper.

INFORMATION FOR CANDIDATES

The number of marks is given in brackets [] at the end of each question or part question.

A copy of the Periodic Table is printed on page 20.

FOR EXAMINER'S USE	
1	
2	
3	
4	
5	
6	
7	
8	
9	
10	
11	
12	
TOTAL	

1 Fig. 1.1 shows a food web for an ecosystem in Africa.

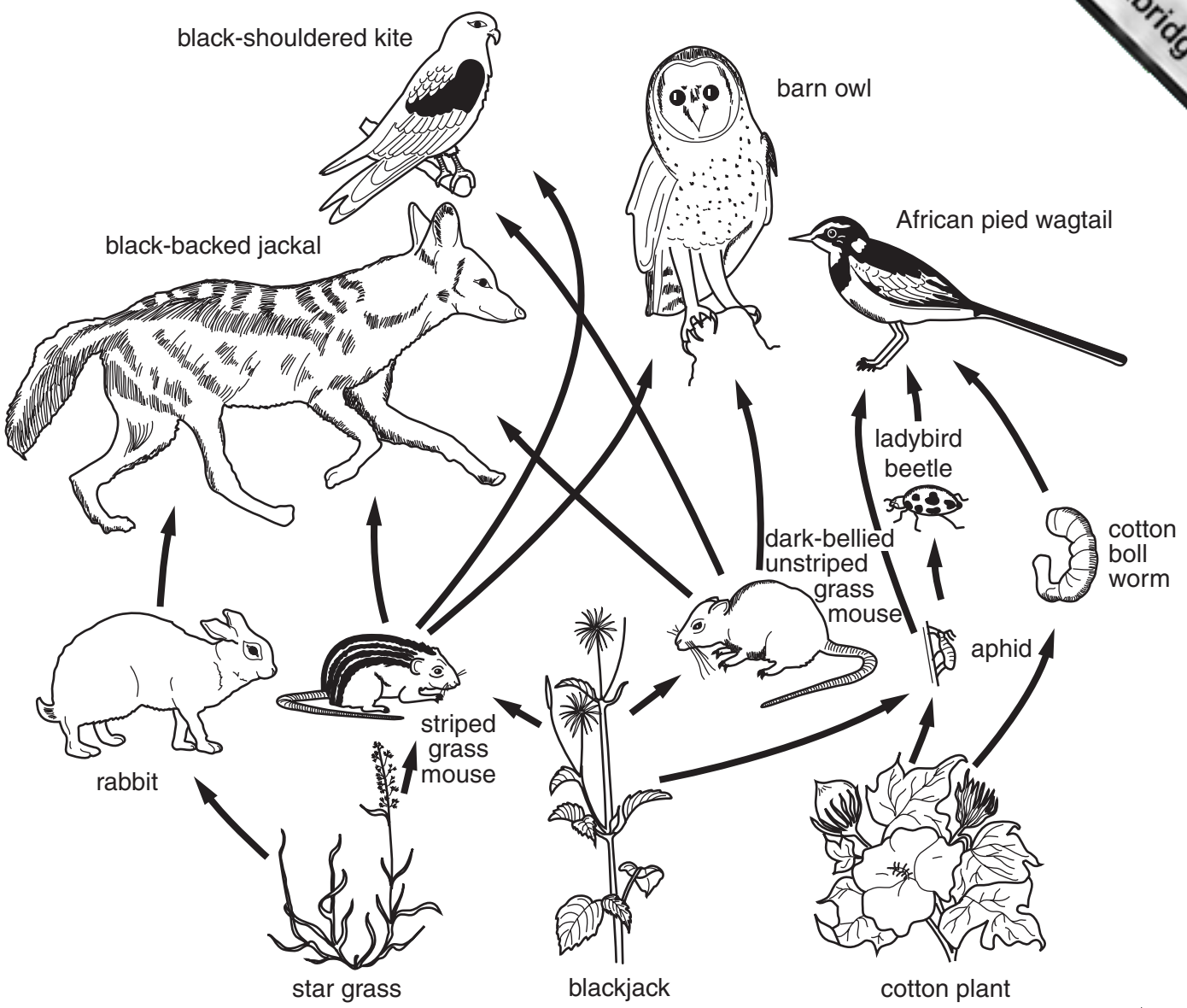


Fig. 1.1

(a) Explain the meaning of the term *ecosystem*.

.....

.....

.....[2]

(b) (i) Using the information in Fig. 1.1, write one food chain that contains four organisms.

.....

.....[1]

(ii) Name the producer in this food chain.

.....[1]

(c) The arrows on the food web diagram show the direction of energy flow.

(i) Describe how energy enters the ecosystem.

.....
.....
.....[2]

(ii) Describe how energy passes from the rabbit to the black-backed jackal.

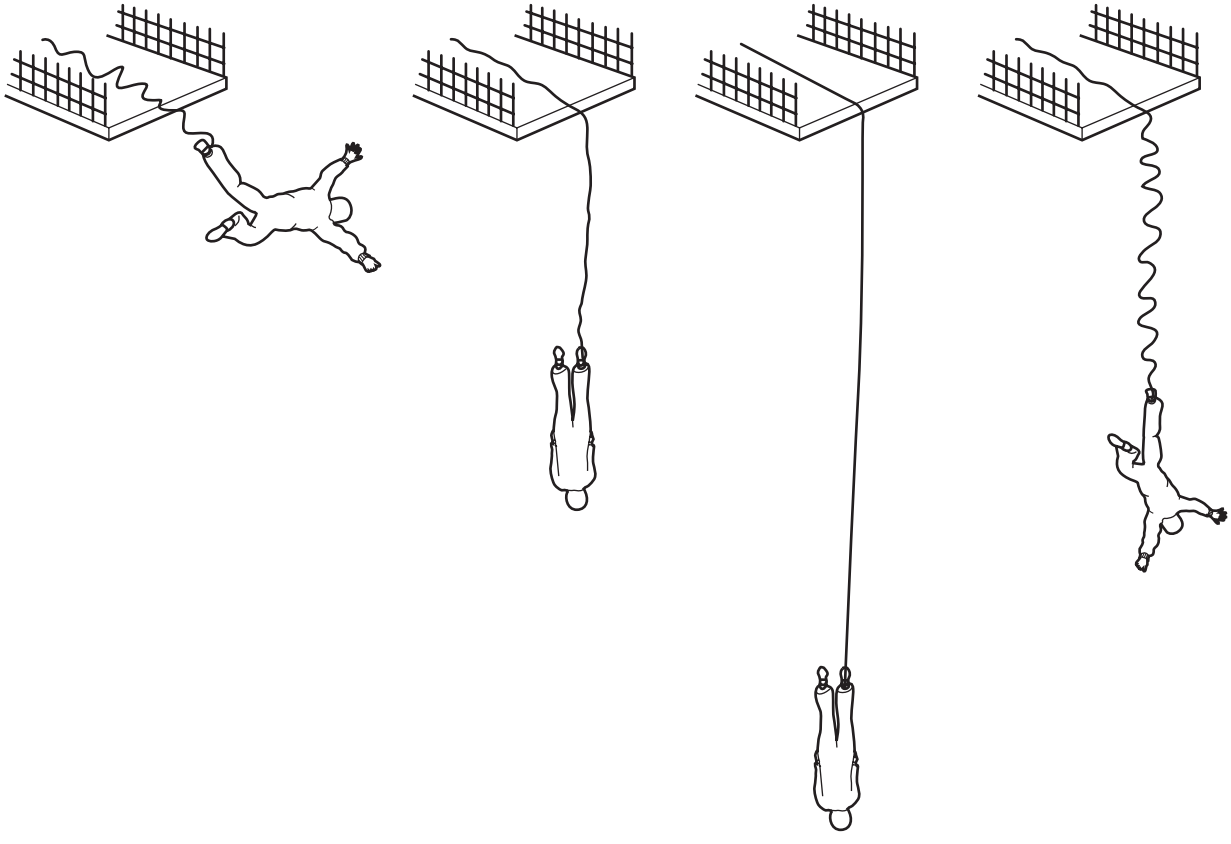
.....
.....
.....[2]

(iii) Suggest which of the following animals will have the **smallest** population, and give a reason for your answer.

- aphid black-shouldered kite star grass striped grass mouse**

.....
.....
.....[2]

2 A stuntman jumps from a platform to which he is attached by a strong elastic rope.
Fig. 2.1 shows what happens.



Stage A
A stuntman jumps
from a platform

Stage B
The rope is straight
but not stretched

Stage C
The rope
is stretched

Stage D
The rope has pulled
the stuntman back

Fig. 2.1

(a) (i) Describe the forces acting on the stuntman at stage B.

.....
.....

(ii) Describe the forces acting on the stuntman at stage C.

.....
.....

[2]

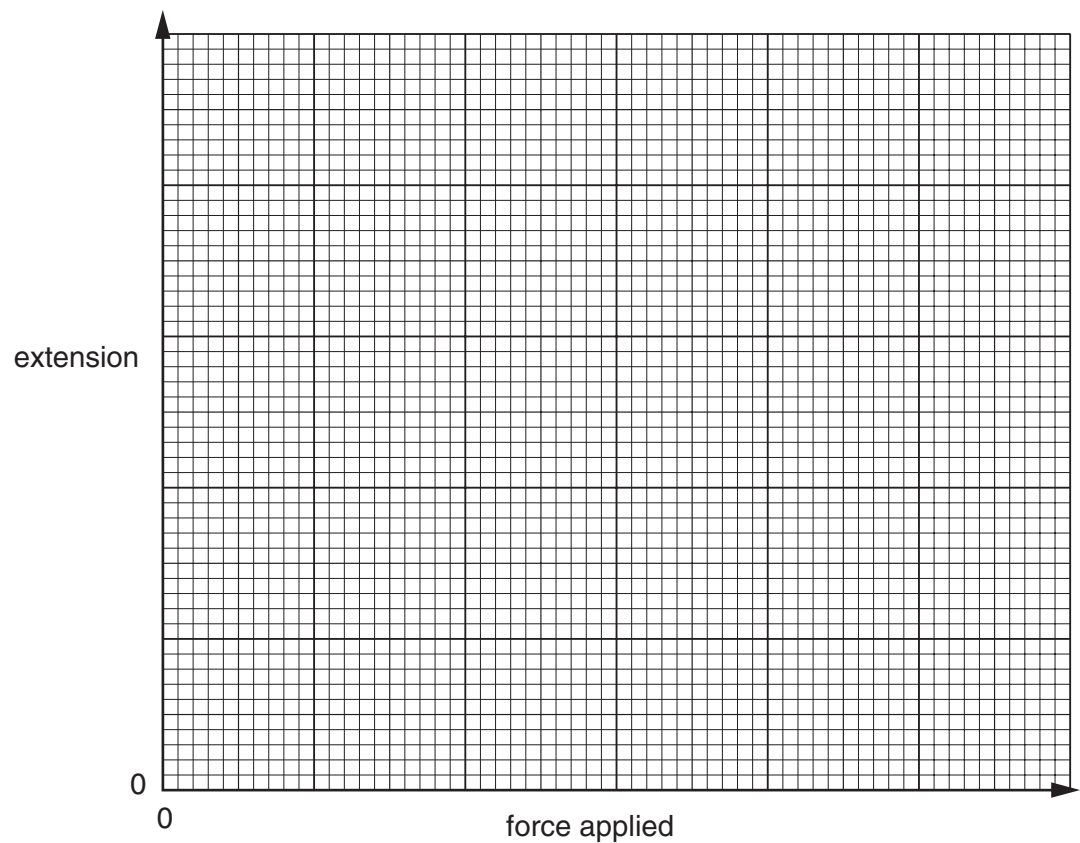
(b) At which stage **A, B, C** or **D** does the stuntman have the most kinetic energy?
Explain your answer.

stage

explanation

.....[2]

(c) The rope is elastic and behaves like a spring.
On the axes below, sketch a line to show the relationship between the force applied to a spring and its extension.



[2]

3 The diagrams **A** to **E** in Fig. 3.1 show the displayed formulae of some hydrocarbon molecules.

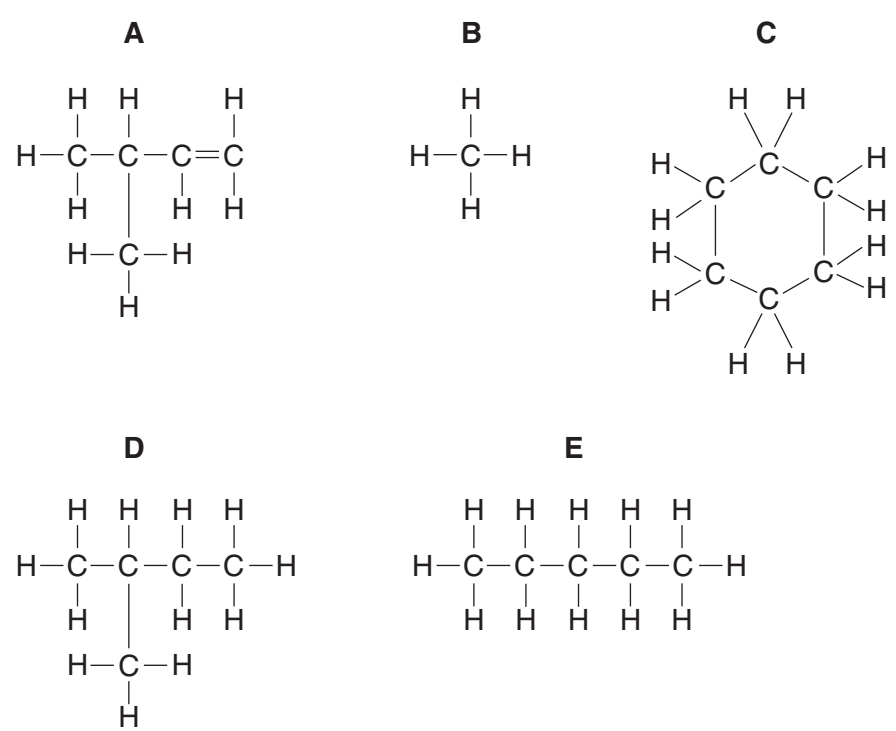


Fig. 3.1

- (a) Give the letter of the diagram that shows a molecule of
- methane,
 - an unsaturated hydrocarbon,
 - an **alkane** which has a branched chain of carbon atoms. [3]

(b) Methane is the main compound in natural gas. Natural gas is a fossil fuel. Biogas is another source of methane. Biogas is produced by the action of bacteria on animal and plant waste.

- (i) Explain briefly why natural gas is called a fossil fuel.
-
-
- [2]

- (ii) A student carried out two experiments to compare the properties of natural gas and biogas.
- In the first experiment he bubbled each gas separately through limewater.
- In the second experiment he measured the heat energy released when 1.0 dm³ of each gas was burnt.
- His results are shown in Fig. 3.2.

	reaction with limewater	heat energy released when 1.0 dm ³ is burned / J
natural gas	no reaction	37 000
biogas	cloudy	22 250

Fig. 3.2

Explain these results.

.....

.....

.....

.....[2]

- (c) Much of the ethene produced by the petrochemical industry is used to make poly(ethene) which is a thermoplastic polymer.
- Explain the meaning of the term *thermoplastic polymer*.

.....

.....

.....

.....[2]

4 (a) Fig. 4.1 shows a bean seed, cut in half.

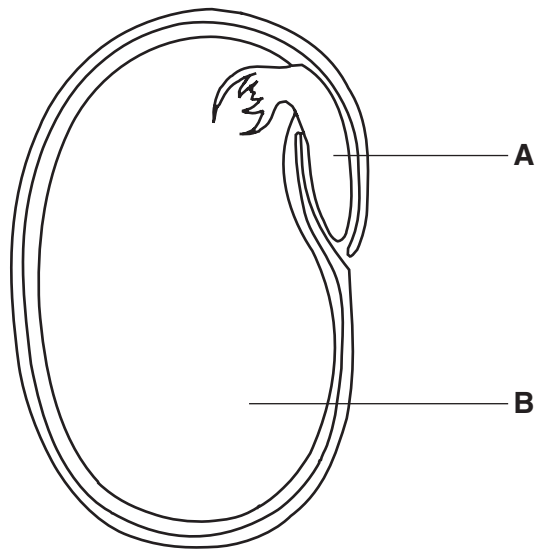


Fig. 4.1

(i) Name the parts labelled **A** and **B**.

A

B

[2]

(ii) From which part of the bean flower has the seed formed?

.....[1]

(b) An experiment was carried out to find the conditions that mustard seeds need for germination. Four sets of mustard seeds, all of the same age and taken from the same plant, were placed on damp cotton wool in petri dishes. The dishes were left in different conditions, as shown in Fig. 4.2.

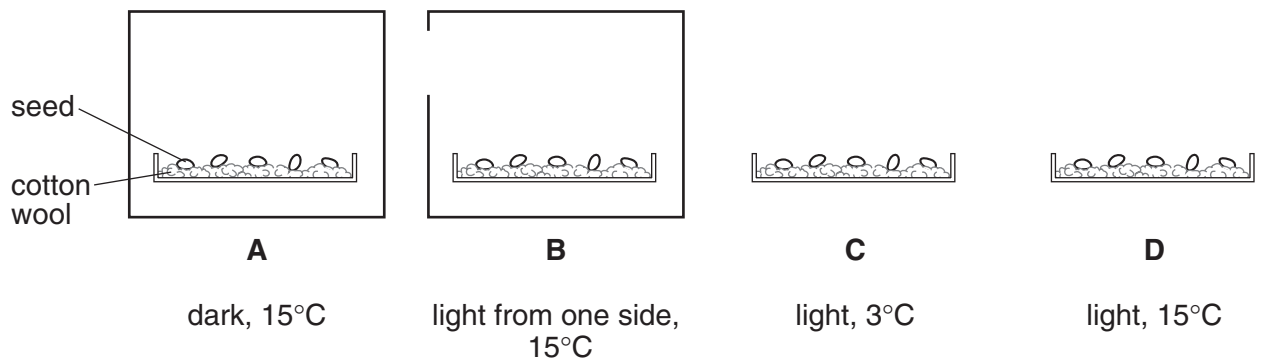


Fig. 4.2

(i) The seeds in dishes **A**, **B** and **D** germinated, but those in **C** did not. What conclusions can be made from these results?

.....

.....

.....[2]

(ii) After one week, the seedlings in dish **A** and dish **B** had grown tall and thin. Describe and explain **one** difference you would expect between the seedlings in dish **A** and those in dish **B**.

description

explanation

.....[2]

5 Some power stations burn fossil fuels to generate electricity. The energy released is used to boil water and turn it into steam. The moving steam turns a turbine which drives a generator to produce electricity.

This is shown in Fig. 5.1.

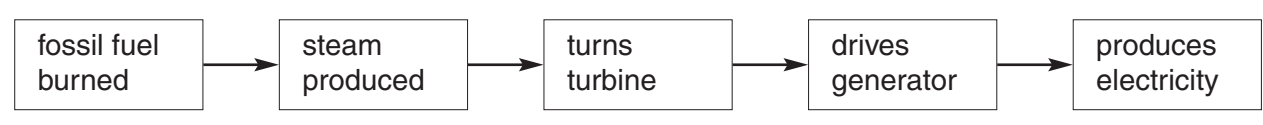


Fig. 5.1

- (a) The turbine in a power station has an efficiency of 40%.
 - (i) Calculate the energy input per second if the turbine output is 100 megajoules per second.
(1 megajoule = 1 000 000 joules).

..... megajoules per second [1]

- (ii) What happens to the energy which is not usefully converted by the turbine?
.....[1]

- (iii) What is the power output of the turbine?
..... megawatts [1]

(b) (i) State two reasons, other than cost, why engineers are developing alternatives to fossil fuels as sources of energy to generate electricity.

- 1.
- 2.[2]

(ii) State **one** alternative energy source and briefly describe how it can be used to generate electricity.

energy source

description

.....[2]

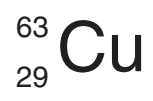
(c) The electrical output from the generator is at a low voltage. For transmission, this voltage must be increased.

- (i) Name the device which does this.
.....[1]

- (ii) Explain why the electricity is transmitted at a high voltage.
.....



6 The full chemical symbols of atoms of copper and rubidium are shown below.



- (a) State the number of
- protons in the copper atom,
 - neutrons in the rubidium atom,
 - electrons in the copper atom,
 - electrons in the outer shell of the rubidium atom. [4]


(b) (i) Rubidium is a member of the family of alkali metals.
To what family of metals does copper belong?
.....[1]

(ii) Suggest **one** difference, apart from colour, in the properties of copper and rubidium.
.....
.....[1]

(c) Copper can be produced by heating a mixture of copper oxide and carbon.

(i) Complete the **word** equation for the reaction
copper oxide + carbon → [1]

(ii) Explain briefly why 80.0 g of copper oxide gives only 64.0 g of copper metal.
.....
.....
.....[1]



7 A student is investigating some properties of metals.

(a) An iron rod is heated at one end.

(i) Describe what happens to the **atoms** in the iron, when it is heated.

.....
.....
.....[2]

(ii) Explain how the iron atoms transfer heat energy along the rod.

.....
.....[2]

(b) The student tries to stretch an iron rod. Explain, in terms of the atoms, why this is very difficult.

.....
.....[1]

(c) The student measured the specific heating capacity of a block of copper of mass 0.5 kg. He found it to be 400 J/kg °C. The student repeated the experiment using a block of copper of mass 1 kg.

Predict the value for the specific heating capacity that the student would find for this block.

Explain your answer.

predicted value J/kg °C

explanation
.....[2]

(d) The student heated a block of copper until it melted. While it was melting, the temperature of the copper did not change, even though it was still being heated. Explain why this happened.

.....
.....
.....[2]

8 Fig. 8.1 shows a sperm cell.

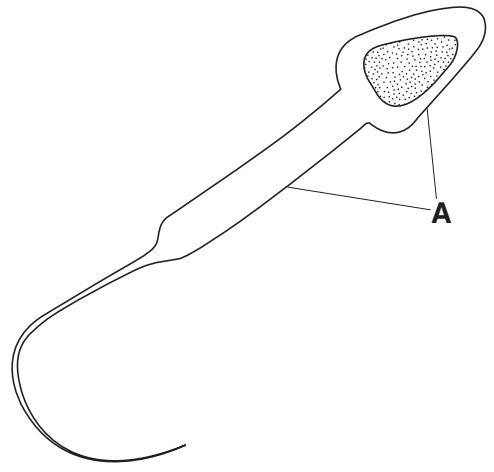


Fig. 8.1

(a) Name the part labelled **A**, and describe its function.

.....

.....

.....[2]

(b) (i) Draw a label line to the part of the sperm cell that contains chromosomes, and label it **B**. [1]

(ii) Most cells in the human body contain 46 chromosomes, but human sperm cells contain only 23 chromosomes. Explain why this is so.

.....

.....

.....[2]

(iii) Chromosomes contain DNA. Describe the functions of DNA in a cell.

.....

.....

.....[2]

(c) (i) Name the part of the human body in which sperm cells are made.

.....[1]

(ii) This part of the body also secretes the hormone testosterone. Describe **one** function of testosterone.

.....

9 The Earth provides raw materials which can be processed into useful products.

(a) Choose products from the list to complete the right hand column of the table, Fig. 9.1. The first one has been done for you.

aluminium bleach ceramics fuels glass paper steel

raw material	useful product from this raw material
petroleum	fuels
wood	
clay	
iron ore	
sand and metal oxides	

Fig. 9.1 [4]

(b) Air is a mixture of elements and compounds. Nitrogen is produced by the fractional distillation of air which has been liquefied.

(i) State **one** difference between a mixture of two elements and a compound of the same elements.

.....
.....
.....[1]

(ii) Suggest, in terms of changes in pressure and temperature, how air may be liquefied.

.....
.....[2]

(iii) Explain briefly why it is possible to separate the components in liquefied air by fractional distillation.

.....
.....[1]

(c) Nitrogen is used to make ammonia, NH₃, by reacting it with hydrogen.

(i) The reaction requires a catalyst.

State the purpose of a catalyst in chemical reactions.

.....
.....[1]

(ii) The reaction also requires a high temperature and a high pressure.
Explain why these conditions are needed.

.....
.....[1]

10 An electric light bulb is marked '110 V, 100 W'. It contains a length of fine tungsten wire about 1 metre long. The wire is wound in a coil, as shown in Fig. 10.1.

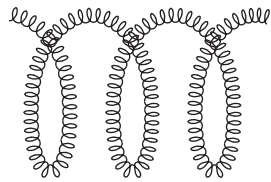
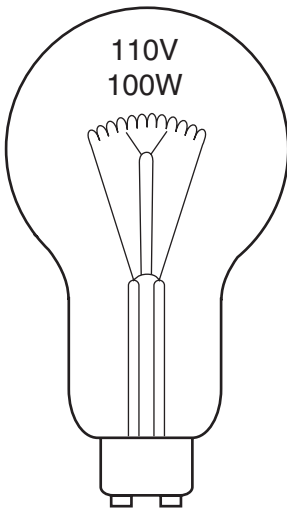


Fig. 10.1

(a) State the power consumption of this light bulb.

.....[1]

(b) When the bulb is switched on, the resistance of the wire is about 600 Ω.
If the bulb was made with only half the length of tungsten wire, what effect would it have on the resistance?

.....[1]

(c) The bulb is on. Describe the energy transfers that are taking place in the light bulb by completing the sentence.

..... energy is transferred into energy
and energy. [3]

(d) Visible light is one part of the electromagnetic spectrum.
Name **one** other part of the electromagnetic spectrum and give a use for it.

part of the electromagnetic spectrum
use[2]

11 (a) A tube made from a partially permeable membrane was filled with a mixture of starch and glucose. The tube was then placed in a beaker of water, as shown in Fig. 11.1.

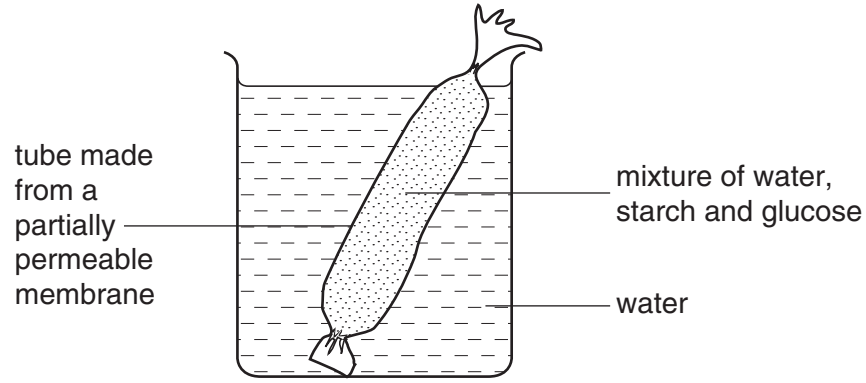


Fig. 11.1

The apparatus was left for one hour. The contents of the tube and the water in the beaker were then tested for starch and for reducing sugar. The table shows the results.

test	result	
	contents of tube	water in beaker
starch	blue-black	orange-brown
reducing sugar	brick red precipitate	brick red precipitate

(i) Name the reagent that would be used for the starch test.
.....[1]

(ii) Explain why the results of the starch test for the contents of the tube and for the water in the beaker are different.
.....
.....
.....[2]

(iii) Explain why the results of the reducing sugar test for the contents of the tube and for the water in the beaker are the same.
.....
.....
.....[2]

(b) The enzyme amylase is found in saliva.
Describe the function of amylase in the human digestive system.
.....
.....

12 A student uses pH and temperature sensors connected to a computer to investigate liquids. The apparatus is shown in Fig. 12.1.

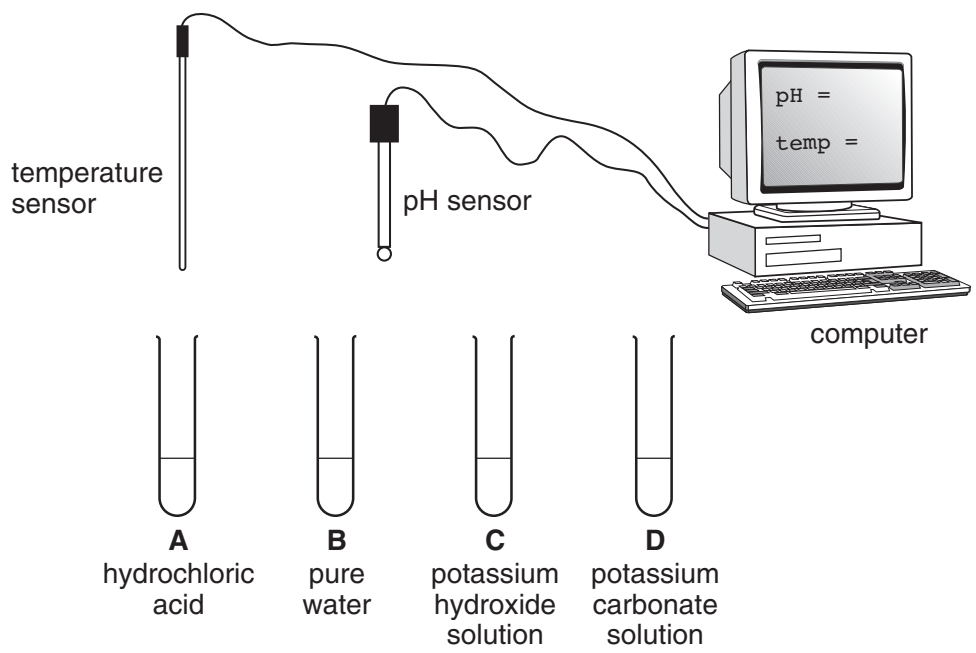


Fig. 12.1

(a) (i) Predict the pH value shown on the computer screen when the pH sensor is placed into the water in tube B.

.....[1]

(ii) The student places both the temperature and pH probes together into the hydrochloric acid in tube A. She then adds the potassium hydroxide solution from tube C slowly into tube A. Describe and explain the pH and temperature changes which she observes.

pH

temperature

(iii) Complete the word equation for the reaction



[2]

(b) Predict and explain briefly what would be observed, other than pH or temperature changes, when some fresh hydrochloric acid is added to the potassium carbonate solution in tube D.

.....
.....[2]

DATA SHEET
The Periodic Table of the Elements

		Group																													
I	II	III	IV	V	VI	VII	0					0																			
7 Li Lithium 4	9 Be Beryllium 4	1 H Hydrogen 1	12 C Carbon 6	14 N Nitrogen 7	16 O Oxygen 8	19 F Fluorine 9	20 Ne Neon 10	11 B Boron 5	13 Al Aluminium 13	14 Si Silicon 14	15 P Phosphorus 15	17 Cl Chlorine 17	18 Ar Argon 18																		
23 Na Sodium 12	24 Mg Magnesium 12	27 Co Cobalt 27	28 Ni Nickel 28	29 Cu Copper 29	30 Zn Zinc 30	31 Ga Gallium 31	32 Ge Germanium 32	33 As Arsenic 33	34 Se Selenium 34	35 Br Bromine 35	36 Kr Krypton 36	39 K Potassium 19	40 Ca Calcium 20	45 Sc Scandium 21	48 Ti Titanium 22	51 V Vanadium 23	52 Cr Chromium 24	55 Mn Manganese 25	56 Fe Iron 26	59 Co Cobalt 27	64 Cu Copper 29	65 Zn Zinc 30	70 Ga Gallium 31	73 Ge Germanium 32	75 As Arsenic 33	79 Se Selenium 34	80 Br Bromine 35	84 Kr Krypton 36			
85 Rb Rubidium 38	88 Sr Strontium 38	89 Y Yttrium 39	91 Zr Zirconium 40	93 Nb Niobium 41	101 Ru Ruthenium 44	103 Rh Rhodium 45	106 Pd Palladium 46	108 Ag Silver 47	112 Cd Cadmium 48	115 In Indium 49	119 Sn Tin 50	122 Sb Antimony 51	127 I Iodine 53	131 Xe Xenon 54	133 Cs Caesium 56	137 Ba Barium 56	178 Hf Hafnium 72	181 Ta Tantalum 73	184 W Tungsten 74	186 Re Rhenium 75	190 Os Osmium 76	192 Ir Iridium 77	195 Pt Platinum 78	197 Au Gold 79	201 Hg Mercury 80	204 Tl Thallium 81	207 Pb Lead 82	209 Bi Bismuth 83	210 Po Polonium 84	210 At Astatine 85	210 Rn Radon 86
226 Ra Radium 88	227 Ac Actinium 89	140 Ce Cerium 58	141 Pr Praseodymium 59	144 Nd Neodymium 60	146 Pm Promethium 61	150 Sm Samarium 62	152 Eu Europium 63	157 Gd Gadolinium 64	162 Dy Dysprosium 66	163 Ho Holmium 67	165 Er Erbium 68	167 Tm Thulium 69	169 Yb Ytterbium 70	173 Lu Lutetium 71	232 Th Thorium 90	232 Pa Protactinium 91	238 U Uranium 92	238 Np Neptunium 93	241 Am Americium 95	243 Cm Curium 96	247 Bk Berkelium 97	251 Cf Californium 98	252 Es Einsteinium 99	257 Fm Fermium 100	261 Md Mendelevium 101	265 No Nobelium 102	269 Lr Lawrencium 103				

87-103 Lanthanoid series
104-110 Actinoid series

a = relative atomic mass
 X = atomic symbol
 b = proton (atomic) number

The volume of one mole of any gas is 24 dm³ at room temperature and pressure (r.t.p.).