



Cambridge International Examinations
Cambridge International General Certificate of Secondary Education


CANDIDATE
NAME

CENTRE
NUMBER

--	--	--	--	--

CANDIDATE
NUMBER

--	--	--	--



CO-ORDINATED SCIENCES

0654/23

Paper 2 (Core)

October/November 2014

2 hours

Candidates answer on the Question Paper.

No Additional Materials are required.

READ THESE INSTRUCTIONS FIRST

Write your Centre number, candidate number and name on all the work you hand in.

Write in dark blue or black pen.

You may use an HB soft pencil for any diagrams, graphs, tables or rough working.

Do not use staples, paper clips, glue or correction fluid.

DO NOT WRITE IN ANY BARCODES.

Answer **all** questions.

Electronic calculators may be used.

You may lose marks if you do not show your working or if you do not use appropriate units.

A copy of the Periodic Table is printed on page 32.

At the end of the examination, fasten all your work securely together.

The number of marks is given in brackets [] at the end of each question or part question.

This document consists of **31** printed pages and **1** blank page.

- 1 Fig. 1.1 shows what happens when a small piece of potassium metal reacts with chlorine gas inside a container.

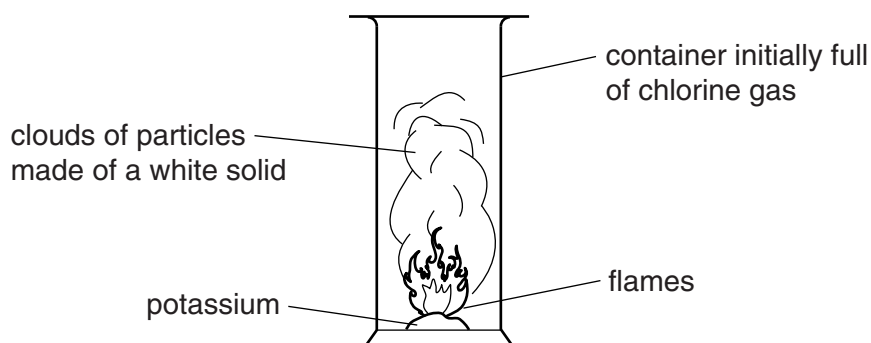


Fig. 1.1

When the reaction has finished, particles of a white solid compound are left in the container.

- (a) (i) Suggest the name of the white solid compound.

.....[1]

- (ii) Fig. 1.2 shows diagrams of a potassium atom and a chlorine atom.

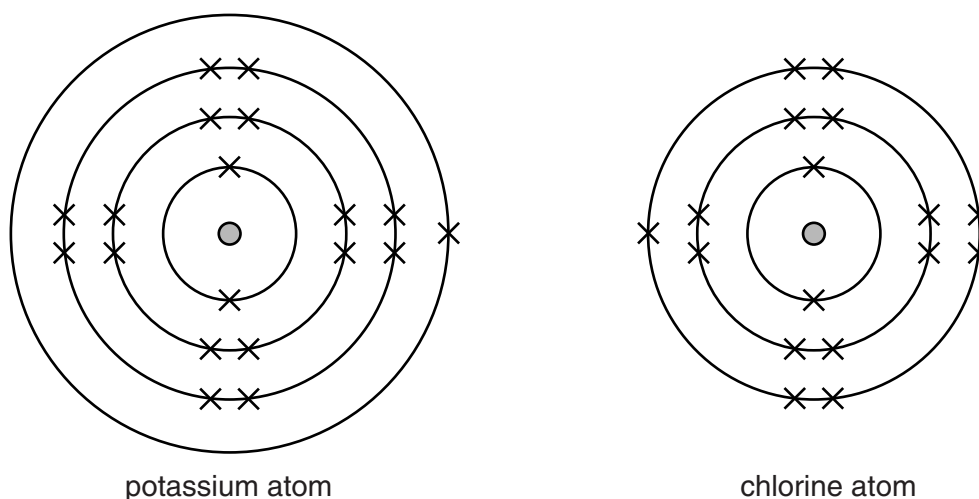


Fig. 1.2

Describe what happens to these atoms when they change into ions.

.....

[2]

3

- (b) A chemical change occurs when an electrical current passes through a solution of the compound copper chloride.

Fig. 1.3 shows apparatus that can be used to investigate this chemical change.

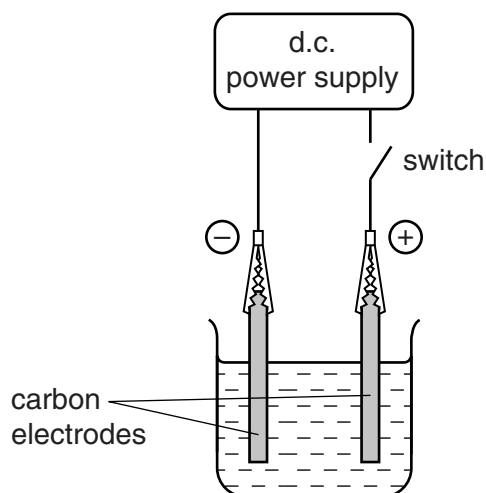


Fig. 1.3

- (i) Name the process which occurs in the apparatus shown in Fig. 1.3 when the switch is closed.[1]
- (ii) On Fig. 1.3 use label lines to label the cathode and the electrolyte. [2]
- (iii) When the switch is closed, bubbles of chlorine appear on the surface of the anode.

Describe a safe chemical test for chlorine.

.....

.....[2]

- (c) A student investigates whether there is any change in the mass of the electrodes during the process shown in Fig. 1.3.

She uses the apparatus shown in Fig. 1.3 and her results are shown in Table 1.1.

Table 1.1

electrode	mass before the switch is closed /g	mass after the switch has been closed for some time /g
anode	48.3	48.3
cathode	47.6	47.9

- (i) State the changes in mass of the electrodes during the experiment.

.....
.....[1]

- (ii) Explain the results obtained for the cathode.

.....
.....[1]

2 Fig. 2.1 shows the chromosomes from the nucleus of a single cell of a human male.




Fig. 2.1

(a) (i) State the number of chromosomes that can be seen in Fig. 2.1.

.....[1]

(ii) On Fig. 2.1, draw a circle around the Y chromosome.

[1]

(b) Chromosomes carry genes. Define a *gene*.

.....

[2]

(c) Complete the genetic diagram below to explain why, in a human population, equal numbers of male and female babies should be expected.

parents

phenotypes

female

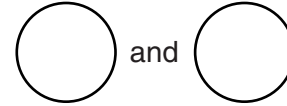
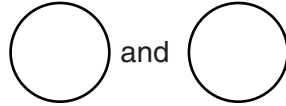
male

sex chromosomes

XX

XY

gametes



chromosomes and phenotypes of offspring

		male gametes	
female gametes			

ratio of male to female

[4]

- (d) In sea turtles, the sexes of the offspring are not determined by chromosomes. Instead, sex depends on the temperature at which the eggs are incubated. Fig. 2.2 shows this effect.

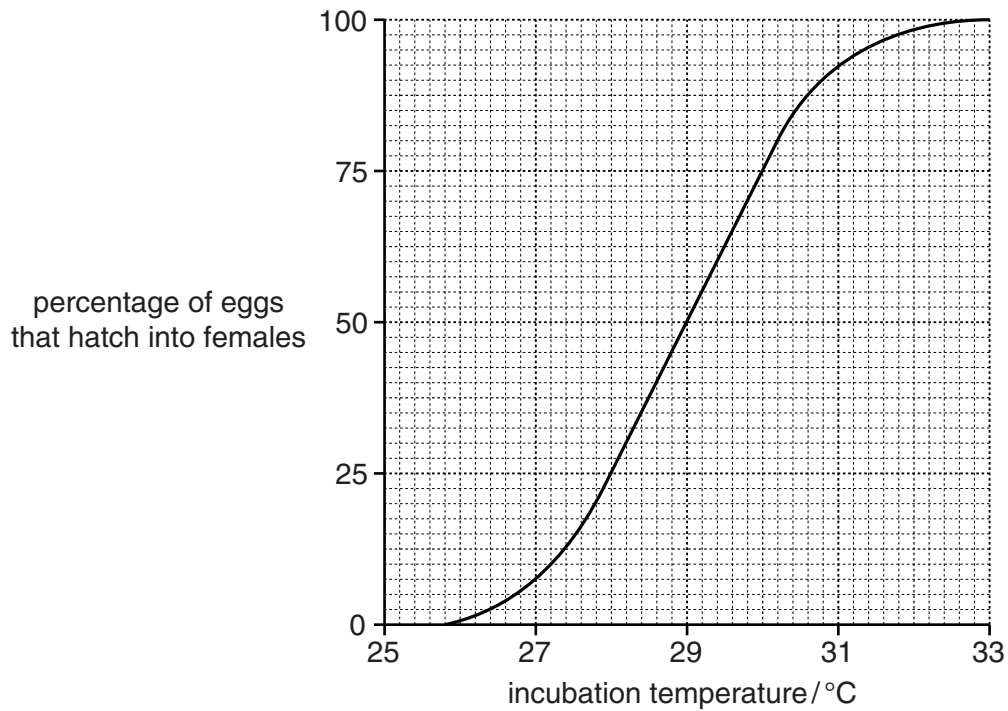


Fig. 2.2

- (i) Describe the effect of temperature on the percentage of eggs that hatch into females.

.....
[1]

- (ii) State the temperature at which equal numbers of male and female offspring are produced.

.....°C [1]

- (iii) Use the information in Fig. 2.2 to predict how global warming will affect the sea turtle population. Explain your answer.

.....

[2]

- 3 (a) A motorcycle is driven along a straight road. Fig. 3.1 shows a speed/time graph for the motion of the motorcycle from the time the rider sees a car approaching and gradually slows down.

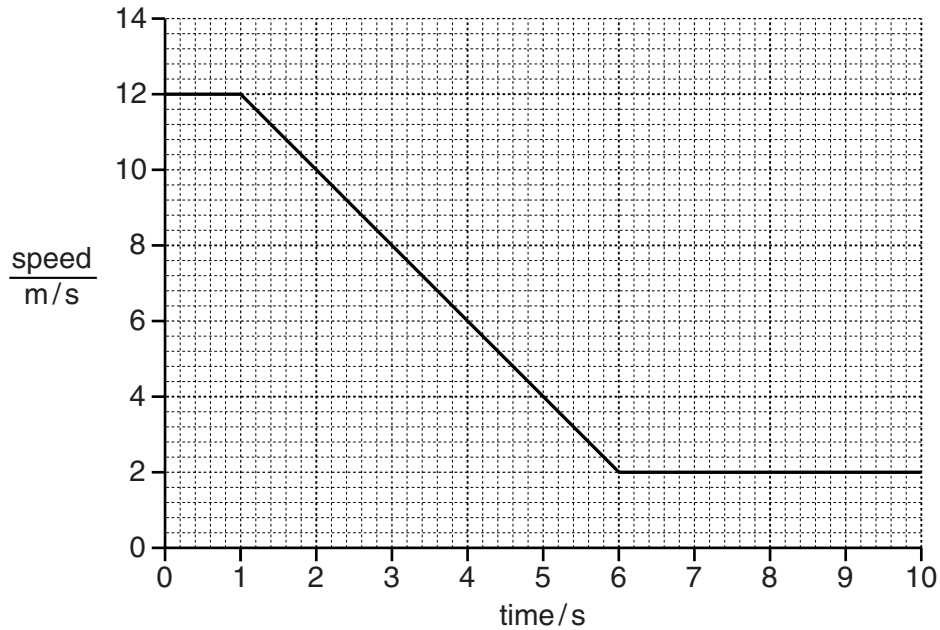


Fig. 3.1

- (i) State the speed at which the driver was travelling before he slowed down.

..... m/s [1]

- (ii) State whether the motorcycle stopped during the period of ten seconds shown in Fig. 3.1.

Explain your answer.

.....
 [1]

- (b) The motorcycle rider notices that the sound from a car's engine becomes louder as the car approaches and drops in pitch as the car passes.

Describe these changes in terms of the frequency and amplitude of sound waves released.

becomes louder

.....

has a lower pitch

..... [2]

(c) The motorcycle has one headlamp, connected to a 12V battery.

The headlamp takes a current of 4 A.

Calculate the resistance of the headlamp.

State the formula that you use, show your working and state the unit of your answer.

formula

working

resistance = unit [3]

(d) As the motorcycle drives along, the temperature of the air in the tyres increases.

By referring to the motion of molecules in air, explain why this results in an increased tyre pressure.

.....
.....
.....
.....[3]

- (e) The metal bodywork of the motorcycle can be painted using electrostatic paint spraying. In electrostatic paint spraying, the surface being painted is given a negative electric charge.

The paint particles emerge from the paint sprayer carrying a positive charge.

Fig. 3.2 shows part of a motorcycle frame being painted.

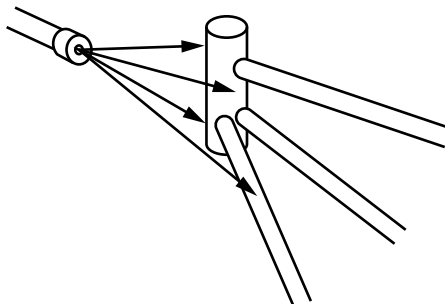


Fig. 3.2

- (i) Suggest why more paint sticks to the charged frame than to an uncharged frame.

.....
[1]

- (ii) The motorcycle is painted evenly. An even coat of paint is achieved because the paint particles repel each other.

Explain why the particles repel each other.

.....
[1]

Please turn over for Question 4.

4 (a) Define the term *transpiration*.

.....
.....
.....[2]

(b) Fig. 4.1 shows xylem vessels from the stem of a plant as seen in longitudinal section.

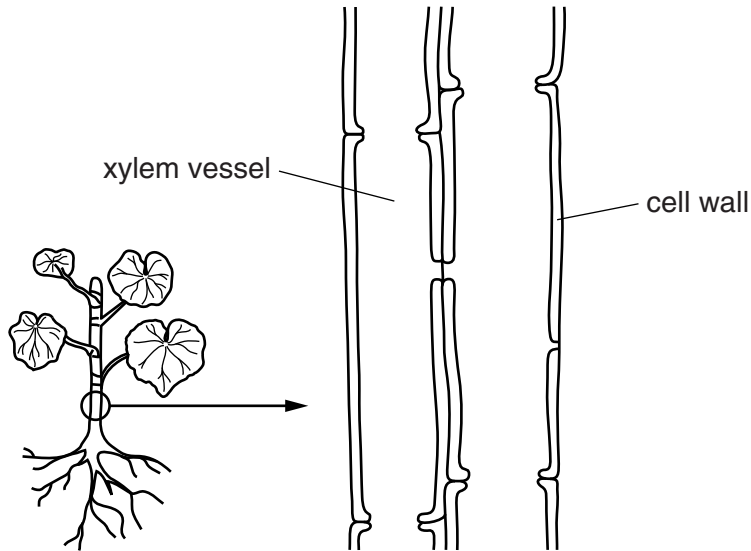


Fig. 4.1

(i) On Fig. 4.1 draw an arrow to show the direction in which water flows through the xylem vessel. [1]

(ii) Name **one** other substance, apart from water, that is transported through xylem vessels. [1]

.....

(c) Fig. 4.2 shows a stem and a root in transverse section.

On the stem, the positions of the xylem and the phloem tissues have been labelled.

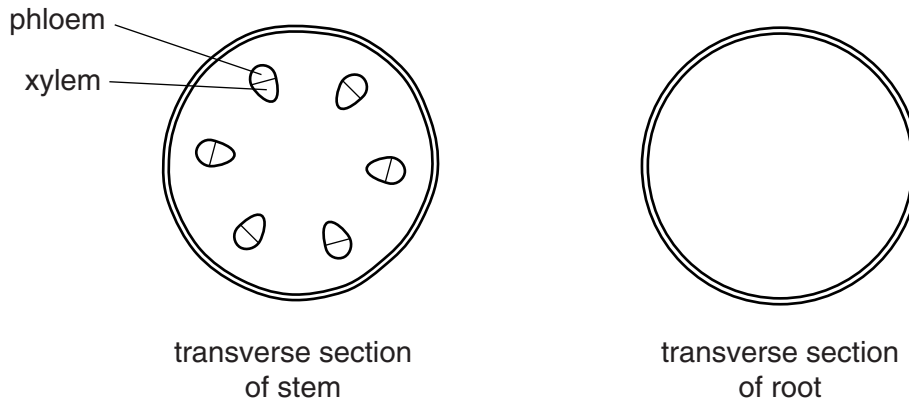


Fig. 4.2

(i) Complete the diagram of the root by drawing in the positions of the xylem and the phloem tissues and labelling them. [3]

(ii) State the function of the phloem.

.....[1]

(d) Plants absorb water from the soil. Name the plant cells that take up most of this water.

..... [1]

- 5 A student investigates the reactions between dilute hydrochloric acid and five substances.

Fig. 5.1 shows the five substances contained in test-tubes **A** to **E**.

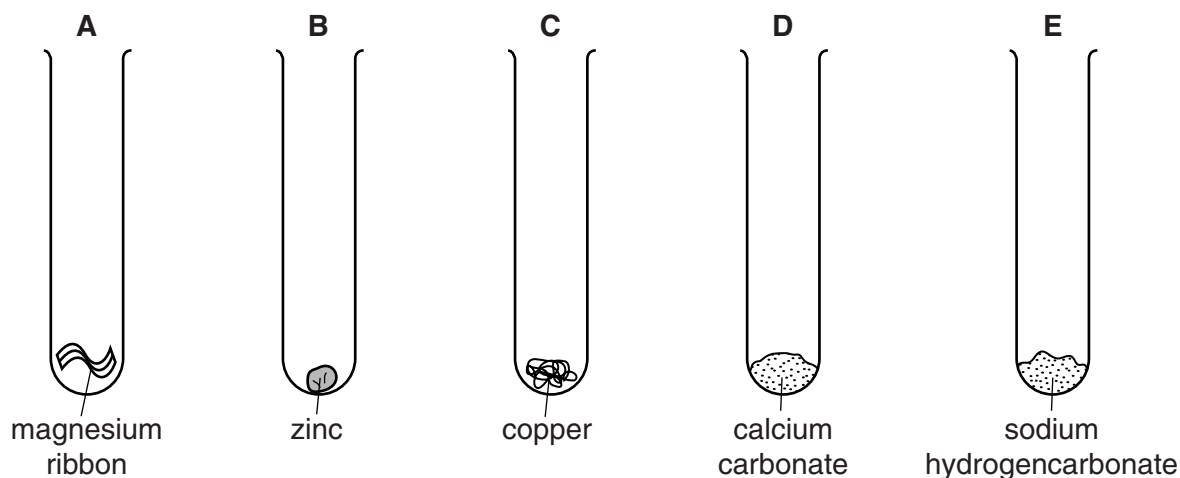


Fig. 5.1

She adds dilute hydrochloric acid to each tube.

Her observations and temperature measurements are shown in Table 5.1.

Table 5.1

test-tube	observations	temperature of the reactants before reaction/ $^{\circ}\text{C}$	temperature of the mixture in the test-tube after a short time/ $^{\circ}\text{C}$
A	gas given off quickly	18	45
B	gas given off slowly	18	19
C	no gas produced	18	
D	gas given off quickly	18	20
E	gas given off quickly	18	11

- (a) (i) Name the gas given off when dilute hydrochloric acid is added to test-tubes **A** and **B**.

.....[1]

- (ii) Describe a test and its result for the gas you have named in (a)(i).

test

result[1]

(iii) The pH of the dilute hydrochloric acid before reacting is 2.

Predict the pH of the solution in test-tube **D** after reaction.

Explain your answer.

prediction

explanation

.....

.....[2]

(b) When substances are mixed together, a change in temperature is evidence that a chemical reaction occurs.

(i) Suggest the temperature of the mixture in test-tube **C** after a short time.

Write your answer in Table 5.1. [1]

(ii) Explain your answer to (b)(i).

.....

.....[1]

(iii) State and explain in which test-tube, **A**, **B**, **C**, **D** or **E**, an endothermic reaction occurs.

test-tube

explanation

.....[1]

(c) Suggest **two** possible reasons why gas is given off more quickly in test-tube **A** than in **B**.

1

.....

2

.....[2]

- 6 (a) Infra-red waves can pass through optical fibres.

Fig. 6.1 shows a length of optical fibre.

An infra-red ray goes in at one end and emerges at the other end.

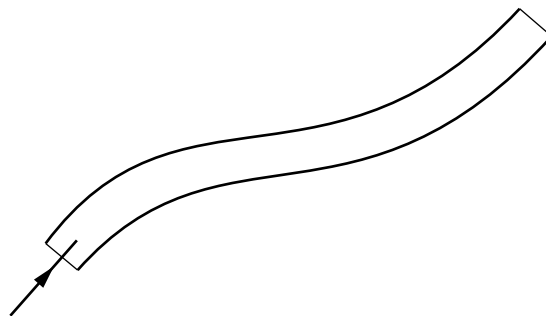


Fig. 6.1

On Fig. 6.1, use a ruler to draw its path along the optical fibre. [2]

- (b) (i) State what is transferred by all electromagnetic waves.

.....[1]

- (ii) γ -radiation is also part of the spectrum of electromagnetic waves.

State **one** difference between γ -radiation and infra-red radiation.

.....

.....[1]

- (c) Fig. 6.2 shows an experiment to investigate infra-red radiation.

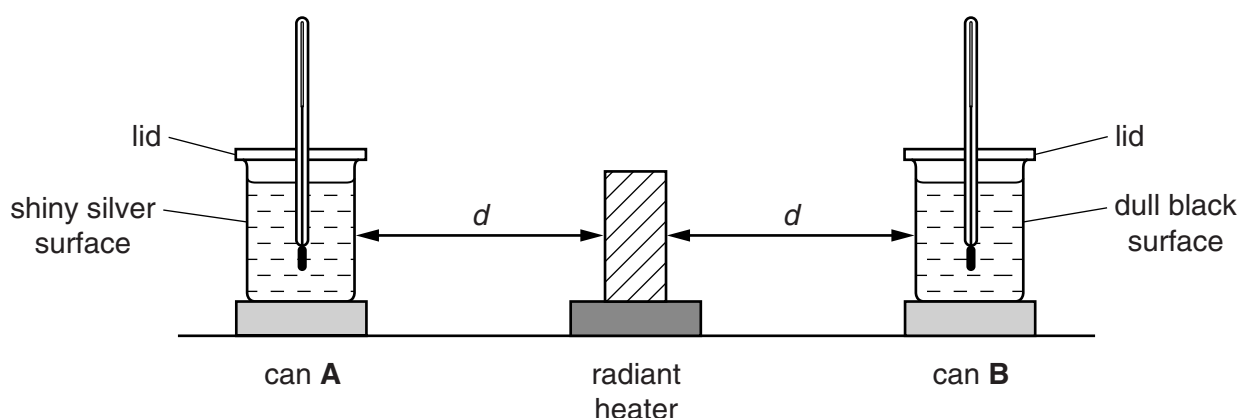


Fig. 6.2

Two similar cans **A** and **B** contain equal amounts of water which start off at the same temperature.

Can **A** has a shiny silver surface and can **B** has a dull black surface.

A thermometer is placed into each can. The cans stand on cork mats and are placed at the same distance d from a radiant heater emitting infra-red radiation.

The temperature of the water is measured every minute for twelve minutes.

Fig. 6.3 shows how the temperature of the water changes for the two cans.

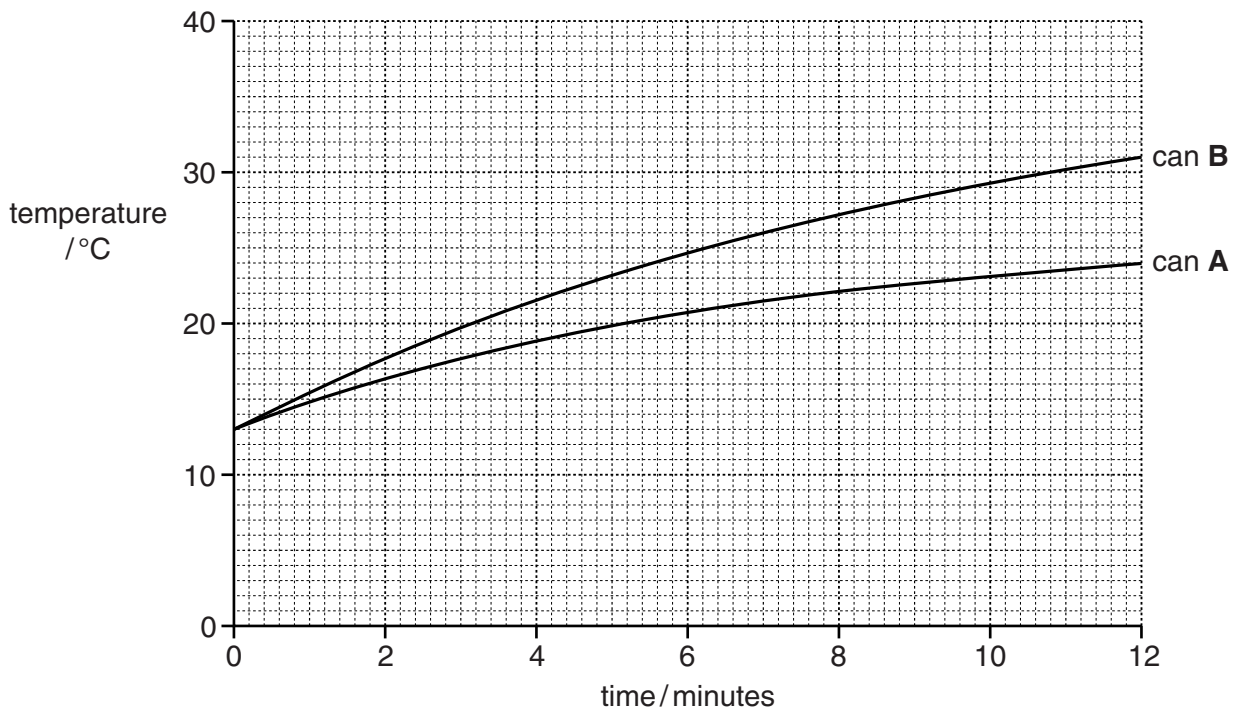


Fig. 6.3

(i) State the starting temperature of the water in both cans.

.....°C [1]

(ii) Explain why the two cans are placed on cork mats.

.....[1]

(iii) Describe how the temperature changes are different for the two cans.

.....

[1]

(iv) Suggest reasons for your answer to (c)(iii).

.....

[2]

7 Fig. 7.1 shows the concentration of carbon dioxide in a muscle cell of an athlete before, during and after a period of exercise.

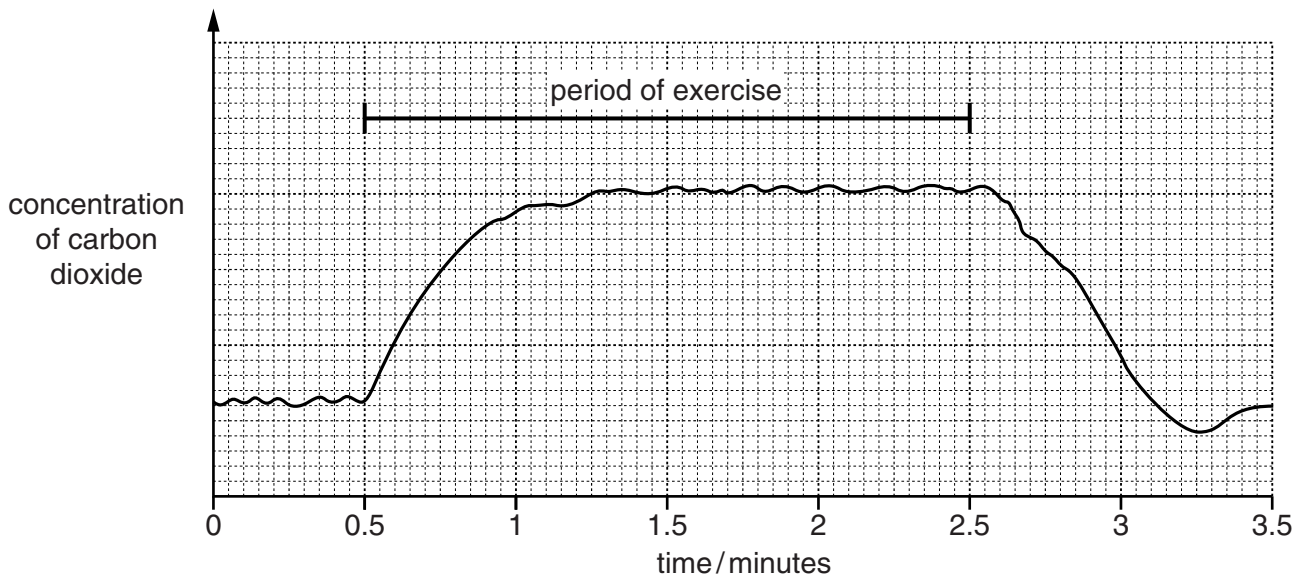
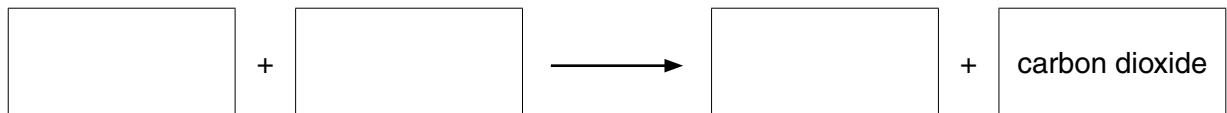


Fig. 7.1

(a) (i) Name the process that produces carbon dioxide in cells.

.....[1]

(ii) Complete the word equation for this process.



[2]

(b) State the time in Fig. 7.1 at which the carbon dioxide concentration is lowest.

.....min [1]

(c) During exercise, the blood flow to the muscles increases. Explain why this increased blood flow is important during exercise.

.....

.....

.....

.....[2]

(d) Training increases the number of red blood cells in an athlete's body. Suggest how this affects the amount of lactic acid produced when an athlete is sprinting. Explain your answer.

.....
.....
.....[2]

8 (a) A spillage of a radioactive substance occurs in a store for radioactive materials.

The activity due to normal background radiation is 100 counts per minute.

After the spillage, the activity in the store rises to 900 counts per minute.

(i) State the meaning of the term *background radiation*.

.....
[1]

(ii) Write down the increase in activity produced by the spilled material.

..... counts per minute [1]

(iii) The pie chart in Fig. 8.1 shows the proportion of the average background radiation that comes from all sources in the United Kingdom.

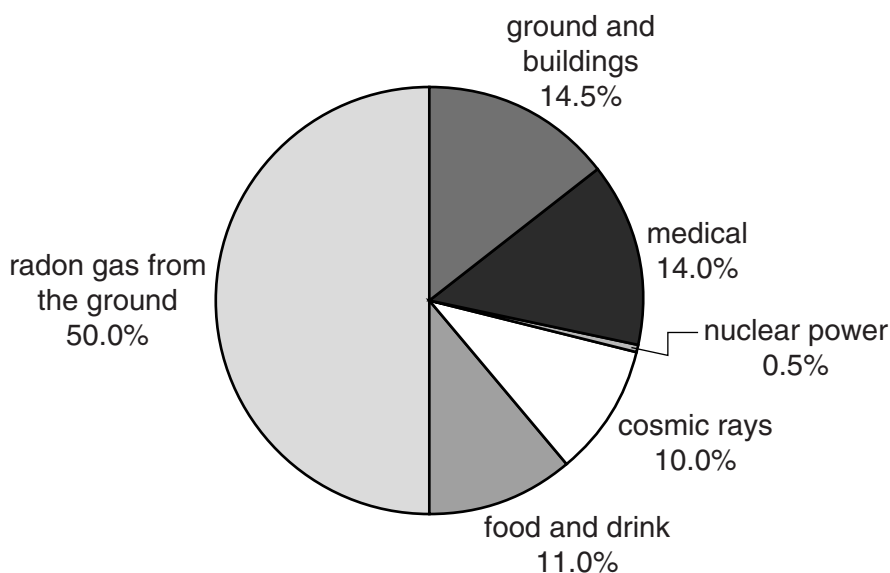


Fig. 8.1

Use the pie chart to explain why doubling the amount of power generated from nuclear sources would only produce a relatively small increase in background radiation.

.....
[1]

(b) Apart from cost, give **one** advantage and **one** disadvantage of an oil-fired power station compared to a nuclear power station.

advantage

.....

disadvantage

.....[2]

(c) Electricity supplied to a house is used to produce light.

The lighting circuits in a house are constructed so that the lamps are connected in a parallel circuit and not a series circuit.

(i) Draw simple circuit diagrams to show the difference between a series circuit and a parallel circuit.

Each circuit should include a power source (a cell).

[2]

(ii) State **two** advantages of connecting lamps in parallel in a lighting circuit.

1

.....

2

.....[2]

9 Fig. 9.1 shows molecules of ethane, ethene and ethanol.

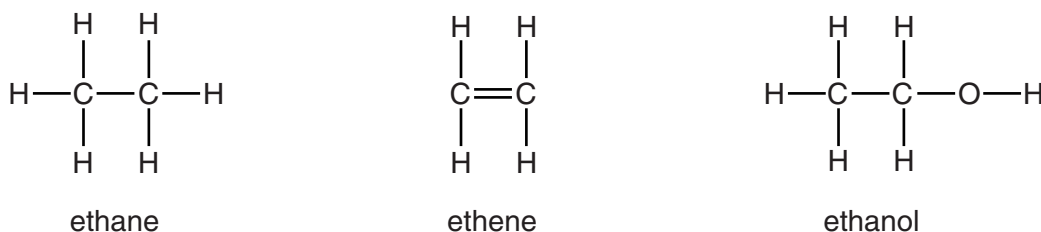


Fig. 9.1

(a) (i) State and explain which of these compounds are hydrocarbons.

compounds

explanation

.....[2]

(ii) State and explain which **one** of the three compounds named above is an unsaturated compound.

compounds

explanation

.....[1]

(b) (i) State **one** use of ethanol.

.....[1]

(ii) In industry, ethanol is made in a chemical reaction involving ethene.

Name the substance that reacts with ethene to produce ethanol.

.....[1]

(iii) The reaction in (b)(ii) needs a catalyst.

State the meaning of the term *catalyst*.

.....

.....

.....[2]

(c) Ethene is a colourless gas that reacts to form poly(ethene) which is a white solid.

(i) Describe what happens when ethene molecules react to form poly(ethene) molecules.

Draw a diagram to help you answer this question.

Use the symbol $\text{---} \bigcirc \text{E} \text{---}$ to show an ethene molecule.

.....
.....[2]

(ii) State the full name of the type of chemical reaction that occurs in (c)(i).

.....[2]

10 (a) Fig. 10.1 represents some waves on water.

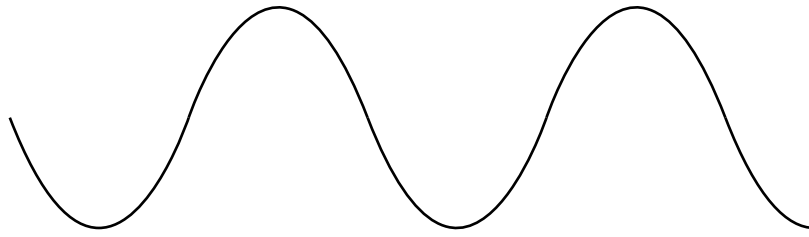


Fig. 10.1

(i) On Fig. 10.1 label with an arrow (\longleftrightarrow) one wavelength.

[1]

(ii) The waves have a frequency of 0.2 Hz.

Explain what is meant by a *frequency of 0.2 Hz*.

.....
.....[1]

(iii) Water waves are transverse waves and sound waves are longitudinal waves.

Describe how a transverse wave is different from a longitudinal wave.

You may draw a labelled diagram if it helps your answer.

.....
.....
.....[2]

(b) A large meteorite falls into the sea.

(i) The meteorite produces a wave which travels at a speed of 5.6 m/s.

Calculate the time taken by the wave to travel 33 600 m.

State the formula that you use and show your working.

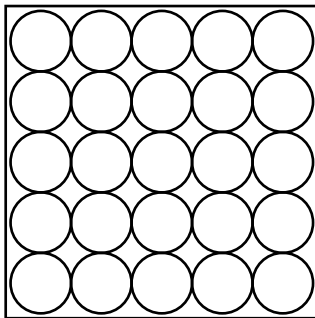
formula

working


time = s [2]

(ii) The meteorite is a solid and the sea water is a liquid.

Complete Fig. 10.2 to show the arrangement of particles in a liquid. The diagram for a solid has been done for you.



solid



liquid

[2]

Fig. 10.2

(iii) The mass of the meteorite is 32 000 kg and its volume is 4 m³.

Calculate the density of the meteorite in kg/m³.

State the formula that you use and show your working.

formula

working

density = kg/m³ [2]

11 Fig. 11.1 shows two liver cells, as seen under a light microscope.

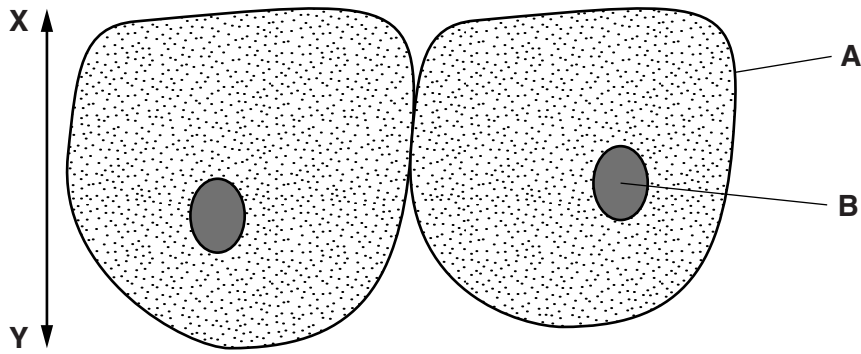


Fig. 11.1

(a) Name the structures labelled **A** and **B**.

A

B

[2]

(b) State **two** functions of liver cells.

1

2 [2]

(c) Give **three** ways in which a plant palisade cell differs from a liver cell.

1

2

3 [3]

(d) In Fig. 11.1, the actual height of the cells along the line **X–Y** is 0.03mm. Calculate the magnification of the drawing.

magnification = [2]

(e) Name **two** of the blood vessels that are associated with the liver, and outline their function.

vessel 1

function

vessel 2

function

[2]

12 (a) The Periodic Table lists the elements in order of their proton numbers.

Fig. 12.1 shows the positions of the first eighteen elements.

The letters are **not** the chemical symbols of the elements.

I	II	III	IV	V	VI	VII	0
						L	M
N						O	P

Fig. 12.1

(i) State the meaning of the terms *proton number* and *nucleon number (mass number)*.

proton number

.....

nucleon number

.....[2]

(ii) Predict and explain whether element **N** has a higher or lower melting point than element **P**.

.....

.....[1]

(iii) State and explain which other element in Fig. 12.1 has chemical properties that are very similar to those of element **O**.

element

explanation

.....[2]

- (b) Carbon dioxide is a gas at room temperature and contains molecules that have the chemical formula CO_2 .

State the type of chemical bonding that joins the atoms together in a molecule of carbon dioxide.

Give a reason for your choice.

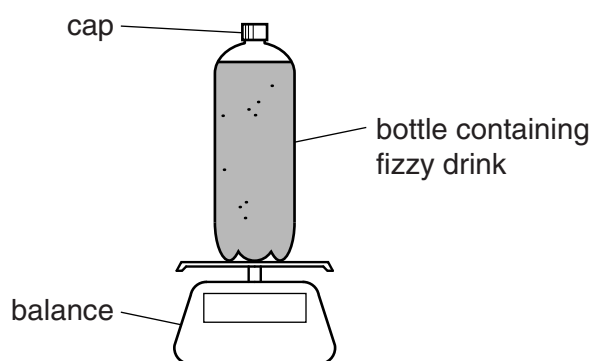
type of bonding

reason

.....[2]

- (c) A student investigates how much carbon dioxide gas is contained in a carbonated (fizzy) drink.

He measures the mass of a full bottle of fizzy drink.



He shakes the bottle. He releases the carbon dioxide by carefully unscrewing the cap.

He measures the mass of the bottle and cap, and liquid without the carbon dioxide.

His results are shown in Table 12.1.

Table 12.1

mass of bottle filled with fizzy drink /g	mass of bottle and cap, and liquid without carbon dioxide /g	volume of the liquid /cm ³
526.2	524.0	500.0

- (i) State the mass of carbon dioxide that was released from the fizzy drink.

Show your working.

mass =g [1]

- (ii) Calculate the mass of carbon dioxide that is dissolved in 1.0 dm³ of the fizzy drink.

Show your working.

mass =g [2]

BLANK PAGE

DATA SHEET
The Periodic Table of the Elements

		Group																																					
I	II	III	IV	V	VI	VII	VIII	IX	X	XI	XII	XIII	XIV	XV	XVI	XVII	XVIII	XIX	XX																				
7 Li Lithium 3	9 Be Beryllium 4	1 H Hydrogen 1										11 B Boron 5	12 C Carbon 6	14 N Nitrogen 7	16 O Oxygen 8	19 F Fluorine 9	20 Ne Neon 10																						
23 Na Sodium 11	24 Mg Magnesium 12	27 Al Aluminium 13	28 Si Silicon 14	31 P Phosphorus 15	32 S Sulfur 16	35.5 Cl Chlorine 17	40 Ar Argon 18	39 K Potassium 19	40 Ca Calcium 20	45 Sc Scandium 21	48 Ti Titanium 22	51 V Vanadium 23	52 Cr Chromium 24	55 Mn Manganese 25	56 Fe Iron 26	59 Co Cobalt 27	59 Ni Nickel 28	64 Cu Copper 29	65 Zn Zinc 30	73 Ge Germanium 32	75 As Arsenic 33	79 Se Selenium 34	80 Br Bromine 35	84 Kr Krypton 36															
85 Rb Rubidium 37	88 Sr Strontium 38	89 Y Yttrium 39	91 Zr Zirconium 40	93 Nb Niobium 41	96 Mo Molybdenum 42	101 Ru Ruthenium 44	106 Pd Palladium 46	108 Ag Silver 47	112 Cd Cadmium 48	115 In Indium 49	119 Sn Tin 50	122 Sb Antimony 51	128 Te Tellurium 52	127 I Iodine 53	131 Xe Xenon 54	133 Cs Caesium 55	137 Ba Barium 56	139 La Lanthanum 57	178 Hf Hafnium 72	181 Ta Tantalum 73	184 W Tungsten 74	186 Re Rhenium 75	190 Os Osmium 76	192 Ir Iridium 77	195 Pt Platinum 78	197 Au Gold 79	201 Hg Mercury 80	204 Tl Thallium 81	207 Pb Lead 82	209 Bi Bismuth 83	209 Po Polonium 84	210 At Astatine 85	222 Rn Radon 86						
223 Fr Francium 87	226 Ra Radium 88	227 Ac Actinium 89	* 58–71 Lanthanoid series † 90–103 Actinoid series										140 Ce Cerium 58	141 Pr Praseodymium 59	144 Nd Neodymium 60	147 Pm Promethium 61	150 Sm Samarium 62	152 Eu Europium 63	157 Gd Gadolinium 64	159 Tb Terbium 65	162 Dy Dysprosium 66	165 Ho Holmium 67	167 Er Erbium 68	169 Tm Thulium 69	173 Yb Ytterbium 70	175 Lu Lutetium 71	228 Th Thorium 90	231 Pa Protactinium 91	232 U Uranium 92	237 Np Neptunium 93	243 Am Americium 95	247 Cm Curium 96	247 Bk Berkelium 97	251 Cf Californium 98	252 Es Einsteinium 99	257 Fm Fermium 100	258 Md Mendelevium 101	259 No Nobelium 102	260 Lr Lawrencium 103

Key

a	X	b
a = relative atomic mass		
b = atomic (proton) number		

The volume of one mole of any gas is 24 dm³ at room temperature and pressure (r.t.p.).

Permission to reproduce items where third-party owned material protected by copyright is included has been sought and cleared where possible. Every reasonable effort has been made by the publisher (UCLES) to trace copyright holders, but if any items requiring clearance have unwittingly been included, the publisher will be pleased to make amends at the earliest possible opportunity.

Cambridge International Examinations is part of the Cambridge Assessment Group. Cambridge Assessment is the brand name of University of Cambridge Local Examinations Syndicate (UCLES), which is itself a department of the University of Cambridge.