



Cambridge International Examinations
Cambridge International General Certificate of Secondary Education

CANDIDATE
NAME

CENTRE
NUMBER

--	--	--	--	--	--

CANDIDATE
NUMBER

--	--	--	--	--

CO-ORDINATED SCIENCES

0654/32

Paper 3 Theory (Core)

May/June 2018

2 hours

Candidates answer on the Question Paper.

No Additional Materials are required.

READ THESE INSTRUCTIONS FIRST

Write your Centre number, candidate number and name on all the work you hand in.

Write in dark blue or black pen.

You may use an HB pencil for any diagrams or graphs.

Do not use staples, paper clips, glue or correction fluid.

DO NOT WRITE IN ANY BARCODES.

Answer **all** questions.

Electronic calculators may be used.

You may lose marks if you do not show your working or if you do not use appropriate units.

A copy of the Periodic Table is printed on page 28.

At the end of the examination, fasten all your work securely together.

The number of marks is given in brackets [] at the end of each question or part question.

This document consists of **27** printed pages and **1** blank page.

BLANK PAGE

1 Fig. 1.1 shows a diagram of the gas exchange system.

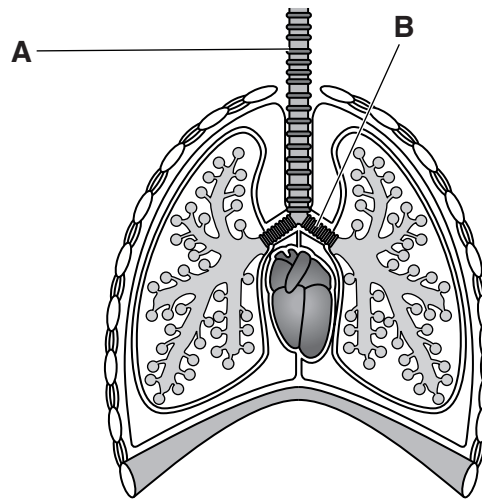


Fig. 1.1

(a) (i) Name the parts labelled **A** and **B** in Fig. 1.1.

A

B

[2]

(ii) Add a label line and the letter **C** to Fig. 1.1 to identify the organ responsible for pumping blood around the body. [1]

(b) Describe **two** ways in which the composition of inspired (breathed in) air differs from expired (breathed out) air.

1

2

[2]

(c) Describe how the pattern of breathing changes during exercise.

.....

 [2]

(d) Movement and respiration are two of the characteristics of living organisms.

State **two** other characteristics of living organisms.

1

2

[2]

- 2 A student investigates what happens when she adds magnesium to dilute hydrochloric acid.

Fig. 2.1 shows the apparatus she uses.

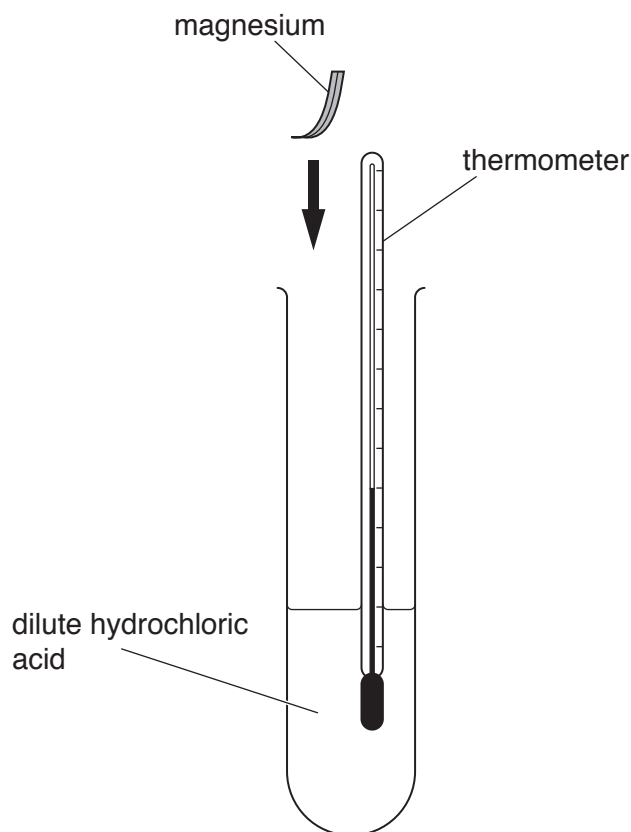


Fig. 2.1

- (a) (i) The reaction is exothermic.

Describe **two** observations that show a chemical reaction occurs in her investigation.

1

2

[2]

- (ii) Name the magnesium compound that forms.

.....[1]

(b) Fig. 2.2 shows magnesium reacting with carbon dioxide.

The reaction produces magnesium oxide and carbon.

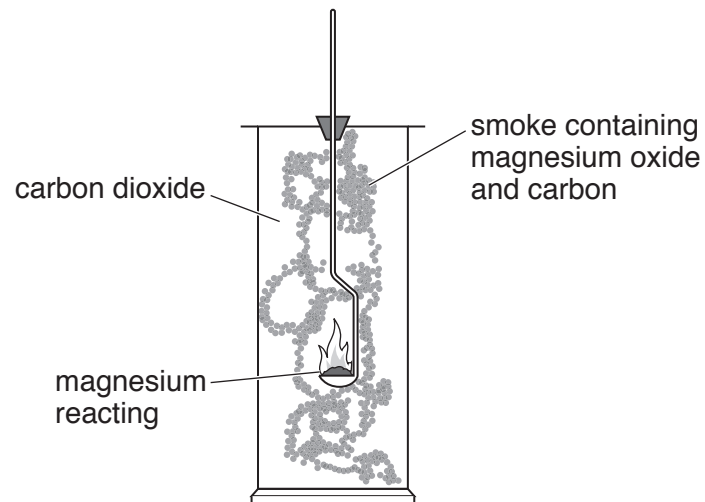
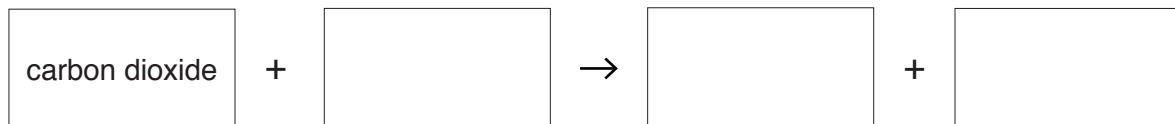


Fig. 2.2

(i) State the **word** equation for this reaction.



[1]

(ii) Identify which substance is **reduced** during this reaction.

Explain your answer.

substance

explanation

.....

[2]

- (c) Table 2.1 shows information about the composition of an alloy.

The table is incomplete.

Table 2.1

element	% by mass
aluminium	
calcium	2.0
magnesium	91.5
manganese	0.4
zinc	0.1

- (i) Calculate the mass of aluminium in 100g of the alloy.

Show your working.

mass = g [1]

- (ii) Parts of aircraft are made of alloys.

State **one** reason, other than density, for using an alloy rather than a pure metal to make parts for aircraft.

.....
 [1]

- (d) Magnesium and manganese are metals shown in different periods in the Periodic Table.

- (i) State what is meant by a *period* in the Periodic Table.

.....
 [1]

- (ii) Manganese is a transition metal.

State **two** properties of manganese that are **not** properties of magnesium.

1
 2 [2]

- 3 (a) In a nuclear power station, the fission of uranium-235 nuclei takes place.

Describe what happens to the nucleus of a uranium-235 atom in this process.

.....[1]

- (b) The nuclear power station produces waste radioactive isotopes.

Suggest **one** way of safely **storing** waste radioactive isotopes.

.....
[1]

- (c) The electricity generated in the power station is transmitted using overhead power cables.

(i) State the effect on the resistance of the cable if the diameter of the cable is increased.

.....[1]

(ii) State **one** other way by which the resistance of the cable could be changed.

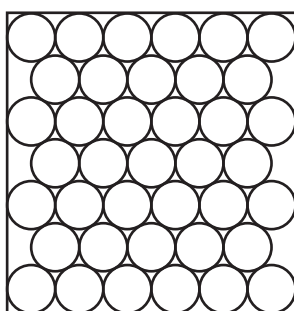
.....[1]

- (d) In the power station, thermal energy is used to heat liquid water and turn it into steam, a gas.


(i) Fig. 3.1 shows the arrangement of particles in a solid.

Each circle represents one particle.

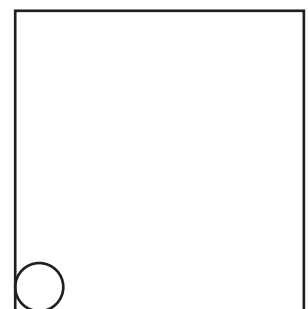
Complete Fig. 3.1 to show the arrangement of particles in a liquid and in a gas.



solid



liquid



gas

Fig. 3.1

[2]

(ii) The boiling point of water is 100°C.

State the meaning of the term *boiling point*.

.....
[1]

4 Fig. 4.1 shows a diagram of a cross-section of a leaf as it appears under a microscope.

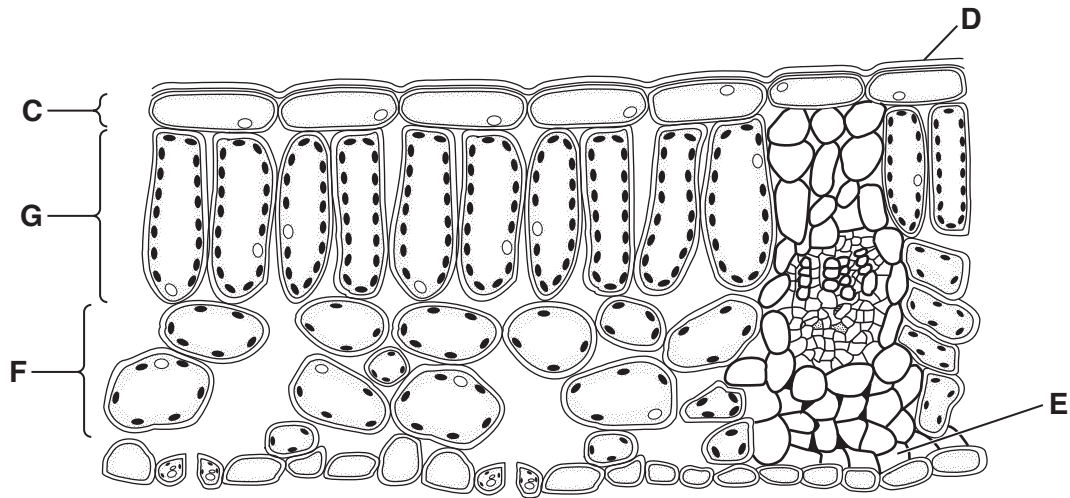
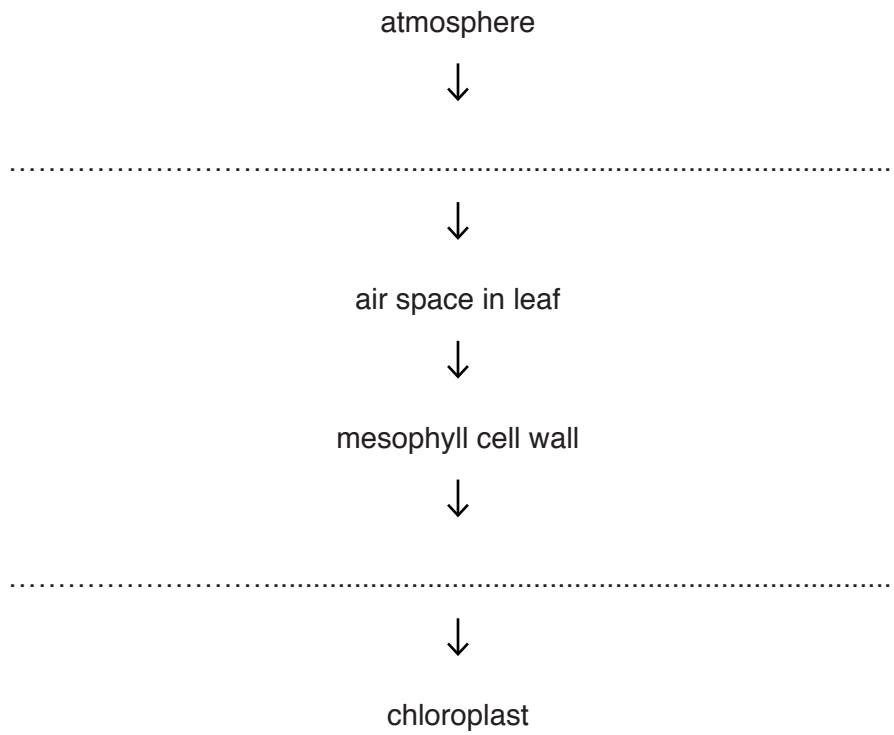


Fig. 4.1

- (a) (i) Using Fig. 4.1, state the letter which represents the cuticle.
 [1]
- (ii) Using Fig. 4.1, state the letter which represents the palisade mesophyll layer.
 [1]
- (iii) Add a label line and the letter **V** to Fig. 4.1 to identify a vascular bundle. [1]
- (b) Leaves are adapted for photosynthesis.
- (i) State the **two** products of photosynthesis.
- 1 [1]
- 2 [1]
- (ii) State the form of energy required for photosynthesis.
 [1]
- (iii) Describe **one** way in which the palisade mesophyll cells are adapted for photosynthesis.
 [1]
- [1]

(c) Carbon dioxide is one of the raw materials required for photosynthesis.

Complete the sequence to show the pathway of carbon dioxide from the atmosphere to a chloroplast.



[2]

- 5 (a) Table 5.1 shows the numbers of protons and of neutrons in five atoms **A** to **E**.

The letters are **not** the chemical symbols of the elements.

Table 5.1

atom	number of protons	number of neutrons
A	9	10
B	10	12
C	10	10
D	18	22
E	20	20

- (i) State the atomic number of atom **B**.

.....

[1]

- (ii) State the mass number of atom **D**.

.....

[1]

- (iii) State which **two** atoms are of the same element.

Explain your answer.

atoms and

explanation

.....

[1]

- (iv) State **and** explain which atom in Table 5.1 contains the greatest number of electrons.

atom

explanation

.....

[1]

- (b) Fig. 5.1 shows industrial apparatus used to make ammonia gas, NH_3 , from nitrogen, N_2 , and hydrogen, H_2 .

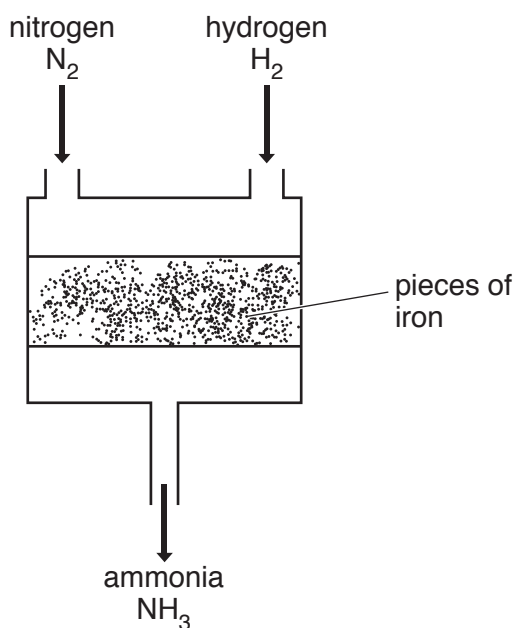


Fig. 5.1

- (i) In this apparatus the iron is a catalyst for the reaction.

Define the term *catalyst*.

.....

 [2]

- (ii) Explain why ammonia is **not** shown in the Periodic Table.

.....
 [1]

- (iii) Deduce the type of chemical bond in a molecule of ammonia, NH_3 .

Explain your answer.

type of bond

explanation

..... [2]

12

(c) Ammonia is used to make urea, $(\text{NH}_2)_2\text{CO}$.

Calculate the total number of atoms in one molecule of urea.

total number of atoms[1]

- 6 (a) Fig. 6.1 shows the forces **P**, **Q**, **R** and **S** acting on a tractor when a farmer is driving it at constant speed.

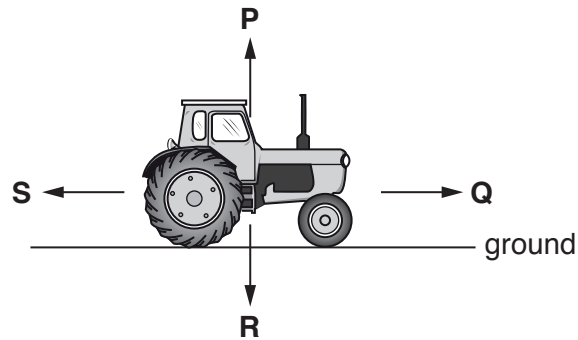


Fig. 6.1

- (i) State which force, **P**, **Q**, **R** or **S**, is the weight of the tractor.

..... [1]

- (ii) State why forces **Q** and **S** must be equal and opposite.

.....
 [1]

- (iii) The tractor travels 1.1 km in 12 minutes.

Calculate the speed of the tractor in m/s.

State the formula you use and show your working.

formula

working

speed = m/s [3]

(b) Fig. 6.2 shows a tractor and a car next to each other on muddy ground.

The tractor is much heavier than the car but the car has sunk into the muddy ground.




Fig. 6.2

Explain why the tractor has not sunk into the muddy ground.

Use the word **pressure** in your answer.

.....

.....

..... [2]

(c) Fig. 6.3 shows a ray of light from the Sun incident on the surface of the farmer's pond.

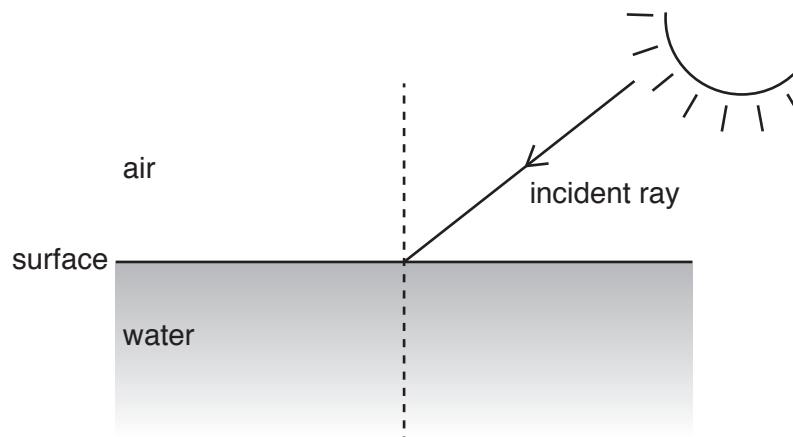


Fig. 6.3

On Fig. 6.3, draw the refracted ray entering the water at the surface.

Label the angle of incidence i and the angle of refraction r .

[3]

(d) On a hot day, some water from the farmer's pond evaporates.

Describe how molecules of water are able to evaporate.

.....

.....

.....

.....

.....

..... [3]

- 7 Deforestation is the clearing of an area of trees.

Table 7.1 shows the area of land which has been cleared each year in Brazil over a ten-year period.

Table 7.1

year	area of land cleared/km ²
2000	18 226
2001	18 165
2002	21 523
2003	25 396
2004	27 772
2005	19 014
2006	14 196
2007	11 633
2008	12 911
2009	7 008

- (a) (i) State the year in which the highest rate of deforestation occurred.

.....

[1]

- (ii) Calculate the percentage decrease in deforestation between **2008** and **2009**.

Show your working.

decrease = % [2]

- (b) Deforestation can cause species to become extinct.

Suggest how deforestation leads to the extinction of species.

.....

.....

..... [2]

- (c) Deforestation causes a change in the environment. When changes occur, only the best adapted organisms are able to survive and pass on their genes.

State the name of the process which is defined as the greater chance of passing on of genes by the best-adapted organisms.

..... [1]

8 (a) Chlorine is a very reactive element in Group VII.

(i) Chlorine is used to treat water supplies.

State why untreated water can be dangerous to drink, and explain why treating with chlorine can make water safer to drink.

.....

 [2]

(ii) Describe what is observed when chlorine is mixed with colourless sodium iodide solution.

Explain your answer using ideas about reactivity.

observation

explanation

..... [2]

(iii) Predict **and** explain whether chlorine reacts with argon gas.

prediction

explanation

..... [1]

(b) Chlorine combines with hot copper metal to form the ionic compound copper(II) chloride.

(i) State whether a chloride ion has a positive or a negative electrical charge.

Explain your answer.

charge

explanation

..... [1]

(ii) Describe a chemical test to show that a copper chloride solution contains copper(II) ions.

test

result

..... [2]

- 9 (a) Table 9.1 shows the power generated by a wind turbine at different wind speeds.

Table 9.1

power generated /kW	wind speed /km per hour
0.00	0
0.00	2
0.14	4
0.91	10
1.11	12
1.16	14
1.16	16
1.16	18

- (i) Name the unit with the symbol kW.

.....[1]

- (ii) Suggest the power generated by a windspeed of 25 km/h.

..... kW [1]

- (iii) Use Table 9.1 to estimate the lowest wind speed needed to generate 1.00 kW.

wind speed = km/h [1]

- (b) The wind turbines are noisy when they are turning. When they turn more slowly, the sound waves emitted have a lower frequency.

State how the pitch of the sound of the wind turbine changes when the frequency of the sound waves emitted is decreased.

.....[1]

(c) Thermal energy from the Sun heats the Earth's atmosphere.

This causes convection currents of air that we feel as wind.

The kinetic energy in wind is therefore a renewable energy resource.

(i) State **one** other renewable energy resource.

.....[1]

(ii) State the direction of the movement of warm air in a convection current.

.....[1]

(iii) Name the process responsible for the thermal energy transfer from the Sun to the Earth.

.....[1]

(iv) Name the part of the electromagnetic spectrum responsible for most thermal energy transfer from the Sun to the Earth.

.....[1]

10 Fig. 10.1 shows a diagram of the female reproductive system.

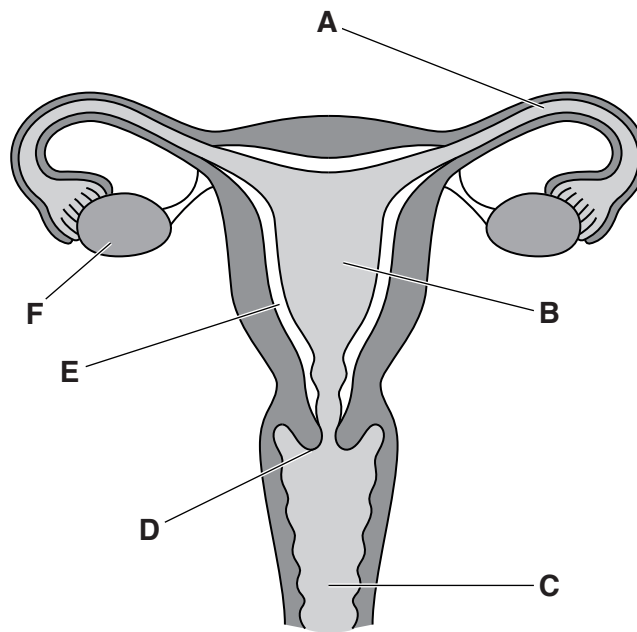


Fig. 10.1

(a) Table 10.1 shows the names, letters and functions of some of the parts of the female reproductive system shown in Fig. 10.1.

Use the information in Fig. 10.1 to complete Table 10.1.

Table 10.1

name of part	letter on Fig. 10.1	function
		where fertilisation occurs
	F	
		where implantation occurs
vagina		receives penis during intercourse

[4]

(b) (i) Complete the sentence to describe the process of fertilisation.

Fertilisation is the joining of the of the male gamete and the female gamete. [1]

(ii) After fertilisation, a zygote is formed.

Describe what happens to the zygote between fertilisation and implantation.

.....
.....
.....
..... [2]

(c) Humans reproduce by sexual reproduction.

Describe **two** ways in which sexual reproduction differs from asexual reproduction.

1
.....
2
..... [2]

11 Gasoline is separated from raw material **J**.

Gasoline is a mixture of hydrocarbons.

(a) (i) Name **J**.

.....[1]

(ii) State the process used to separate gasoline from **J**.

.....[1]

(iii) Gasoline contains the hydrocarbon hexane.

Fig. 11.1 shows the structure of a hexane molecule.

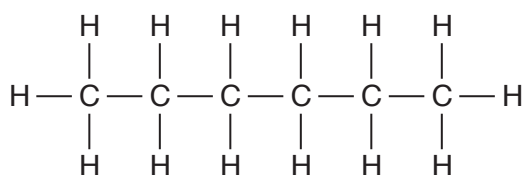


Fig. 11.1

Complete the sentences about hexane using words from the list.

Each word may be used once, more than once or not at all.

alcohol	alkane	alkene	double
reactive	saturated	single	unsaturated

Hexane is an

Hexane molecules are because they contain only

..... chemical bonds.

[3]

- (b) Gasoline is used as fuel in cars.

Car engines produce exhaust gas, which is a mixture of gases.

Fig. 11.2 shows the exhaust gas released from a car engine.




Fig. 11.2

Table 11.1 shows the composition of clean, dry air and of exhaust gas.

Table 11.1

gases	% by volume	
	clean, dry air	exhaust gas
nitrogen		67
carbon dioxide and other gases	1	13
water vapour	0	11
oxygen		9

- (i) Complete Table 11.1 by stating the percentages of nitrogen and oxygen in clean, dry air. [2]
- (ii) Suggest why the exhaust gas contains more carbon dioxide and water vapour than the clean, dry air used by the car engine.

.....

.....

..... [2]

- (iii) State **two** harmful common air pollutants, **not** named in Table 11.1, that may be present in car exhaust gas.

1

2

[2]

12 (a) Fig. 12.1 shows a washing machine connected by a cable to a 230 V mains supply.

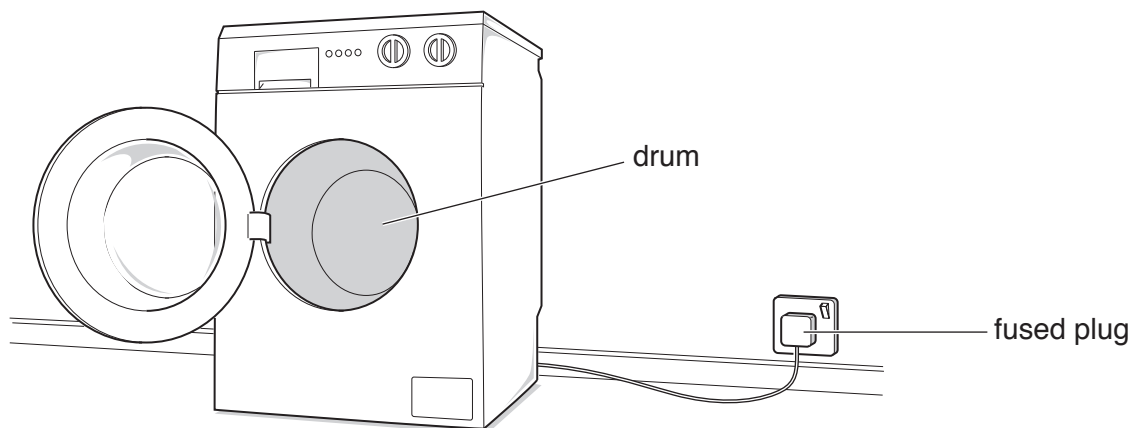


Fig. 12.1

When switched on, an electric motor rotates the drum and the clothes.

Complete the sentences below to describe some of the energy transformations occurring in the washing machine.

The useful energy transformation occurring in the electric motor is from

..... energy to energy.

Some of the energy supplied to the motor is wasted as energy and energy.

[2]

(b) The fuse in the plug for the washing machine has to be replaced.

The maximum current through the washing machine when in use is 9A.

The list shows available fuses that have different current ratings.

1 A 3 A 5 A 13 A 30 A

(i) State **and** explain which of these fuses should be used.

fuse rating A

explanation

.....

[2]

(ii) State the purpose of the fuse in the plug for the washing machine.

.....

.....[1]

- (c) The washing machine has an electric heater to heat the water.

A current of 4.5A passes through the heater when the voltage across it is 230V.

Calculate the resistance of the heater.

State the formula you use, show your working and state the unit of your answer.

formula

working

resistance = unit [3]

- (d) The casing of the washing machine is made from steel.

- (i) State **one** difference between the magnetic properties of steel and iron.

.....
 [1]

- (ii) The steel casing is made from a steel block. Each block is a cube with sides of 13 cm.

Calculate the volume of the steel block.

volume = cm³ [1]

- (iii) Steel has a density of 7.80g/cm³.

Use your answer to (d)(ii) to calculate the mass of the steel block.

State the formula you use and show your working.

formula

working

mass = g [2]

- 13 Fig. 13.1 shows a graph of the changes to blood glucose concentration immediately after eating a meal.

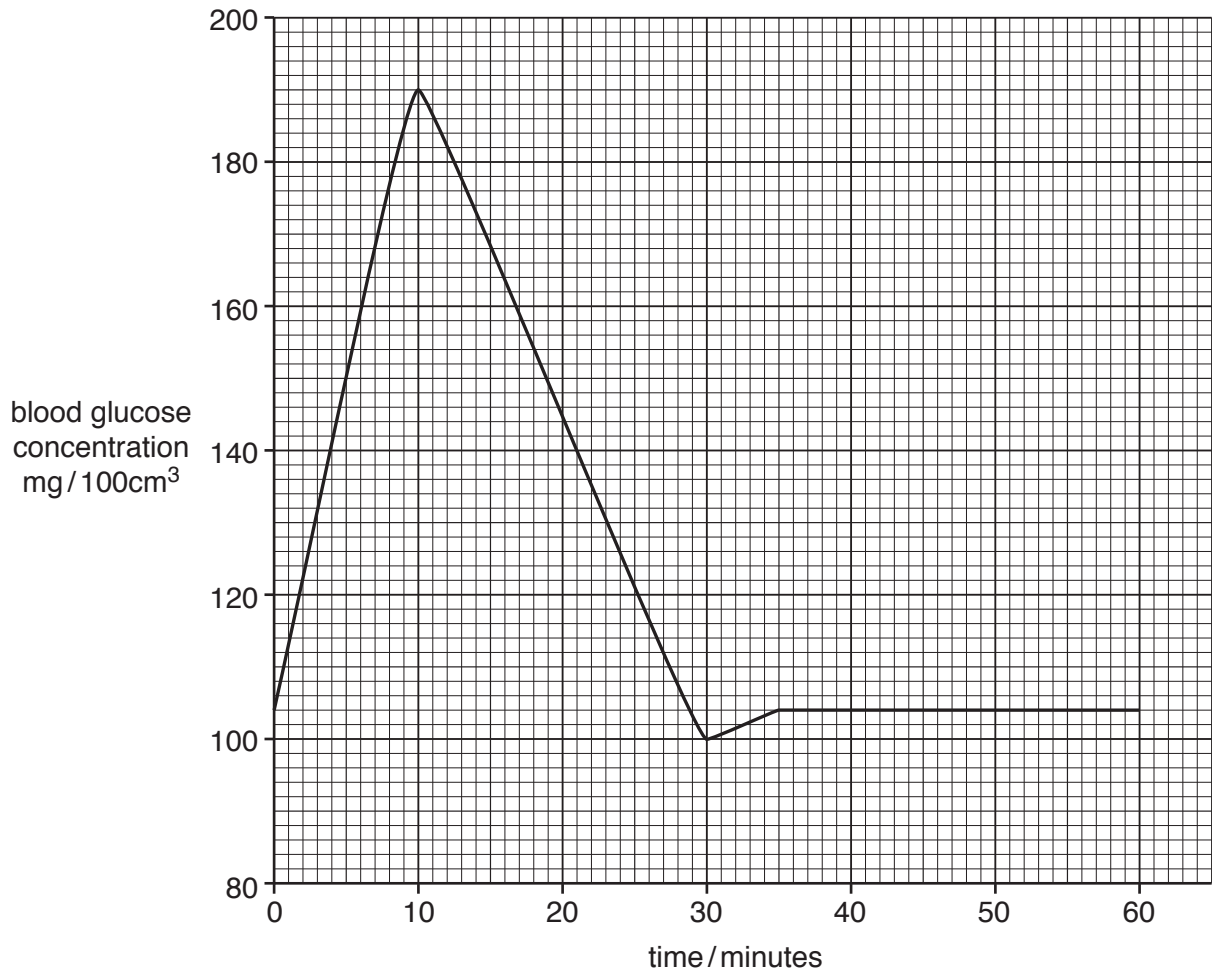


Fig. 13.1

- (a) Describe the changes to blood glucose concentration after a meal.

from 0–10 minutes

.....

from 10–30 minutes

.....

from 30–60 minutes

.....

[3]

(b) Respiration requires glucose.

State the **word** equation for respiration.

.....[2]

(c) Name a hormone that increases blood glucose concentration.

.....[1]

(d) Describe what happens to a hormone between the time it is produced by a gland until it is destroyed.

.....
.....
.....[2]

Permission to reproduce items where third-party owned material protected by copyright is included has been sought and cleared where possible. Every reasonable effort has been made by the publisher (UCLES) to trace copyright holders, but if any items requiring clearance have unwittingly been included, the publisher will be pleased to make amends at the earliest possible opportunity.

To avoid the issue of disclosure of answer-related information to candidates, all copyright acknowledgements are reproduced online in the Cambridge International Examinations Copyright Acknowledgements Booklet. This is produced for each series of examinations and is freely available to download at www.cie.org.uk after the live examination series.

Cambridge International Examinations is part of the Cambridge Assessment Group. Cambridge Assessment is the brand name of University of Cambridge Local Examinations Syndicate (UCLES), which is itself a department of the University of Cambridge.

The Periodic Table of Elements

		Group							
I	II	III	IV	V	VI	VII	VIII		
3 Li lithium 7	4 Be beryllium 9	1 H hydrogen 1	5 B boron 11	6 C carbon 12	7 N nitrogen 14	8 O oxygen 16	9 F fluorine 19	10 Ne neon 20	
11 Na sodium 23	12 Mg magnesium 24	Key atomic number atomic symbol name relative atomic mass		13 Al aluminium 27	14 Si silicon 28	15 P phosphorus 31	16 S sulfur 32	17 Cl chlorine 35.5	18 Ar argon 40
19 K potassium 39	20 Ca calcium 40	21 Sc scandium 45	22 Ti titanium 48	23 V vanadium 51	24 Cr chromium 52	25 Mn manganese 55	26 Fe iron 56	27 Co cobalt 59	28 Ni nickel 59
37 Rb rubidium 85	38 Sr strontium 88	39 Y yttrium 89	40 Zr zirconium 91	41 Nb niobium 93	42 Mo molybdenum 96	43 Tc technetium —	44 Ru ruthenium 101	45 Rh rhodium 103	46 Pd palladium 106
55 Cs caesium 133	56 Ba barium 137	57–71 lanthanoids	72 Hf hafnium 178	73 Ta tantalum 181	74 W tungsten 184	75 Re rhenium 186	76 Os osmium 190	77 Ir iridium 192	78 Pt platinum 195
87 Fr francium —	88 Ra radium —	89–103 actinoids	104 Rf rutherfordium —	105 Db dubnium —	106 Sg seaborgium —	107 Bh bohrium —	108 Hs hassium —	109 Mt meitnerium —	110 Ds darmstadtium —
			111 Rg roentgenium —	112 Cn copernicium —	113 Nh nihonium —	114 Fl flerovium —	115 Mc moscovium —	116 Lv livermorium —	117 Ts tennessine —
			118 Og oganesson —	119 Uu unbinilium —	120 Uub unbinilium —	121 Uut unbinilium —	122 Uuq unbinilium —	123 Uuq unbinilium —	124 Uuq unbinilium —
			125 Uup unbinilium —	126 Uuq unbinilium —	127 Uuq unbinilium —	128 Uuq unbinilium —	129 Uuq unbinilium —	130 Uuq unbinilium —	131 Uuq unbinilium —
			132 Uuq unbinilium —	133 Uuq unbinilium —	134 Uuq unbinilium —	135 Uuq unbinilium —	136 Uuq unbinilium —	137 Uuq unbinilium —	138 Uuq unbinilium —
			139 Uuq unbinilium —	140 Uuq unbinilium —	141 Uuq unbinilium —	142 Uuq unbinilium —	143 Uuq unbinilium —	144 Uuq unbinilium —	145 Uuq unbinilium —
			146 Uuq unbinilium —	147 Uuq unbinilium —	148 Uuq unbinilium —	149 Uuq unbinilium —	150 Uuq unbinilium —	151 Uuq unbinilium —	152 Uuq unbinilium —
			153 Uuq unbinilium —	154 Uuq unbinilium —	155 Uuq unbinilium —	156 Uuq unbinilium —	157 Uuq unbinilium —	158 Uuq unbinilium —	159 Uuq unbinilium —
			160 Uuq unbinilium —	161 Uuq unbinilium —	162 Uuq unbinilium —	163 Uuq unbinilium —	164 Uuq unbinilium —	165 Uuq unbinilium —	166 Uuq unbinilium —
			167 Uuq unbinilium —	168 Uuq unbinilium —	169 Uuq unbinilium —	170 Uuq unbinilium —	171 Uuq unbinilium —	172 Uuq unbinilium —	173 Uuq unbinilium —
			174 Uuq unbinilium —	175 Uuq unbinilium —	176 Uuq unbinilium —	177 Uuq unbinilium —	178 Uuq unbinilium —	179 Uuq unbinilium —	180 Uuq unbinilium —
			181 Uuq unbinilium —	182 Uuq unbinilium —	183 Uuq unbinilium —	184 Uuq unbinilium —	185 Uuq unbinilium —	186 Uuq unbinilium —	187 Uuq unbinilium —
			188 Uuq unbinilium —	189 Uuq unbinilium —	190 Uuq unbinilium —	191 Uuq unbinilium —	192 Uuq unbinilium —	193 Uuq unbinilium —	194 Uuq unbinilium —
			195 Uuq unbinilium —	196 Uuq unbinilium —	197 Uuq unbinilium —	198 Uuq unbinilium —	199 Uuq unbinilium —	200 Uuq unbinilium —	201 Uuq unbinilium —
			202 Uuq unbinilium —	203 Uuq unbinilium —	204 Uuq unbinilium —	205 Uuq unbinilium —	206 Uuq unbinilium —	207 Uuq unbinilium —	208 Uuq unbinilium —
			209 Uuq unbinilium —	210 Uuq unbinilium —	211 Uuq unbinilium —	212 Uuq unbinilium —	213 Uuq unbinilium —	214 Uuq unbinilium —	215 Uuq unbinilium —
			216 Uuq unbinilium —	217 Uuq unbinilium —	218 Uuq unbinilium —	219 Uuq unbinilium —	220 Uuq unbinilium —	221 Uuq unbinilium —	222 Uuq unbinilium —
			223 Uuq unbinilium —	224 Uuq unbinilium —	225 Uuq unbinilium —	226 Uuq unbinilium —	227 Uuq unbinilium —	228 Uuq unbinilium —	229 Uuq unbinilium —
			230 Uuq unbinilium —	231 Uuq unbinilium —	232 Uuq unbinilium —	233 Uuq unbinilium —	234 Uuq unbinilium —	235 Uuq unbinilium —	236 Uuq unbinilium —
			237 Uuq unbinilium —	238 Uuq unbinilium —	239 Uuq unbinilium —	240 Uuq unbinilium —	241 Uuq unbinilium —	242 Uuq unbinilium —	243 Uuq unbinilium —
			244 Uuq unbinilium —	245 Uuq unbinilium —	246 Uuq unbinilium —	247 Uuq unbinilium —	248 Uuq unbinilium —	249 Uuq unbinilium —	250 Uuq unbinilium —
			251 Uuq unbinilium —	252 Uuq unbinilium —	253 Uuq unbinilium —	254 Uuq unbinilium —	255 Uuq unbinilium —	256 Uuq unbinilium —	257 Uuq unbinilium —
			258 Uuq unbinilium —	259 Uuq unbinilium —	260 Uuq unbinilium —	261 Uuq unbinilium —	262 Uuq unbinilium —	263 Uuq unbinilium —	264 Uuq unbinilium —
			265 Uuq unbinilium —	266 Uuq unbinilium —	267 Uuq unbinilium —	268 Uuq unbinilium —	269 Uuq unbinilium —	270 Uuq unbinilium —	271 Uuq unbinilium —
			272 Uuq unbinilium —	273 Uuq unbinilium —	274 Uuq unbinilium —	275 Uuq unbinilium —	276 Uuq unbinilium —	277 Uuq unbinilium —	278 Uuq unbinilium —
			279 Uuq unbinilium —	280 Uuq unbinilium —	281 Uuq unbinilium —	282 Uuq unbinilium —	283 Uuq unbinilium —	284 Uuq unbinilium —	285 Uuq unbinilium —
			286 Uuq unbinilium —	287 Uuq unbinilium —	288 Uuq unbinilium —	289 Uuq unbinilium —	290 Uuq unbinilium —	291 Uuq unbinilium —	292 Uuq unbinilium —
			293 Uuq unbinilium —	294 Uuq unbinilium —	295 Uuq unbinilium —	296 Uuq unbinilium —	297 Uuq unbinilium —	298 Uuq unbinilium —	299 Uuq unbinilium —
			300 Uuq unbinilium —	301 Uuq unbinilium —	302 Uuq unbinilium —	303 Uuq unbinilium —	304 Uuq unbinilium —	305 Uuq unbinilium —	306 Uuq unbinilium —
			307 Uuq unbinilium —	308 Uuq unbinilium —	309 Uuq unbinilium —	310 Uuq unbinilium —	311 Uuq unbinilium —	312 Uuq unbinilium —	313 Uuq unbinilium —
			314 Uuq unbinilium —	315 Uuq unbinilium —	316 Uuq unbinilium —	317 Uuq unbinilium —	318 Uuq unbinilium —	319 Uuq unbinilium —	320 Uuq unbinilium —
			321 Uuq unbinilium —	322 Uuq unbinilium —	323 Uuq unbinilium —	324 Uuq unbinilium —	325 Uuq unbinilium —	326 Uuq unbinilium —	327 Uuq unbinilium —
			328 Uuq unbinilium —	329 Uuq unbinilium —	330 Uuq unbinilium —	331 Uuq unbinilium —	332 Uuq unbinilium —	333 Uuq unbinilium —	334 Uuq unbinilium —
			335 Uuq unbinilium —	336 Uuq unbinilium —	337 Uuq unbinilium —	338 Uuq unbinilium —	339 Uuq unbinilium —	340 Uuq unbinilium —	341 Uuq unbinilium —
			342 Uuq unbinilium —	343 Uuq unbinilium —	344 Uuq unbinilium —	345 Uuq unbinilium —	346 Uuq unbinilium —	347 Uuq unbinilium —	348 Uuq unbinilium —
			349 Uuq unbinilium —	350 Uuq unbinilium —	351 Uuq unbinilium —	352 Uuq unbinilium —	353 Uuq unbinilium —	354 Uuq unbinilium —	355 Uuq unbinilium —
			356 Uuq unbinilium —	357 Uuq unbinilium —	358 Uuq unbinilium —	359 Uuq unbinilium —	360 Uuq unbinilium —	361 Uuq unbinilium —	362 Uuq unbinilium —
			363 Uuq unbinilium —	364 Uuq unbinilium —	365 Uuq unbinilium —	366 Uuq unbinilium —	367 Uuq unbinilium —	368 Uuq unbinilium —	369 Uuq unbinilium —
			370 Uuq unbinilium —	371 Uuq unbinilium —	372 Uuq unbinilium —	373 Uuq unbinilium —	374 Uuq unbinilium —	375 Uuq unbinilium —	376 Uuq unbinilium —
			377 Uuq unbinilium —	378 Uuq unbinilium —	379 Uuq unbinilium —	380 Uuq unbinilium —	381 Uuq unbinilium —	382 Uuq unbinilium —	383 Uuq unbinilium —
			384 Uuq unbinilium —	385 Uuq unbinilium —	386 Uuq unbinilium —	387 Uuq unbinilium —	388 Uuq unbinilium —	389 Uuq unbinilium —	390 Uuq unbinilium —
			391 Uuq unbinilium —	392 Uuq unbinilium —	393 Uuq unbinilium —	394 Uuq unbinilium —	395 Uuq unbinilium —	396 Uuq unbinilium —	397 Uuq unbinilium —
			398 Uuq unbinilium —	399 Uuq unbinilium —	400 Uuq unbinilium —	401 Uuq unbinilium —	402 Uuq unbinilium —	403 Uuq unbinilium —	404 Uuq unbinilium —
			405 Uuq unbinilium —	406 Uuq unbinilium —	407 Uuq unbinilium —	408 Uuq unbinilium —	409 Uuq unbinilium —	410 Uuq unbinilium —	411 Uuq unbinilium —
			412 Uuq unbinilium —	413 Uuq unbinilium —	414 Uuq unbinilium —	415 Uuq unbinilium —	416 Uuq unbinilium —	417 Uuq unbinilium —	418 Uuq unbinilium —
			419 Uuq unbinilium —	420 Uuq unbinilium —	421 Uuq unbinilium —	422 Uuq unbinilium —	423 Uuq unbinilium —	424 Uuq unbinilium —	425 Uuq unbinilium —
			426 Uuq unbinilium —	427 Uuq unbinilium —	428 Uuq unbinilium —	429 Uuq unbinilium —	430 Uuq unbinilium —	431 Uuq unbinilium —	432 Uuq unbinilium —
			433 Uuq unbinilium —	434 Uuq unbinilium —	435 Uuq unbinilium —	436 Uuq unbinilium —	437 Uuq unbinilium —	438 Uuq unbinilium —	439 Uuq unbinilium —
			440 Uuq unbinilium —	441 Uuq unbinilium —	442 Uuq unbinilium —	443 Uuq unbinilium —	444 Uuq unbinilium —	445 Uuq unbinilium —	446 Uuq unbinilium —
			447 Uuq unbinilium —	448 Uuq unbinilium —	449 Uuq unbinilium —	450 Uuq unbinilium —	451 Uuq unbinilium —	452 Uuq unbinilium —	453 Uuq unbinilium —
			454 Uuq unbinilium —	455 Uuq unbinilium —	456 Uuq unbinilium —	457 Uuq unbinilium —	458 Uuq unbinilium —	459 Uuq unbinilium —	460 Uuq unbinilium —
			461 Uuq unbinilium —	462 Uuq unbinilium —	463 Uuq unbinilium —	464 Uuq unbinilium —	465 Uuq unbinilium —	466 Uuq unbinilium —	467 Uuq unbinilium —
			468 Uuq unbinilium —	469 Uuq unbinilium —	470 Uuq unbinilium —	471 Uuq unbinilium —	472 Uuq unbinilium —	473 Uuq unbinilium —	474 Uuq unbinilium —
			475 Uuq unbinilium —	476 Uuq unbinilium —	477 Uuq unbinilium —	478 Uuq unbinilium —	479 Uuq unbinilium —	480 Uuq unbinilium —	481 Uuq unbinilium —
			482 Uuq unbinilium —	483 Uuq unbinilium —	484 Uuq unbinilium —	485 Uuq unbinilium —	486 Uuq unbinilium —	487 Uuq unbinilium —	488 Uuq unbinilium —
			489 Uuq unbinilium —	490 Uuq unbinilium —	491 Uuq unbinilium —	492 Uuq unbinilium —	493 Uuq unbinilium —	494 Uuq unbinilium —	495 Uuq unbinilium —
			496 Uuq unbinilium —	497 Uuq unbinilium —	498 Uuq unbinilium —	499 Uuq unbinilium —	500 Uuq unbinilium —	501 Uuq unbinilium —	502 Uuq unbinilium —
			503 Uuq unbinilium —	504 Uuq unbinilium —	505 Uuq unbinilium —	506 Uuq unbinilium —	507 Uuq unbinilium —	508 Uuq unbinilium —	509 Uuq unbinilium —
			510 Uuq unbinilium —	511 Uuq unbinilium —	512 Uuq unbinilium —	513 Uuq unbinilium —	514 Uuq unbinilium —	515 Uuq unbinilium —	516 Uuq unbinilium —
			517 Uuq unbinilium —	518 Uuq unbinilium —	519 Uuq unbinilium —	520 Uuq unbinilium —	521 Uuq unbinilium —	522 Uuq unbinilium —	523 Uuq unbinilium —
			524 Uuq unbinilium —	525 Uuq unbinilium —	526 Uuq unbinilium —	527 Uuq unbinilium —	528 Uuq unbinilium —	529 Uuq unbinilium —	53