



Cambridge IGCSE™

CANDIDATE
NAME

CENTRE
NUMBER

--	--	--	--	--

CANDIDATE
NUMBER

--	--	--	--

CO-ORDINATED SCIENCES

0654/43

Paper 4 Theory (Extended)

May/June 2021

2 hours

You must answer on the question paper.

No additional materials are needed.

INSTRUCTIONS

- Answer **all** questions.
- Use a black or dark blue pen. You may use an HB pencil for any diagrams or graphs.
- Write your name, centre number and candidate number in the boxes at the top of the page.
- Write your answer to each question in the space provided.
- Do **not** use an erasable pen or correction fluid.
- Do **not** write on any bar codes.
- You may use a calculator.
- You should show all your working and use appropriate units.

INFORMATION

- The total mark for this paper is 120.
- The number of marks for each question or part question is shown in brackets [].
- The Periodic Table is printed in the question paper.

This document has **28** pages. Any blank pages are indicated.

1 (a) Fig. 1.1 is a photograph of an insect-pollinated flower.



Fig. 1.1

(i) Identify the parts labelled **A**, **B** and **C** in Fig. 1.1.

- A
- B
- C

[3]

(ii) Describe two **visible** pieces of evidence from Fig. 1.1 that suggest this is an insect-pollinated flower.

- 1
-
- 2
-

[2]

(iii) Describe two ways the pollen from the flower in Fig. 1.1 would be different from pollen in a wind-pollinated flower.

- 1
- 2

[2]

(b) Pollen contains the male gametes.

State one way the chromosome number in the nuclei of a gamete is different from that of a zygote.

..... [1]

(c) A zygote is produced after fertilisation.

State where fertilisation occurs in a plant.

..... [1]

(d) Many plants are capable of both asexual and sexual reproduction.

Complete Table 1.1 to show the **disadvantages** of asexual and sexual reproduction in plants by placing ticks (✓) in the correct boxes.

One has been done for you.

Table 1.1

	less genetic diversity	more energy is used finding a partner	no or less evolution	usually takes a longer length of time
asexual	✓			
sexual				

[2]

[Total: 11]

2 Hydrogen peroxide solution slowly decomposes to make water and oxygen gas.

(a) (i) Write the word equation for this reaction.

..... [1]

(ii) Manganese(IV) oxide is a catalyst for this reaction.

Describe what is meant by a catalyst.

.....

.....

..... [2]

(b) A student investigates the decomposition of hydrogen peroxide solution.

Fig. 2.1 shows the student's experiment.

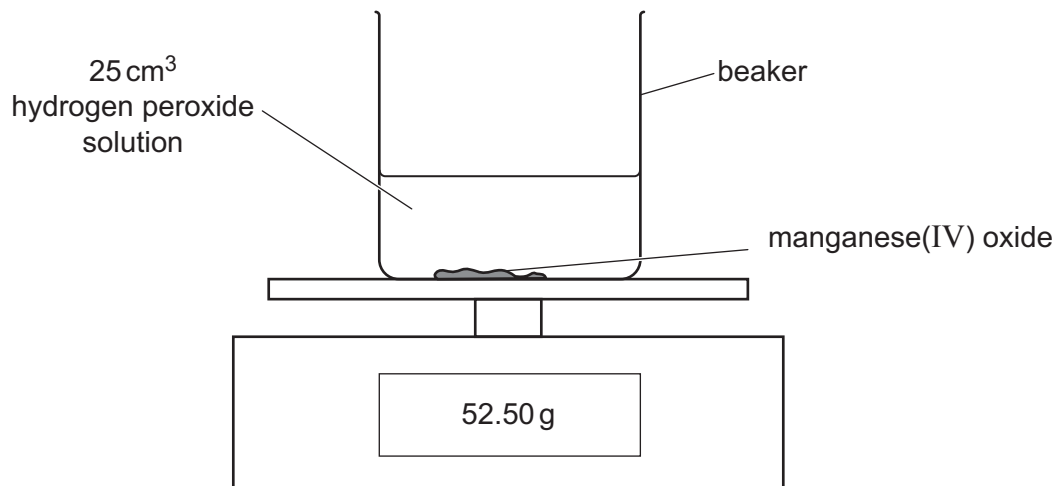


Fig. 2.1

Fig. 2.2 shows a graph of the student's results.

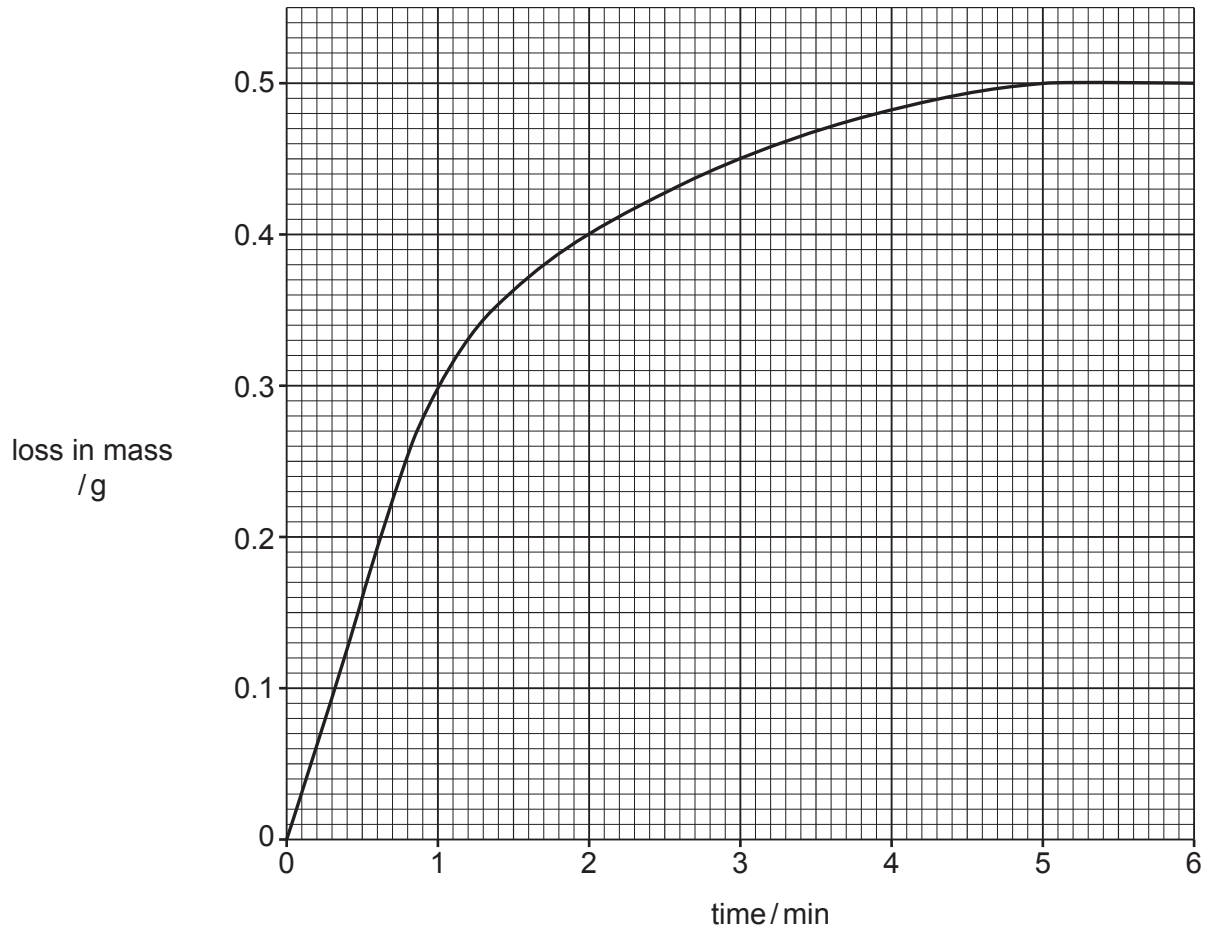


Fig. 2.2

(i) State the loss in mass after 2 minutes.

loss in mass = g [1]

(ii) State what happens to the rate of the reaction between 1 and 4 minutes.

..... [1]

(c) The student wants to increase the rate of the decomposition of the hydrogen peroxide solution.

He does not want to change the **catalyst** or the **volume** of the hydrogen peroxide solution.

Describe **and** explain **one** way that the student can use to increase the rate of the reaction.

Explain your answer in terms of collisions between particles.

.....

.....

.....

.....

[3]

[Total: 8]

- 3 Fig. 3.1 shows a kettle and the label on the bottom of the kettle. The kettle contains a heating element inside its base.

The kettle is made of white plastic.

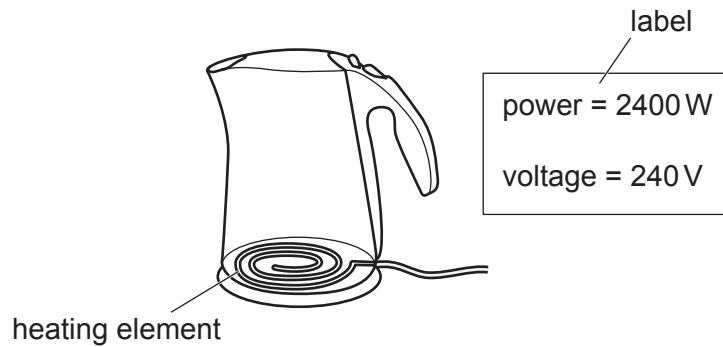


Fig. 3.1

- (a) Explain, in terms of thermal energy transfer, why the kettle is:

- (i) made of plastic.

.....
 [1]

- (ii) white.

.....
 [1]

- (b) (i) The kettle is filled with cold water and switched on.

Describe, in terms of density changes, how the heating element heats up all of the water.

.....

 [3]

- (ii) Calculate the current in the heating element.

State the unit for your answer.

current = unit = [3]

(iii) Show that the resistance of the heating element is $24\ \Omega$.

[1]

(iv) The heating element is connected in parallel with a $12\ \Omega$ resistor.

Calculate the combined resistance of the heating element and the resistor.

resistance = Ω [2]

[Total: 11]

- 4 (a) Table 4.1 shows the forest area in two different continents, **A** and **B**, in 1990 and 2010.

Table 4.1

continent	total forest area / thousand km ²	
	in 1990	in 2010
A	9460	8640
B	9890	10050

- (i) Compare the total forest area for continents **A** and **B** between the years 1990 and 2010.

Use comparative data from Table 4.1 in your answer.

.....

.....

.....

.....

.....

.....

..... [3]

- (ii) The change to the total forest area for continent **A** may affect the animals living in the forest.

Describe three ways the animals may be affected.

1

.....

2

.....

3

.....

[3]

- (iii) Explain two ways that deforestation causes the carbon dioxide concentration in the atmosphere to increase.

1

.....

2

.....

[2]

(b) Plants in a forest will compete for light.

Auxin is a hormone that is responsible for the chemical control of shoot growth.

Complete the sentences to describe how auxin causes shoots to grow towards the light.

Auxin is made in the shoot and moves and spreads through the plant.

It collects on the side of the shoot.

Auxin stimulates cellso this side will grow more.

This results in the shoot bending towards the light.

This growth response to light is called

[4]

[Total: 12]

5 Different methods can be used to extract metals from their ores.

The method used depends on how reactive each metal is.

(a) Draw a line to link the **reactivity** of each metal to the **method of extracting** it from the ore.

Use each method **only once**.

reactivity of metal	method of extracting
reactive metal e.g. aluminium	extracted from the ground as the metal
less reactive metal e.g. copper	heating with carbon
very unreactive metal e.g. gold	electrolysis

[2]

(b) Fig. 5.1 shows a blast furnace. It is used to extract iron from iron ore.

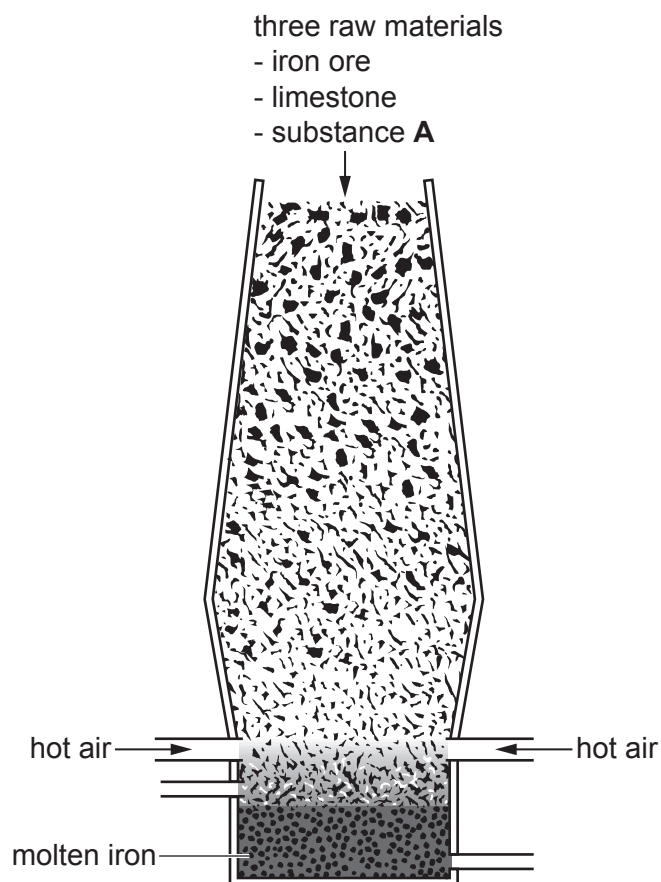


Fig. 5.1

- (i) State the name of an ore that contains iron.

Choose from the list.

bauxite
hematite
malachite
marble

..... [1]

- (ii) Three raw materials are added to the top of the blast furnace.

These are iron ore, limestone and substance **A**.

State the name of substance **A**.

..... [1]

- (iii) Inside the blast furnace, iron ore, Fe_2O_3 , reacts with carbon monoxide, CO .

Iron, Fe , and carbon dioxide, CO_2 , are made.

Write the balanced symbol equation for this reaction.

..... [2]

- (iv) In the blast furnace iron(III) ions, Fe^{3+} , are changed into iron.

The balanced half-equation is shown.



Iron(III) ions gain electrons.

State the name of the process when electrons are gained.

..... [1]

- (v) Iron(III) ions, Fe^{3+} , react with sulfate ions, SO_4^{2-} to make iron(III) sulfate.

Determine the formula of iron(III) sulfate.

..... [1]

(c) Calcium carbonate, CaCO_3 , is used to remove acidic impurities in the blast furnace.

Calcium carbonate thermally decomposes to make calcium oxide and carbon dioxide.

The balanced symbol equation for the reaction is shown.



1000 kg of calcium carbonate are heated.

Calculate the mass of carbon dioxide gas made.

Show your working.

[A_r : C, 12; Ca, 40; O, 16]

mass of carbon dioxide gas = kg [2]

[Total: 10]

6 (a) A sprinter runs a 200 m race in 25 seconds.

(i) Calculate the average speed of the sprinter.

average speed = m/s [2]

(ii) The sprinter has a mass of 90 kg.

Calculate the average kinetic energy of the sprinter.

average kinetic energy = J [2]

(b) Fig. 6.1 shows the forces acting on the sprinter during the race.




Fig. 6.1

(i) Calculate the resultant force acting on the sprinter.

resultant force = N [1]

(ii) Describe how these forces would change the motion of the sprinter.

.....

.....

.....

..... [2]

[Total: 7]

7 Fig. 7.1 is a diagram of a cross-section through human skin.

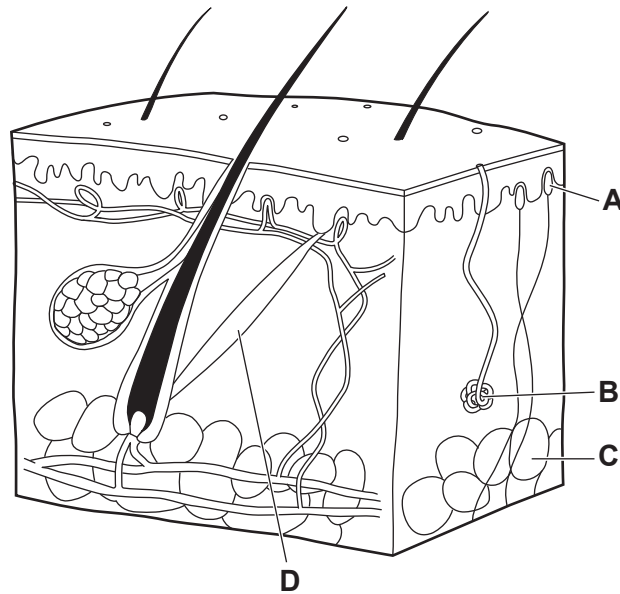


Fig. 7.1

(a) The boxes on the left show the letters in Fig. 7.1.

The boxes on the right show the names of some of the parts of the skin.

Draw lines to link each letter in Fig. 7.1 to its correct name.

letter in Fig. 7.1	name
A	fatty tissue
B	hair erector muscle
C	receptor
D	sweat gland

[3]

(b) Fig. 7.2 shows blood vessels in the skin during warm conditions.

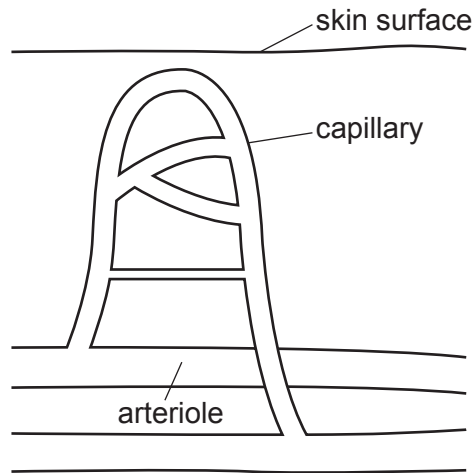


Fig. 7.2

(i) Describe the role of arterioles and capillaries in temperature control when the body gets too hot. Include the name of the process in your answer.

.....

.....

.....

.....

.....

..... [3]

(ii) State one response by the body to a decrease in internal body temperature.

..... [1]

(iii) Name the term used to describe the mechanism used to return internal body temperature to a normal level.

..... [1]

(c) Adrenaline is a hormone that can also affect the skin and blood flow.

Describe two ways that adrenaline affects the blood.

1

.....

2

.....

[2]

[Total: 10]

[Turn over

- 8 The fractional distillation of petroleum makes useful fractions.
Three of the fractions made are petrol, fuel oil and refinery gas.
Refinery gas contains ethane, C₂H₆.

(a) Draw the structure of an ethane molecule.

Show all the covalent bonds.

[1]

(b) Ethane burns in oxygen to make carbon dioxide and water.

The balanced symbol equation is shown.



The reaction is **exothermic**.

Use the axes shown in Fig. 8.1 to draw and label the energy level diagram for this reaction.

Label:

- the energy of the reactants and the products
- the energy change in the reaction
- the activation energy of the reaction.

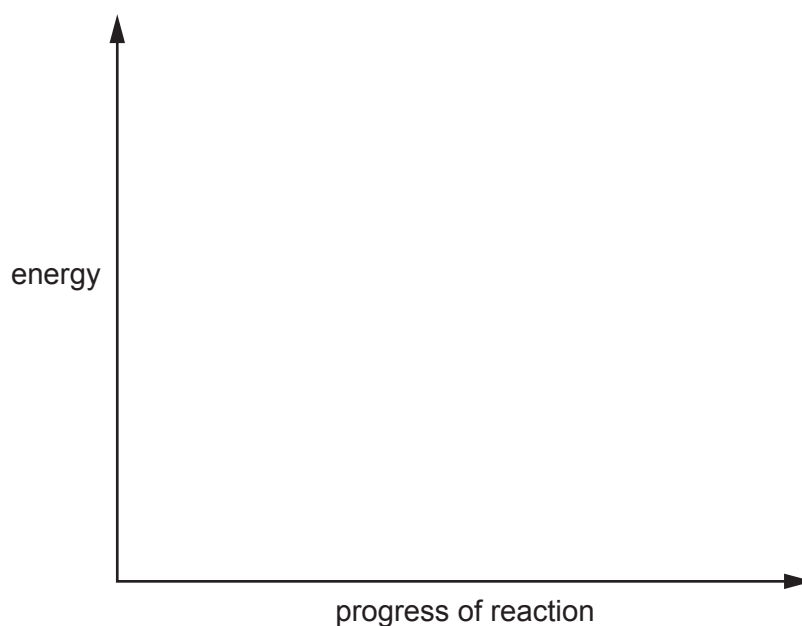


Fig. 8.1

[3]

- (c) Fractional distillation makes too much fuel oil and not enough petrol.

Cracking is a process that breaks large molecules into smaller molecules.

Some fractions are cracked.

Suggest why cracking is useful.

.....

.....

..... [2]


- (d) During cracking, dodecane, $C_{12}H_{26}$, can make octane, C_8H_{18} , and ethene, C_2H_4 .

Write the balanced symbol equation for this reaction.

..... [2]

- (e) Ethene is changed into poly(ethene) in a polymerisation reaction.

Polymerisation changes many small molecules into larger long chain molecules.



State the name of the small molecules used in polymerisation.

Choose from the list.

alkane
monomer
nylon
polymer

..... [1]

- (f) Fig. 8.2 shows the structure of a small molecule called propene.

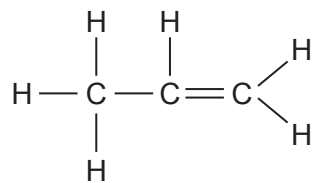


Fig. 8.2

Propene is an alkene. It is unsaturated.

Explain why propene is unsaturated.

..... [1]

- (g) Table 8.1 shows the structures of some small molecules and long chain molecules.

Complete Table 8.1.

Table 8.1

name of small molecule	structure of small molecule	structure of long chain molecule
ethene	$ \begin{array}{c} \text{H} \quad \quad \text{H} \\ \diagdown \quad \diagup \\ \text{C}=\text{C} \\ \diagup \quad \diagdown \\ \text{H} \quad \quad \text{H} \end{array} $	$ \left[\begin{array}{cc} \text{H} & \text{H} \\ & \\ -\text{C} & -\text{C}- \\ & \\ \text{H} & \text{H} \end{array} \right]_n $
propene	$ \begin{array}{c} \quad \quad \quad \text{H} \quad \text{H} \\ \quad \quad \quad \diagdown \quad \diagup \\ \quad \quad \quad \text{C} \\ \diagdown \quad \diagup \\ \text{H} \quad \quad \text{C}=\text{C} \\ \diagup \quad \diagdown \\ \text{H} \quad \quad \text{H} \end{array} $	
chloroethene		$ \left[\begin{array}{cc} \text{H} & \text{Cl} \\ & \\ -\text{C} & -\text{C}- \\ & \\ \text{H} & \text{H} \end{array} \right]_n $

[2]

[Total: 12]

- 9 (a) Fig. 9.1 represents a straight piece of wire carrying a current passing through a sheet of paper.

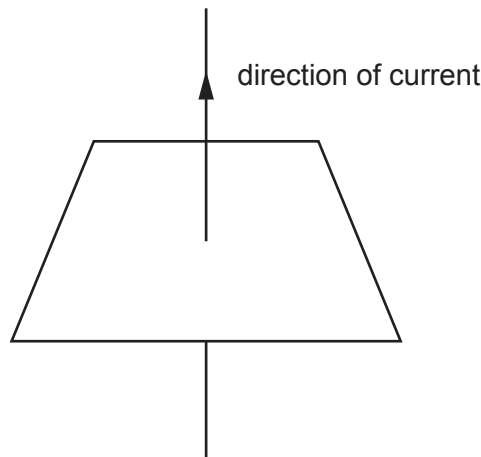


Fig. 9.1

- (i) On Fig. 9.1, draw **two** field lines to show the shape and direction of the magnetic field around the wire. [2]
- (ii) State what effect reversing the direction of the current would have on the magnetic field.

..... [1]

..... [1]

- (b) Fig. 9.2 shows the wire placed into the magnetic field of a permanent magnet.

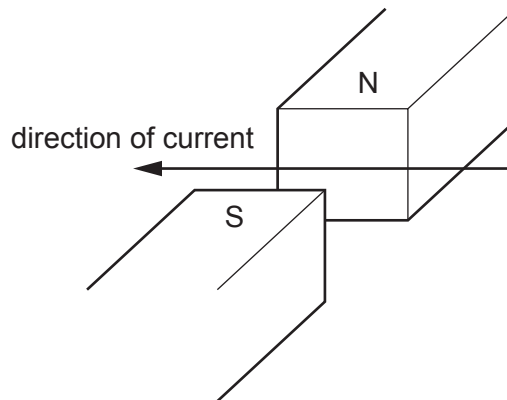


Fig. 9.2

- (i) State the direction of the force acting on the wire. [1]
- [1]
- (ii) Suggest two changes that would increase the size of the force acting on the wire.

1

.....

2

.....

(c) Fig. 9.3 shows an electric motor.

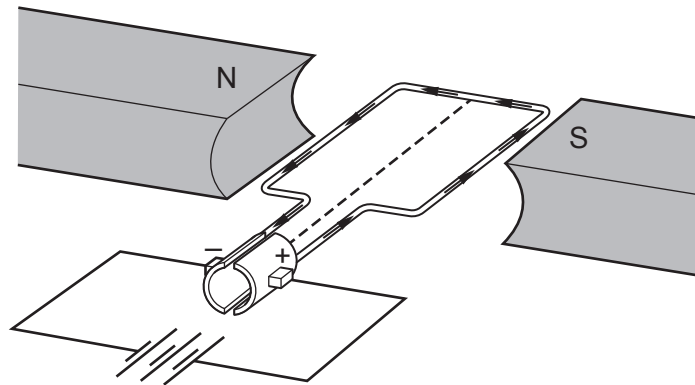


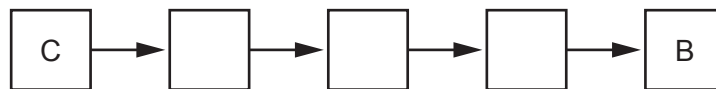
Fig. 9.3

(i) The following statements explain what causes the coil in Fig. 9.3 to rotate.

The statements are in the wrong order.

- A A current flows through the coil.
- B The coil experiences a force and starts to spin.
- C The power supply applies a potential difference across the coil.
- D This causes a magnetic field to be induced around the coil.
- E This interacts with the permanent magnetic field.

Arrange the statements into the correct order.



[2]

(ii) On Fig 9.3, label the split-ring commutator with a cross (X).

[1]

(iii) Describe how the split-ring commutator allows the coil to keep on turning.

.....
 [1]

- (d) A simple a.c. generator produces an alternating voltage.

Fig 9.4 shows how the voltage from the generator varies with time in the form of a wave.

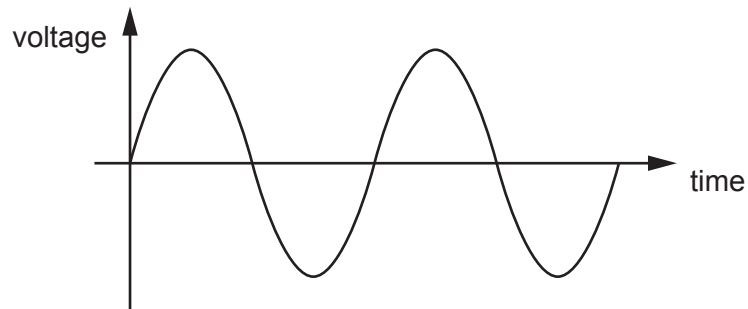


Fig. 9.4

- (i) On Fig. 9.4, draw a double headed arrow (\longleftrightarrow) to show the time taken for the coil in the generator to complete one full rotation. [1]
- (ii) The size of the voltage from the generator is indicated by the amplitude of the wave in Fig. 9.4.

On Fig. 9.4, draw the voltage output of the generator with a smaller voltage. [1]

[Total: 12]

- 10 (a) The percentage of oxygen in inspired air, in expired air when resting and in expired air during exercise is different.

Table 10.1 shows these differences.

Table 10.1

percentage of oxygen		
in inspired air	in expired air when resting	in expired air during exercise
20	16	14

The percentage of oxygen in expired air when resting and expired air during exercise is different.

- (i) Calculate the difference.

.....% [1]

- (ii) Explain this difference.

.....

 [2]

- (b) Exercise increases the rate of breathing.

Describe one other effect of exercise on the pattern of breathing.

.....
 [1]

- (c) An increase in the concentration levels of one gas in the blood causes the increase in breathing rate.

Name this gas.

..... [1]

- (d) Alveoli is the gas exchange surface in humans.

Name two structures that air must pass through before it reaches the alveoli during inspiration.

1

2

[2]

[Total: 7]

(d) Potassium metal reacts with the non-metal bromine to form potassium bromide.

Potassium bromide is an ionic compound.

Describe how metallic and non-metallic elements form ionic bonds.

.....

.....

.....

..... [3]

(e) The electronic structure of carbon is 2.4.

The electronic structure of oxygen is 2.6.

The atoms in a molecule of carbon dioxide, CO_2 , are held together by covalent bonds.

Draw the dot-and-cross diagram to show the bonding in carbon dioxide.

You only need to include the outer shell electrons.

[2]

[Total: 10]

12 Fig. 12.1 shows the arrangement of molecules in samples of a solid, a liquid and a gas.

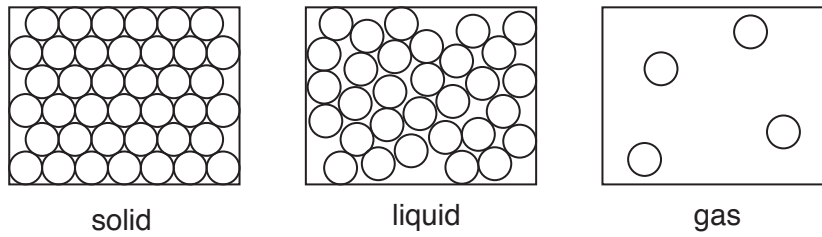


Fig. 12.1

(a) Some statements about the structure and properties of matter are given.

Place a tick (✓) next to all of the statements that describe the structure or properties of a **solid**.

- There are no forces between molecules.
- Forces between molecules are strong.
- It has a fixed volume.
- It can be compressed.
- Molecules can only vibrate.
- Molecules are free to move.

[3]

(b) Fig. 12.2 shows a syringe filled with a gas similar to the sample shown in Fig. 12.1.

The syringe is attached to a pressure gauge which measures the pressure of the gas.

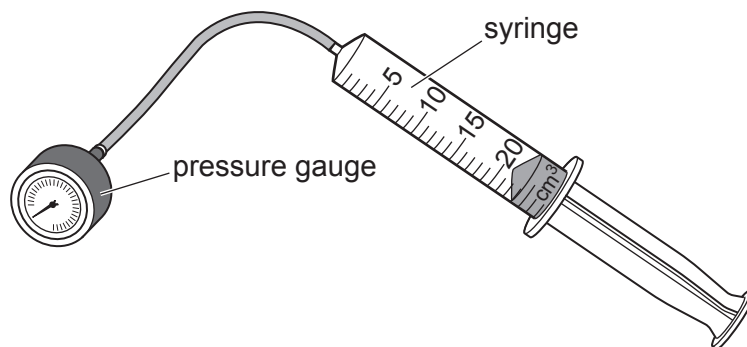


Fig. 12.2

Describe what causes the pressure in the sample of gas in terms of molecular motion.

.....

.....

.....

..... [2]

- (c) A student conducts an investigation into how the pressure of the gas changes with volume. The temperature of the gas remains constant.

Fig. 12.3 shows the results of the student's investigation.

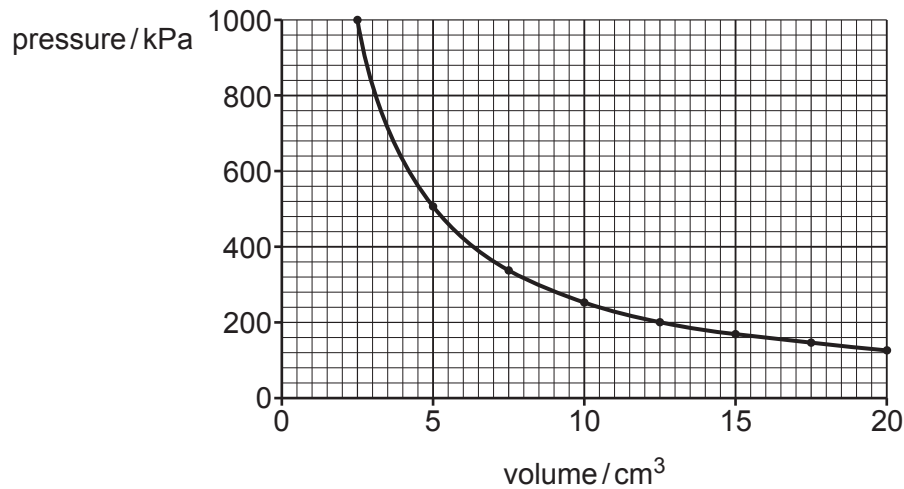


Fig. 12.3

- (i) Use Fig. 12.3 to determine the volume of the sample of gas when the pressure is 500 kPa.

volume = cm³ [1]

- (ii) The mass of the sample of gas is 2.45 g.

Calculate the density of the sample of gas when the pressure is 500 kPa.

density = g/cm³ [2]

- (d) Explain why increasing the temperature of a sample of gas, while keeping the volume constant, causes an increase in pressure.

.....

 [2]

[Total: 10]

BLANK PAGE

Permission to reproduce items where third-party owned material protected by copyright is included has been sought and cleared where possible. Every reasonable effort has been made by the publisher (UCLES) to trace copyright holders, but if any items requiring clearance have unwittingly been included, the publisher will be pleased to make amends at the earliest possible opportunity.

To avoid the issue of disclosure of answer-related information to candidates, all copyright acknowledgements are reproduced online in the Cambridge Assessment International Education Copyright Acknowledgements Booklet. This is produced for each series of examinations and is freely available to download at www.cambridgeinternational.org after the live examination series.

Cambridge Assessment International Education is part of the Cambridge Assessment Group. Cambridge Assessment is the brand name of the University of Cambridge Local Examinations Syndicate (UCLES), which itself is a department of the University of Cambridge.

The Periodic Table of Elements

		Group							
I	II	III	IV	V	VI	VII	VIII		
3 Li lithium 7	4 Be beryllium 9	1 H hydrogen 1	5 B boron 11	6 C carbon 12	7 N nitrogen 14	8 O oxygen 16	9 F fluorine 19	10 Ne neon 20	
11 Na sodium 23	12 Mg magnesium 24	Key atomic number atomic symbol name relative atomic mass		13 Al aluminium 27	14 Si silicon 28	15 P phosphorus 31	16 S sulfur 32	17 Cl chlorine 35.5	18 Ar argon 40
19 K potassium 39	20 Ca calcium 40	21 Sc scandium 45	22 Ti titanium 48	23 V vanadium 51	24 Cr chromium 52	25 Mn manganese 55	26 Fe iron 56	27 Co cobalt 59	28 Ni nickel 59
37 Rb rubidium 85	38 Sr strontium 88	39 Y yttrium 89	40 Zr zirconium 91	41 Nb niobium 93	42 Mo molybdenum 96	43 Tc technetium —	44 Ru ruthenium 101	45 Rh rhodium 103	46 Pd palladium 106
55 Cs caesium 133	56 Ba barium 137	57–71 lanthanoids	72 Hf hafnium 178	73 Ta tantalum 181	74 W tungsten 184	75 Re rhenium 186	76 Os osmium 190	77 Ir iridium 192	78 Pt platinum 195
87 Fr francium —	88 Ra radium —	89–103 actinoids	104 Rf rutherfordium —	105 Db dubnium —	106 Sg seaborgium —	107 Bh bohrium —	108 Hs hassium —	109 Mt meitnerium —	110 Ds darmstadtium —
			111 Rg roentgenium —	112 Cn copernicium —	113 Nh nihonium —	114 Fl flerovium —	115 Mc moscovium —	116 Lv livermorium —	117 Ts tennessine —
			118 Og oganesson —	119 Uue unbinilium —	120 Uuo unbinilium —	121 Uuq unbinilium —	122 Uub unbinilium —	123 Uut unbinilium —	124 Uuq unbinilium —
			125 Uup unbinilium —	126 Uuq unbinilium —	127 Uub unbinilium —	128 Uut unbinilium —	129 Uuq unbinilium —	130 Uub unbinilium —	131 Uut unbinilium —
			132 Uuo unbinilium —	133 Uuq unbinilium —	134 Uub unbinilium —	135 Uut unbinilium —	136 Uuq unbinilium —	137 Uub unbinilium —	138 Uut unbinilium —
			139 Uuo unbinilium —	140 Uuq unbinilium —	141 Uub unbinilium —	142 Uut unbinilium —	143 Uuq unbinilium —	144 Uub unbinilium —	145 Uut unbinilium —
			146 Uuo unbinilium —	147 Uuq unbinilium —	148 Uub unbinilium —	149 Uut unbinilium —	150 Uuq unbinilium —	151 Uub unbinilium —	152 Uut unbinilium —
			153 Uuo unbinilium —	154 Uuq unbinilium —	155 Uub unbinilium —	156 Uut unbinilium —	157 Uuq unbinilium —	158 Uub unbinilium —	159 Uut unbinilium —
			160 Uuo unbinilium —	161 Uuq unbinilium —	162 Uub unbinilium —	163 Uut unbinilium —	164 Uuq unbinilium —	165 Uub unbinilium —	166 Uut unbinilium —
			167 Uuo unbinilium —	168 Uuq unbinilium —	169 Uub unbinilium —	170 Uut unbinilium —	171 Uuq unbinilium —	172 Uub unbinilium —	173 Uut unbinilium —
			174 Uuo unbinilium —	175 Uuq unbinilium —	176 Uub unbinilium —	177 Uut unbinilium —	178 Uuq unbinilium —	179 Uub unbinilium —	180 Uut unbinilium —
			181 Uuo unbinilium —	182 Uuq unbinilium —	183 Uub unbinilium —	184 Uut unbinilium —	185 Uuq unbinilium —	186 Uub unbinilium —	187 Uut unbinilium —
			188 Uuo unbinilium —	189 Uuq unbinilium —	190 Uub unbinilium —	191 Uut unbinilium —	192 Uuq unbinilium —	193 Uub unbinilium —	194 Uut unbinilium —
			195 Uuo unbinilium —	196 Uuq unbinilium —	197 Uub unbinilium —	198 Uut unbinilium —	199 Uuq unbinilium —	200 Uub unbinilium —	201 Uut unbinilium —
			202 Uuo unbinilium —	203 Uuq unbinilium —	204 Uub unbinilium —	205 Uut unbinilium —	206 Uuq unbinilium —	207 Uub unbinilium —	208 Uut unbinilium —
			209 Uuo unbinilium —	210 Uuq unbinilium —	211 Uub unbinilium —	212 Uut unbinilium —	213 Uuq unbinilium —	214 Uub unbinilium —	215 Uut unbinilium —
			216 Uuo unbinilium —	217 Uuq unbinilium —	218 Uub unbinilium —	219 Uut unbinilium —	220 Uuq unbinilium —	221 Uub unbinilium —	222 Uut unbinilium —
			223 Uuo unbinilium —	224 Uuq unbinilium —	225 Uub unbinilium —	226 Uut unbinilium —	227 Uuq unbinilium —	228 Uub unbinilium —	229 Uut unbinilium —
			230 Uuo unbinilium —	231 Uuq unbinilium —	232 Uub unbinilium —	233 Uut unbinilium —	234 Uuq unbinilium —	235 Uub unbinilium —	236 Uut unbinilium —
			237 Uuo unbinilium —	238 Uuq unbinilium —	239 Uub unbinilium —	240 Uut unbinilium —	241 Uuq unbinilium —	242 Uub unbinilium —	243 Uut unbinilium —
			244 Uuo unbinilium —	245 Uuq unbinilium —	246 Uub unbinilium —	247 Uut unbinilium —	248 Uuq unbinilium —	249 Uub unbinilium —	250 Uut unbinilium —
			251 Uuo unbinilium —	252 Uuq unbinilium —	253 Uub unbinilium —	254 Uut unbinilium —	255 Uuq unbinilium —	256 Uub unbinilium —	257 Uut unbinilium —
			258 Uuo unbinilium —	259 Uuq unbinilium —	260 Uub unbinilium —	261 Uut unbinilium —	262 Uuq unbinilium —	263 Uub unbinilium —	264 Uut unbinilium —
			265 Uuo unbinilium —	266 Uuq unbinilium —	267 Uub unbinilium —	268 Uut unbinilium —	269 Uuq unbinilium —	270 Uub unbinilium —	271 Uut unbinilium —
			272 Uuo unbinilium —	273 Uuq unbinilium —	274 Uub unbinilium —	275 Uut unbinilium —	276 Uuq unbinilium —	277 Uub unbinilium —	278 Uut unbinilium —
			279 Uuo unbinilium —	280 Uuq unbinilium —	281 Uub unbinilium —	282 Uut unbinilium —	283 Uuq unbinilium —	284 Uub unbinilium —	285 Uut unbinilium —
			286 Uuo unbinilium —	287 Uuq unbinilium —	288 Uub unbinilium —	289 Uut unbinilium —	290 Uuq unbinilium —	291 Uub unbinilium —	292 Uut unbinilium —
			293 Uuo unbinilium —	294 Uuq unbinilium —	295 Uub unbinilium —	296 Uut unbinilium —	297 Uuq unbinilium —	298 Uub unbinilium —	299 Uut unbinilium —
			300 Uuo unbinilium —	301 Uuq unbinilium —	302 Uub unbinilium —	303 Uut unbinilium —	304 Uuq unbinilium —	305 Uub unbinilium —	306 Uut unbinilium —
			307 Uuo unbinilium —	308 Uuq unbinilium —	309 Uub unbinilium —	310 Uut unbinilium —	311 Uuq unbinilium —	312 Uub unbinilium —	313 Uut unbinilium —
			314 Uuo unbinilium —	315 Uuq unbinilium —	316 Uub unbinilium —	317 Uut unbinilium —	318 Uuq unbinilium —	319 Uub unbinilium —	320 Uut unbinilium —
			321 Uuo unbinilium —	322 Uuq unbinilium —	323 Uub unbinilium —	324 Uut unbinilium —	325 Uuq unbinilium —	326 Uub unbinilium —	327 Uut unbinilium —
			328 Uuo unbinilium —	329 Uuq unbinilium —	330 Uub unbinilium —	331 Uut unbinilium —	332 Uuq unbinilium —	333 Uub unbinilium —	334 Uut unbinilium —
			335 Uuo unbinilium —	336 Uuq unbinilium —	337 Uub unbinilium —	338 Uut unbinilium —	339 Uuq unbinilium —	340 Uub unbinilium —	341 Uut unbinilium —
			342 Uuo unbinilium —	343 Uuq unbinilium —	344 Uub unbinilium —	345 Uut unbinilium —	346 Uuq unbinilium —	347 Uub unbinilium —	348 Uut unbinilium —
			349 Uuo unbinilium —	350 Uuq unbinilium —	351 Uub unbinilium —	352 Uut unbinilium —	353 Uuq unbinilium —	354 Uub unbinilium —	355 Uut unbinilium —
			356 Uuo unbinilium —	357 Uuq unbinilium —	358 Uub unbinilium —	359 Uut unbinilium —	360 Uuq unbinilium —	361 Uub unbinilium —	362 Uut unbinilium —
			363 Uuo unbinilium —	364 Uuq unbinilium —	365 Uub unbinilium —	366 Uut unbinilium —	367 Uuq unbinilium —	368 Uub unbinilium —	369 Uut unbinilium —
			370 Uuo unbinilium —	371 Uuq unbinilium —	372 Uub unbinilium —	373 Uut unbinilium —	374 Uuq unbinilium —	375 Uub unbinilium —	376 Uut unbinilium —
			377 Uuo unbinilium —	378 Uuq unbinilium —	379 Uub unbinilium —	380 Uut unbinilium —	381 Uuq unbinilium —	382 Uub unbinilium —	383 Uut unbinilium —
			384 Uuo unbinilium —	385 Uuq unbinilium —	386 Uub unbinilium —	387 Uut unbinilium —	388 Uuq unbinilium —	389 Uub unbinilium —	390 Uut unbinilium —
			391 Uuo unbinilium —	392 Uuq unbinilium —	393 Uub unbinilium —	394 Uut unbinilium —	395 Uuq unbinilium —	396 Uub unbinilium —	397 Uut unbinilium —
			398 Uuo unbinilium —	399 Uuq unbinilium —	400 Uub unbinilium —	401 Uut unbinilium —	402 Uuq unbinilium —	403 Uub unbinilium —	404 Uut unbinilium —
			405 Uuo unbinilium —	406 Uuq unbinilium —	407 Uub unbinilium —	408 Uut unbinilium —	409 Uuq unbinilium —	410 Uub unbinilium —	411 Uut unbinilium —
			412 Uuo unbinilium —	413 Uuq unbinilium —	414 Uub unbinilium —	415 Uut unbinilium —	416 Uuq unbinilium —	417 Uub unbinilium —	418 Uut unbinilium —
			419 Uuo unbinilium —	420 Uuq unbinilium —	421 Uub unbinilium —	422 Uut unbinilium —	423 Uuq unbinilium —	424 Uub unbinilium —	425 Uut unbinilium —
			426 Uuo unbinilium —	427 Uuq unbinilium —	428 Uub unbinilium —	429 Uut unbinilium —	430 Uuq unbinilium —	431 Uub unbinilium —	432 Uut unbinilium —
			433 Uuo unbinilium —	434 Uuq unbinilium —	435 Uub unbinilium —	436 Uut unbinilium —	437 Uuq unbinilium —	438 Uub unbinilium —	439 Uut unbinilium —
			440 Uuo unbinilium —	441 Uuq unbinilium —	442 Uub unbinilium —	443 Uut unbinilium —	444 Uuq unbinilium —	445 Uub unbinilium —	446 Uut unbinilium —
			447 Uuo unbinilium —	448 Uuq unbinilium —	449 Uub unbinilium —	450 Uut unbinilium —	451 Uuq unbinilium —	452 Uub unbinilium —	453 Uut unbinilium —
			454 Uuo unbinilium —	455 Uuq unbinilium —	456 Uub unbinilium —	457 Uut unbinilium —	458 Uuq unbinilium —	459 Uub unbinilium —	460 Uut unbinilium —
			461 Uuo unbinilium —	462 Uuq unbinilium —	463 Uub unbinilium —	464 Uut unbinilium —	465 Uuq unbinilium —	466 Uub unbinilium —	467 Uut unbinilium —
			468 Uuo unbinilium —	469 Uuq unbinilium —	470 Uub unbinilium —	471 Uut unbinilium —	472 Uuq unbinilium —	473 Uub unbinilium —	474 Uut unbinilium —
			475 Uuo unbinilium —	476 Uuq unbinilium —	477 Uub unbinilium —	478 Uut unbinilium —	479 Uuq unbinilium —	480 Uub unbinilium —	481 Uut unbinilium —
			482 Uuo unbinilium —	483 Uuq unbinilium —	484 Uub unbinilium —	485 Uut unbinilium —	486 Uuq unbinilium —	487 Uub unbinilium —	488 Uut unbinilium —
			489 Uuo unbinilium —	490 Uuq unbinilium —	491 Uub unbinilium —	492 Uut unbinilium —	493 Uuq unbinilium —	494 Uub unbinilium —	495 Uut unbinilium —
			496 Uuo unbinilium —	497 Uuq unbinilium —	498 Uub unbinilium —	499 Uut unbinilium —	500 Uuq unbinilium —	501 Uub unbinilium —	502 Uut unbinilium —
			503 Uuo unbinilium —	504 Uuq unbinilium —	505 Uub unbinilium —	506 Uut unbinilium —	507 Uuq unbinilium —	508 Uub unbinilium —	509 Uut unbinilium —
			510 Uuo unbinilium —	511 Uuq unbinilium —	512 Uub unbinilium —	513 Uut unbinilium —	514 Uuq unbinilium —	515 Uub unbinilium —	516 Uut unbinilium —
			517 Uuo unbinilium —	518 Uuq unbinilium —	519 Uub unbinilium —	520 Uut unbinilium —	521 Uuq unbinilium —	522 Uub unbinilium —	523 Uut unbinilium —
			524 Uuo unbinilium —	525 Uuq unbinilium —	526 Uub unbinilium —	527 Uut unbinilium —	528 Uuq unbinilium —	529 Uub unbinilium —	530 Uut unbinilium —
			531 Uuo unbinilium —	532 Uuq unbinilium —	533 Uub unbinilium —	534 Uut unbinilium —	535 Uuq unbinilium —	536 Uub unbinilium —	537 Uut unbinilium —
			538 Uuo unbinilium —	539 Uuq unbinilium —	540 Uub unbinilium —	54			