



Cambridge Pre-U

GEOGRAPHY

9768/03

Paper 3 Geographical Issues

May/June 2022

INSERT

2 hours 45 minutes

INFORMATION

- This insert contains all the resources referred to in the questions.
- You may annotate this insert and use the blank spaces for planning. **Do not write your answers** on the insert.



This syllabus is regulated for use in England, Wales and Northern Ireland as a Cambridge International Level 3 Pre-U Certificate.

This document has **8** pages. Any blank pages are indicated.

Fig. 1.1 for Question 1

The effect of the 2011 tsunami on the town of Wakuya, Japan



Fig. 2.1 for Question 2

Predicted visibility, 10 May 2019, New Zealand

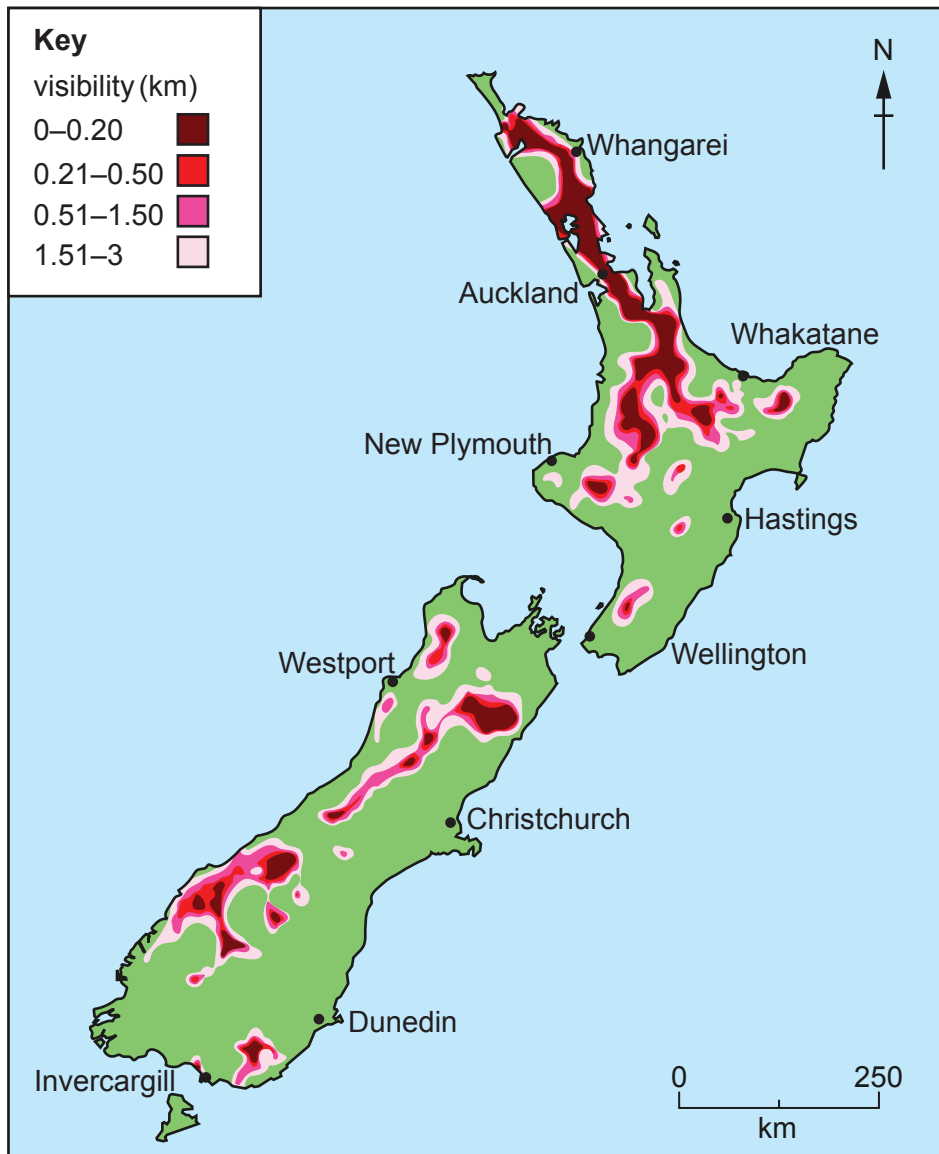


Fig. 3.1 for Question 3

February 2020 UK rainfall as a percentage of the 1981–2010 average for February

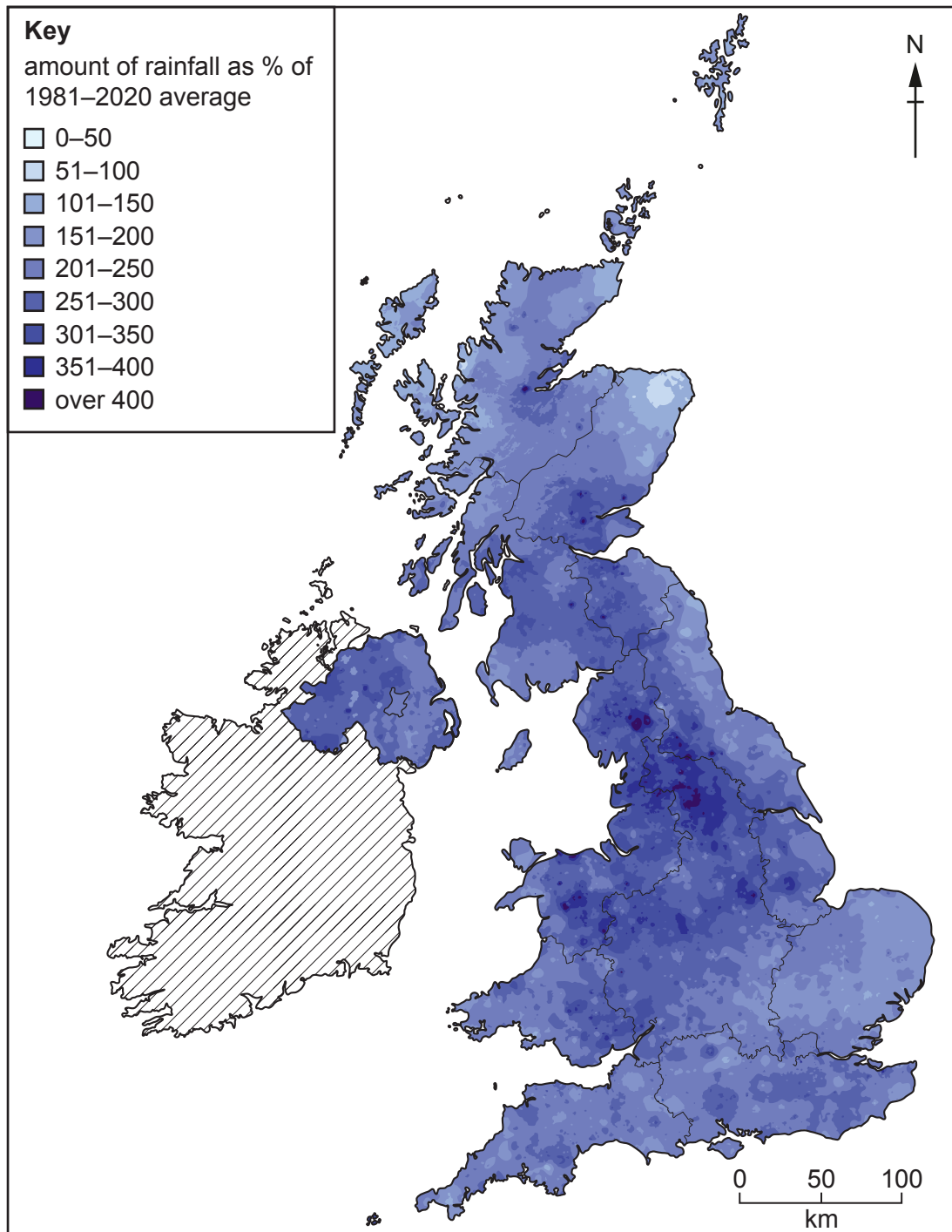


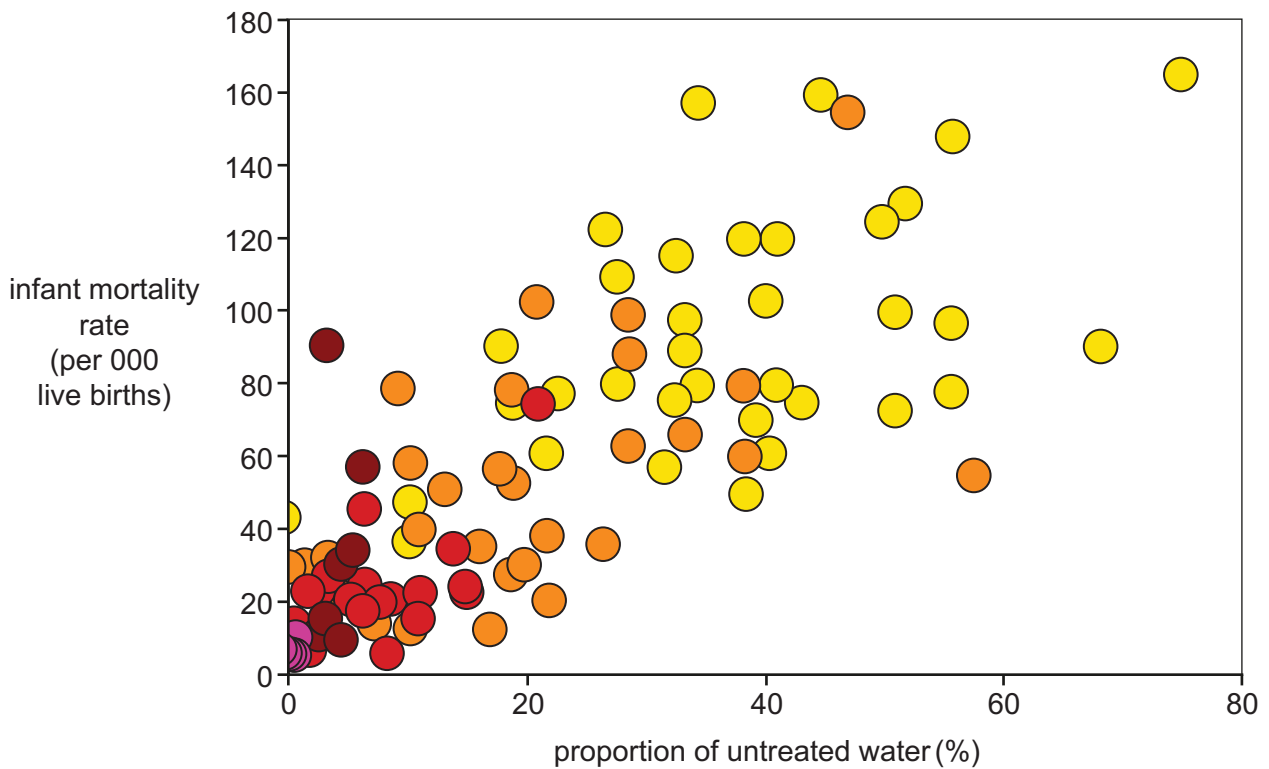
Fig. 4.1 for Question 4

The total crime rate and incidence rates (per 1000 population) of three types of crime in selected regions of England for the year ending September 2019

region	total crime rate /000	incidence rates /000		
		violence against persons	sex offences	burglary
North East	107.2	36.1	3.2	6.6
North West	93.6	34.8	2.8	6.5
West Midlands	80.2	27.4	2.7	7.4
London	102.4	24.7	2.3	9.2
South East	78.5	27.3	2.7	5.3
South West	67.3	23.3	2.4	4.6

Fig. 5.1 for Question 5

The relationships between the proportion of water supply that is untreated, infant mortality rate and Gross Domestic Product (GDP) per capita



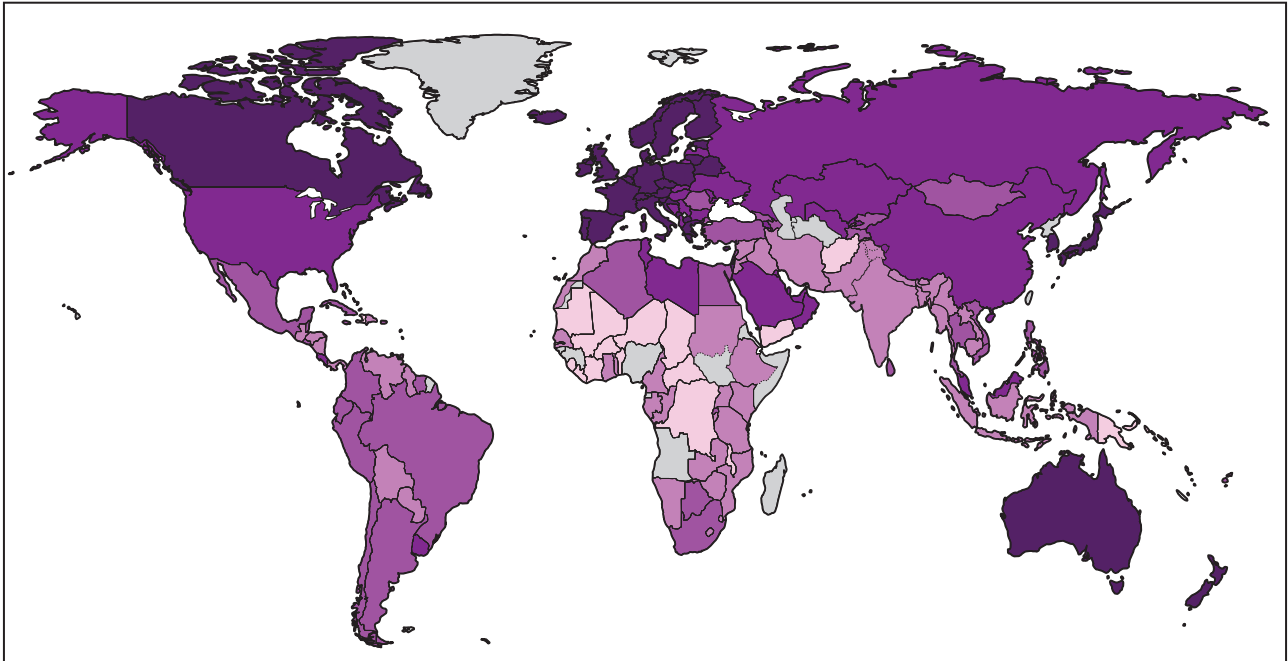
GDP per capita
(US\$)

- < 2000
- 2000–4999
- 5000–9999
- 10 000–19 999
- greater than or equal to 20 000







each circle represents an individual country

Fig. 6.1 for Question 6

The global distribution of the Gender Inequality Index (GII), 2019

**Key**

Gender Inequality Index value

-  <0.15
-  0.16–0.30
-  0.31–0.45
-  0.46–0.60
-  >0.60
-  no data

higher values indicate lower gender inequalities

BLANK PAGE

The boundaries and names shown, the designations used and the presentation of material on any maps contained in this question paper/insert do not imply official endorsement or acceptance by Cambridge Assessment International Education concerning the legal status of any country, territory, or area or any of its authorities, or of the delimitation of its frontiers or boundaries.

Permission to reproduce items where third-party owned material protected by copyright is included has been sought and cleared where possible. Every reasonable effort has been made by the publisher (UCLES) to trace copyright holders, but if any items requiring clearance have unwittingly been included, the publisher will be pleased to make amends at the earliest possible opportunity.

To avoid the issue of disclosure of answer-related information to candidates, all copyright acknowledgements are reproduced online in the Cambridge Assessment International Education Copyright Acknowledgements Booklet. This is produced for each series of examinations and is freely available to download at www.cambridgeinternational.org after the live examination series.

Cambridge Assessment International Education is part of Cambridge Assessment. Cambridge Assessment is the brand name of the University of Cambridge Local Examinations Syndicate (UCLES), which is a department of the University of Cambridge.